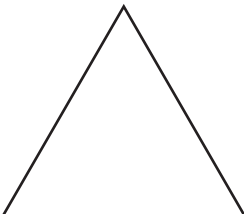
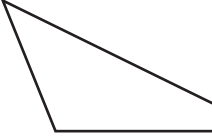
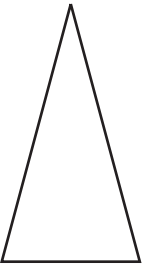
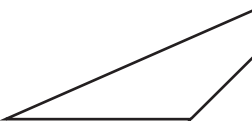
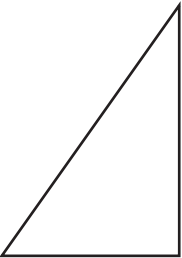


Name : \_\_\_\_\_

## Classifying Triangles

Sheet 1

Tick the boxes that apply to each triangle.

Triangle	Equilateral	Isosceles	Scalene	Acute	Obtuse	Right
1) 						
2) 						
3) 						
4) 						
5) 						

# PREVIEW

Access the largest collection of worksheets for just **\$19.95** per year!

Members, please log in to download this worksheet.

**Log in**

Not a member? Please sign up to gain complete access.

**Sign up**

[www.mathworksheets4kids.com](http://www.mathworksheets4kids.com)

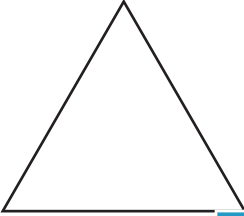
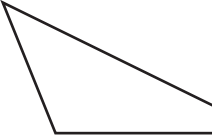
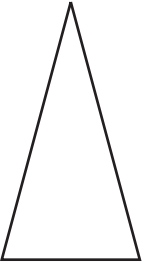
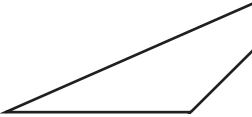
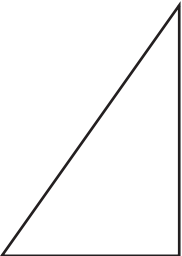
Name : \_\_\_\_\_

**Answer key**

**Classifying Triangles**

Sheet 1

Tick the boxes that apply to each triangle.

Triangle	Equilateral	Isosceles	Scalene	Acute	Obtuse	Right
1) 	✓	✓		✓		
2) 					✓	
3) 		✓		✓		
4) 					✓	
5) 			✓			✓

# PREVIEW

Access the largest collection of worksheets for just **\$19.95** per year!

Members, please log in to download this worksheet.

Log in

Not a member? Please sign up to gain complete access.

Sign up

[www.mathworksheets4kids.com](http://www.mathworksheets4kids.com)