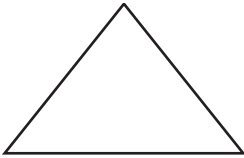
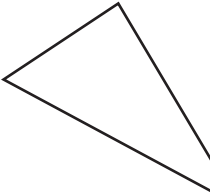
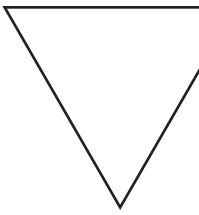
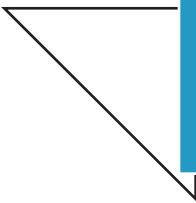
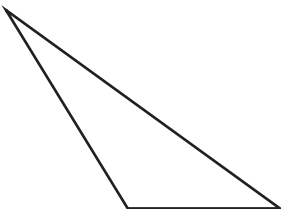


Name : _____

Classifying Triangles

Sheet 3

Tick the boxes that apply to each triangle.

Triangle	Equilateral	Isosceles	Scalene	Acute	Obtuse	Right
1) 						
2) 						
3) 						
4) 						
5) 						

PREVIEW

Access the largest collection of worksheets for just **\$19.95** per year!

Members, please log in to download this worksheet.

Not a member? Please sign up to gain complete access.

[Log in](#) [Sign up](#)

www.mathworksheets4kids.com

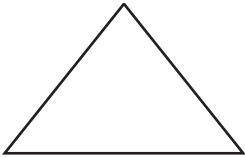
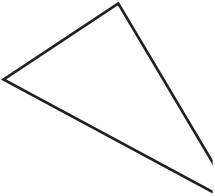
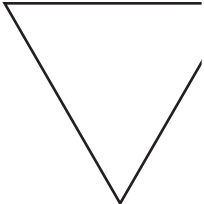
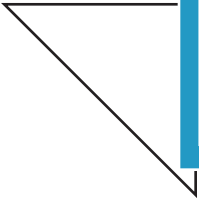
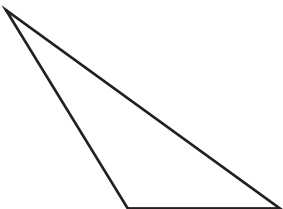
Name : _____

Answer key

Classifying Triangles

Sheet 3

Tick the boxes that apply to each triangle.

Triangle	Equilateral	Isosceles	Scalene	Acute	Obtuse	Right
1) 		✓		✓		
2) 						
3) 						
4) 						✓
5) 			✓		✓	

PREVIEW

Access the largest collection of
worksheets for just **\$19.95** per year!

Members, please
log in to
download this
worksheet.

Log in

Not a member?
Please sign up to
gain complete
access.

Sign up

www.mathworksheets4kids.com