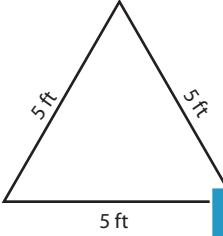
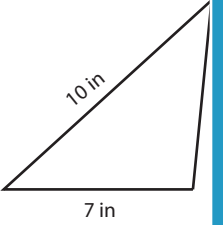
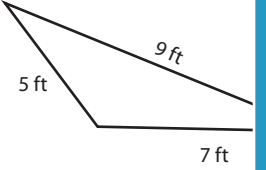
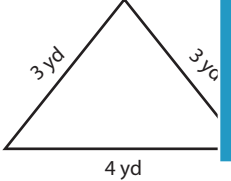
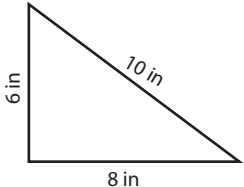


Name : _____

Classifying Triangles

Numerals: S1

Tick the boxes that apply to each triangle.

Triangle	Equilateral	Isosceles	Scalene	Acute	Obtuse	Right
1) 						
2) 						
3) 						
4) 						
5) 						

PREVIEW

Access the largest collection of
worksheets for just **\$19.95** per year!

Members, please
log in to
download this
worksheet.

Log in

Not a member?
Please sign up to
gain complete
access.

Sign up

www.mathworksheets4kids.com

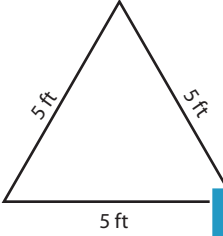
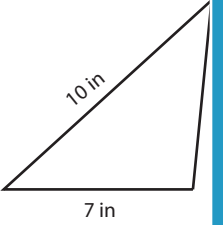
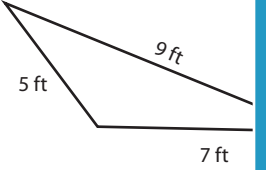
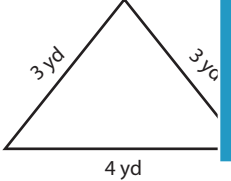
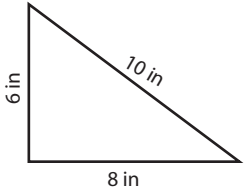
Name : _____

Answer key

Classifying Triangles

Numerals: S1

Tick the boxes that apply to each triangle.

Triangle	Equilateral	Isosceles	Scalene	Acute	Obtuse	Right
1) 	✓	✓		✓		
2) 					✓	
3) 					✓	
4) 						
5) 			✓			✓

PREVIEW

Access the largest collection of
worksheets for just **\$19.95** per year!

Members, please
log in to
download this
worksheet.

Log in

Not a member?
Please sign up to
gain complete
access.

Sign up

www.mathworksheets4kids.com