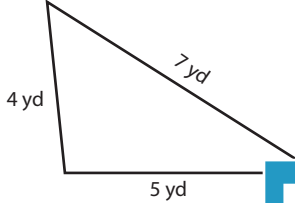
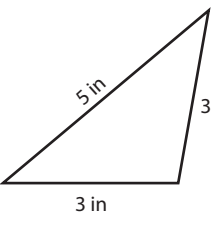
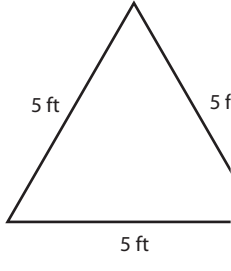
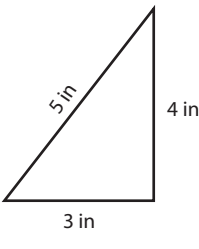
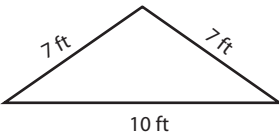


Name : _____

Classifying Triangles

Numerals: S2

Tick the boxes that apply to each triangle.

Triangle	Equilateral	Isosceles	Scalene	Acute	Obtuse	Right
<p>1)</p> 						
<p>2)</p> 						
<p>3)</p> 						
<p>4)</p> 						
<p>5)</p> 						

PREVIEW

Access the largest collection of
worksheets for just **\$19.95** per year!

Members, please
log in to
download this
worksheet.

Log in

Not a member?
Please sign up to
gain complete
access.

Sign up

www.mathworksheets4kids.com

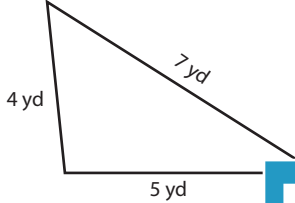
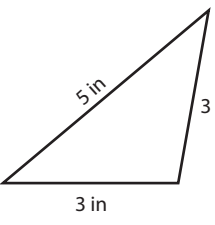
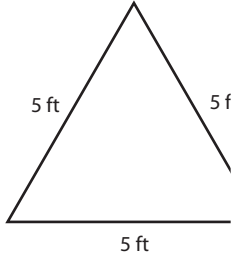
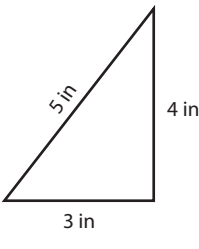
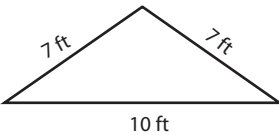
Name : _____

Answer key

Classifying Triangles

Numerals: S2

Tick the boxes that apply to each triangle.

Triangle	Equilateral	Isosceles	Scalene	Acute	Obtuse	Right
1) 			✓		✓	
2) 					✓	
3) 						
4) 						✓
5) 		✓			✓	

PREVIEW

Access the largest collection of worksheets for just **\$19.95** per year!

Members, please log in to download this worksheet.

Log in

Not a member? Please sign up to gain complete access.

Sign up

www.mathworksheets4kids.com