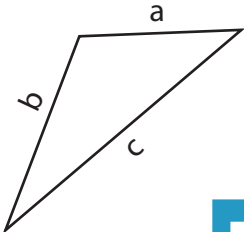
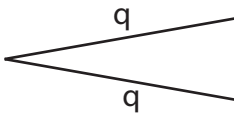
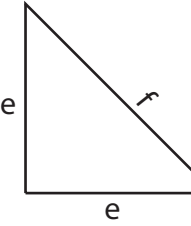
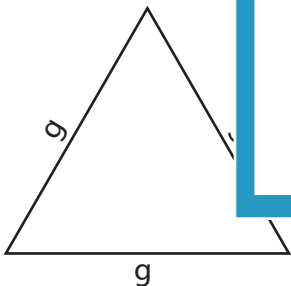
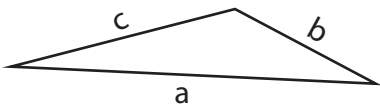


Name : \_\_\_\_\_

## Classifying Triangles

Variables: S1

Tick the boxes that apply to each triangle.

Triangle	Equilateral	Isosceles	Scalene	Acute	Obtuse	Right
1) 						
2) 						
3) 						
4) 						
5) 						

# PREVIEW

Access the largest collection of  
worksheets for just **\$19.95** per year!

Members, please  
log in to  
download this  
worksheet.

**Log in**

Not a member?  
Please sign up to  
gain complete  
access.

**Sign up**

[www.mathworksheets4kids.com](http://www.mathworksheets4kids.com)

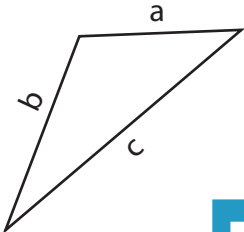
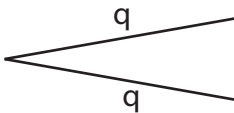
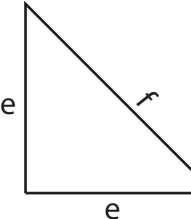
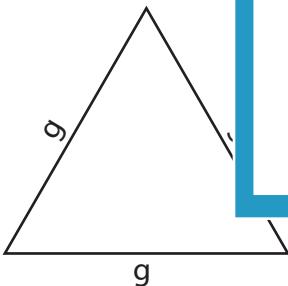
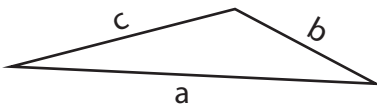
Name : \_\_\_\_\_

**Answer key**

**Classifying Triangles**

Variables: S1

Tick the boxes that apply to each triangle.

Triangle	Equilateral	Isosceles	Scalene	Acute	Obtuse	Right
1) 			✓		✓	
2) 						
3) 						✓
4) 						
5) 			✓		✓	

# PREVIEW

Access the largest collection of  
worksheets for just **\$19.95** per year!

Members, please  
log in to  
download this  
worksheet.

Log in

Not a member?  
Please sign up to  
gain complete  
access.

Sign up

[www.mathworksheets4kids.com](http://www.mathworksheets4kids.com)