

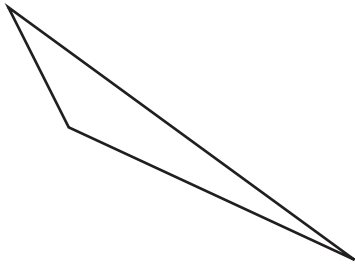
Name : _____

Angles: S3

Identifying Triangles

Identify each triangle based on angles. (Acute, Obtuse or Right)

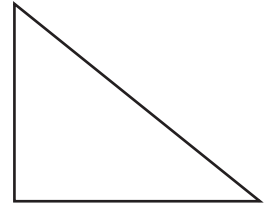
1)



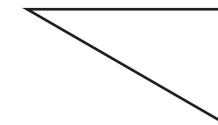
2)



3)



4)



PREVIEW

Access the largest collection of
worksheets for just **\$19.95** per year!

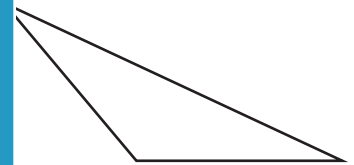
Members, please
log in to
download this
worksheet.

Log in

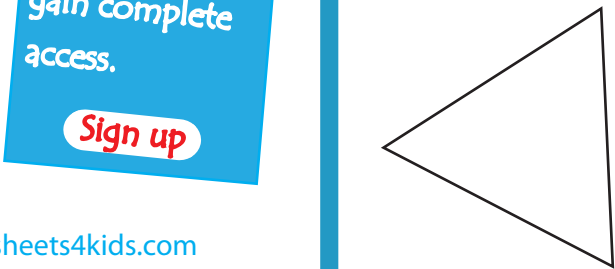
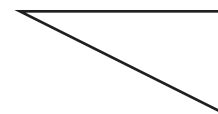
Not a member?
Please sign up to
gain complete
access.

Sign up

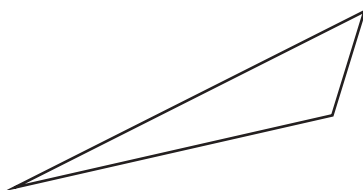
www.mathworksheets4kids.com



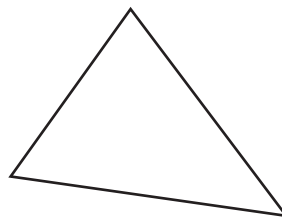
7)



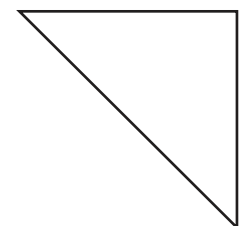
10)



11)



12)



Name : _____

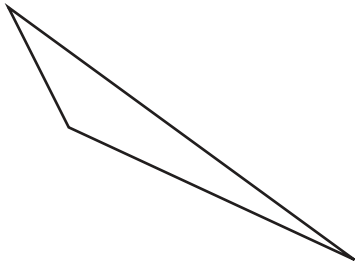
Answer key

Angles: S3

Identifying Triangles

Identify each triangle based on angles. (Acute, Obtuse or Right)

1)

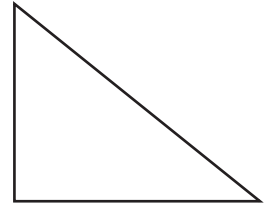


Obtuse triangle

2)

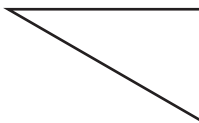


3)



Right triangle

4)



Acute triangle

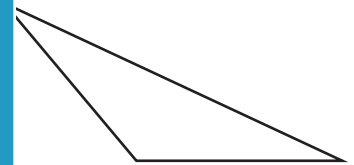
PREVIEW

Access the largest collection of worksheets for just **\$19.95** per year!

Members, please log in to download this worksheet. **Log in**

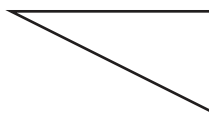
Not a member? Please sign up to gain complete access. **Sign up**

www.mathworksheets4kids.com

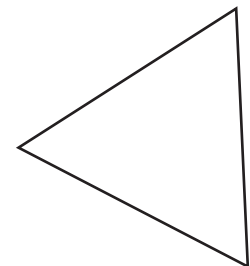


Obtuse triangle

7)

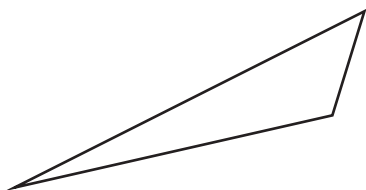


Right triangle



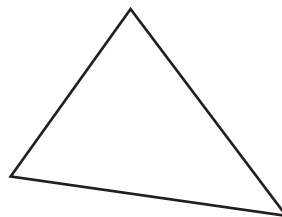
Acute triangle

10)



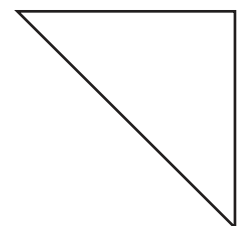
Obtuse triangle

11)



Acute triangle

12)



Right triangle