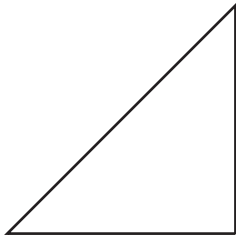


# Identifying Triangles

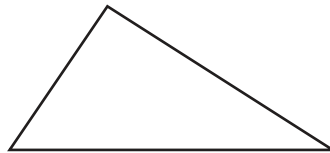
Identify each triangle based on sides. (Equilateral, Isosceles or Scalene)

1)



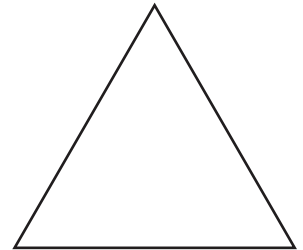
\_\_\_\_\_

2)



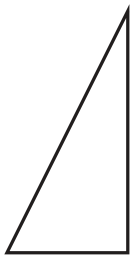
\_\_\_\_\_

3)



\_\_\_\_\_

4)



\_\_\_\_\_

# PREVIEW

Access the largest collection of worksheets for just **\$19.95** per year!

Members, please log in to download this worksheet.

**Log in**

Not a member? Please sign up to gain complete access.

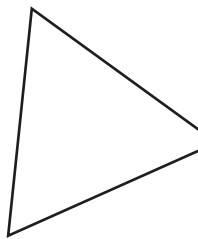
**Sign up**

[www.mathworksheets4kids.com](http://www.mathworksheets4kids.com)

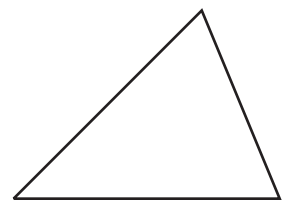


\_\_\_\_\_

7)

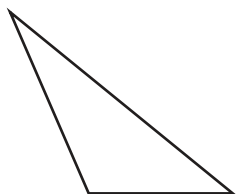


\_\_\_\_\_



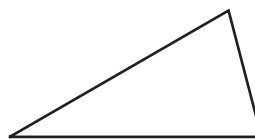
\_\_\_\_\_

10)



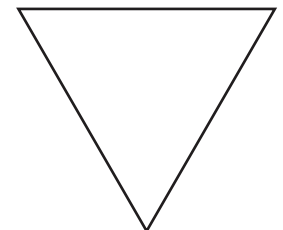
\_\_\_\_\_

11)



\_\_\_\_\_

12)

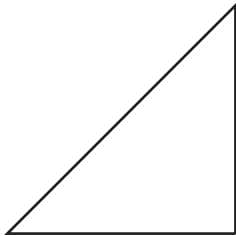


\_\_\_\_\_

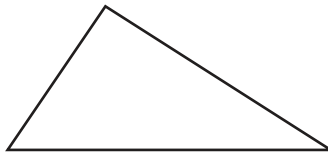
Identifying Triangles

Identify each triangle based on sides. (Equilateral, Isosceles or Scalene)

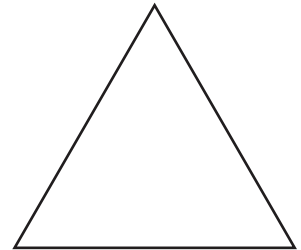
1)



2)



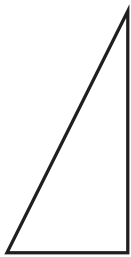
3)



Isosceles triangle

Equilateral triangle

4)



**PREVIEW**

Access the largest collection of worksheets for just **\$19.95** per year!

Members, please log in to download this worksheet.

**Log in**

Not a member? Please sign up to gain complete access.

**Sign up**

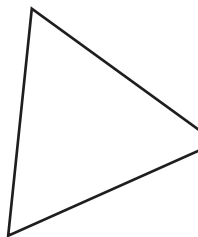
[www.mathworksheets4kids.com](http://www.mathworksheets4kids.com)



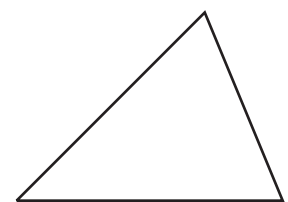
Scalene triangle

Isosceles triangle

7)

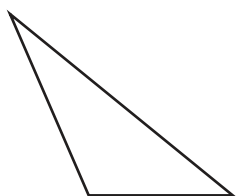


Equilateral triangle



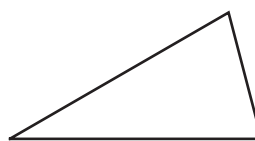
Isosceles triangle

10)



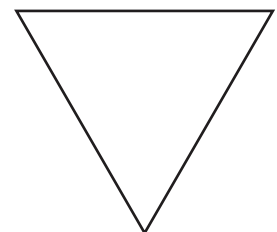
Scalene triangle

11)



Isosceles triangle

12)



Equilateral triangle