

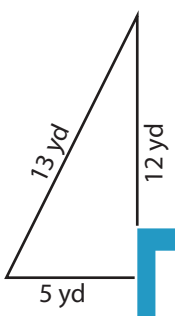
Name : _____

Triangle - Perimeter

Congruent sides: S2

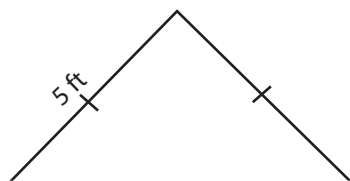
Find the perimeter of each triangle.

1)



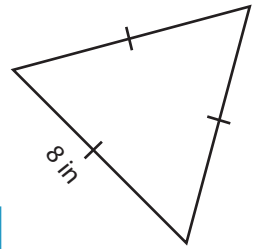
Perimeter =

2)

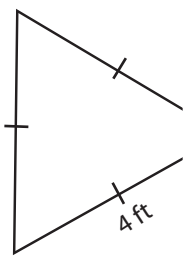


Perimeter =

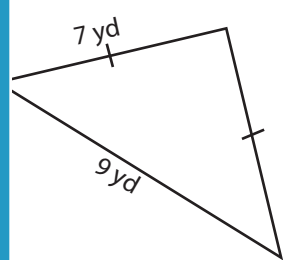
3)



4)

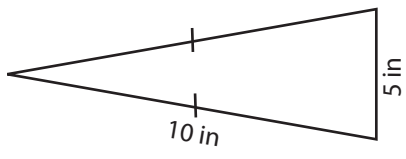


Perimeter =

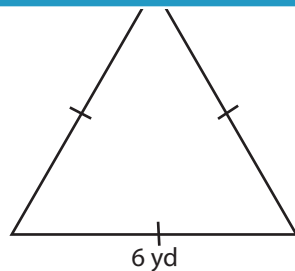


Perimeter =

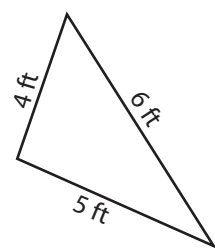
7)



Perimeter =



Perimeter =



Perimeter =

PREVIEW

Access the largest collection of worksheets for just **\$19.95** per year!

Members, please log in to download this worksheet. **Log in**

Not a member? Please sign up to gain complete access. **Sign up**

www.mathworksheets4kids.com

Name : _____

Answer key

Triangle - Perimeter

Congruent sides: S2

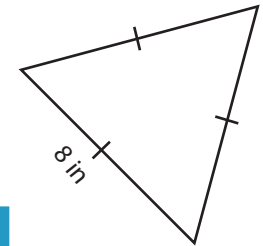
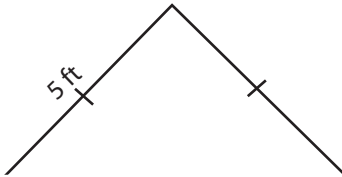
Find the perimeter of each triangle.

1)



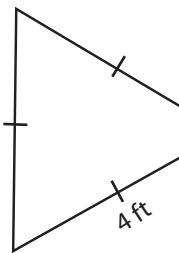
Perimeter = **30 yd**

2)

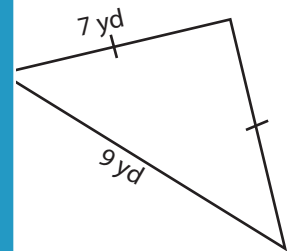


Perimeter = **24 in**

4)

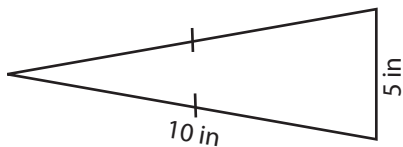


Perimeter = **12 ft**

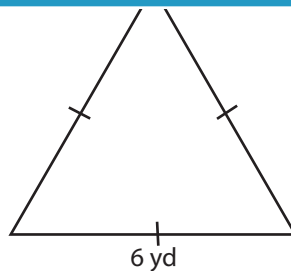


Perimeter = **23 yd**

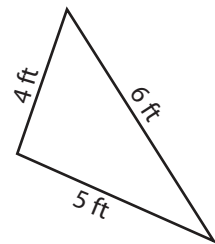
7)



Perimeter = **25 in**



Perimeter = **18 yd**



Perimeter = **15 ft**

PREVIEW

Access the largest collection of worksheets for just **\$19.95** per year!

Members, please log in to download this worksheet. **Log in**

Not a member? Please sign up to gain complete access. **Sign up**

www.mathworksheets4kids.com