

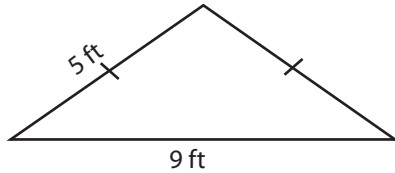
Name : _____

Triangle - Perimeter

Congruent sides: S3

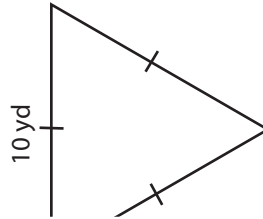
Find the perimeter of each triangle.

1)

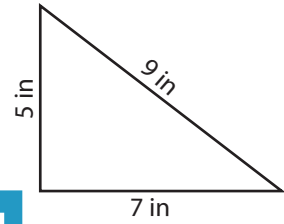


Perimeter =

2)

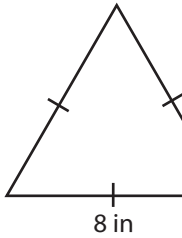


3)



Perimeter =

4)



Perimeter =

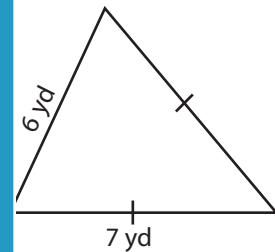
PREVIEW

Access the largest collection of worksheets for just **\$19.95** per year!

Members, please log in to download this worksheet. **Log in**

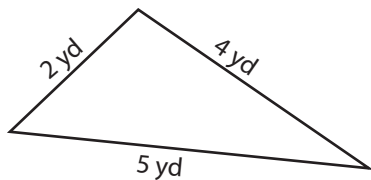
Not a member? Please sign up to gain complete access. **Sign up**

www.mathworksheets4kids.com

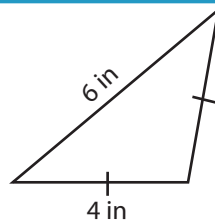


Perimeter =

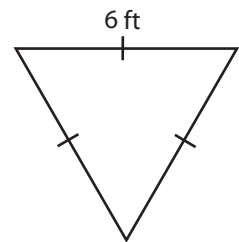
7)



Perimeter =



Perimeter =



Perimeter =

Name : _____

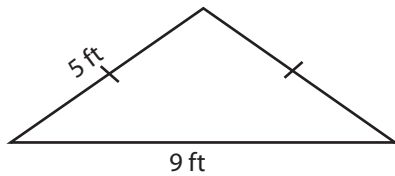
Answer key

Triangle - Perimeter

Congruent sides: S3

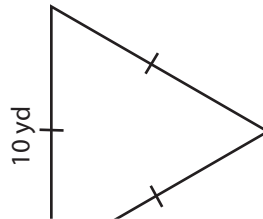
Find the perimeter of each triangle.

1)

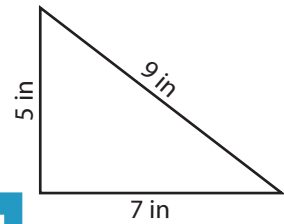


Perimeter = **19**

2)

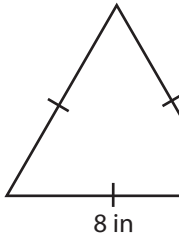


3)



Perimeter = **21 in**

4)



Perimeter = **24 in**

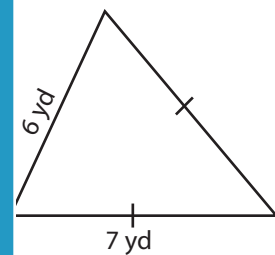
PREVIEW

Access the largest collection of worksheets for just **\$19.95** per year!

Members, please log in to download this worksheet. **Log in**

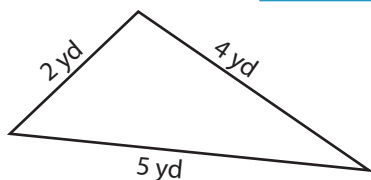
Not a member? Please sign up to gain complete access. **Sign up**

www.mathworksheets4kids.com

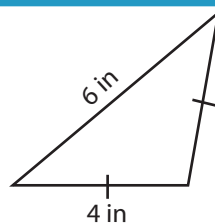


Perimeter = **20 yd**

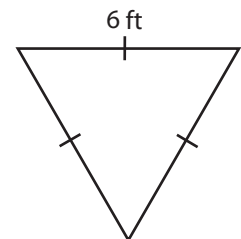
7)



Perimeter = **11 yd**



Perimeter = **14 in**



Perimeter = **18 ft**