

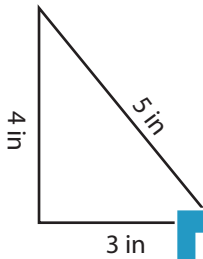
Name : _____

Triangle - Perimeter

Sheet 1

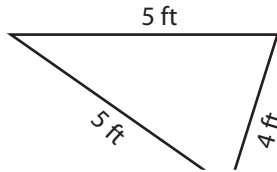
Find the perimeter of each triangle.

1)



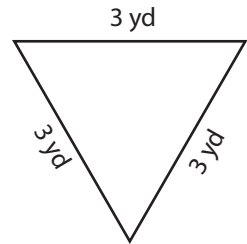
Perimeter =

2)



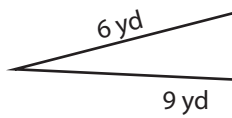
Perimeter =

3)



Perimeter =

4)



Perimeter =

Access the largest collection of worksheets for just **\$19.95** per year!

Members, please log in to download this worksheet.

Log in

Not a member? Please sign up to gain complete access.

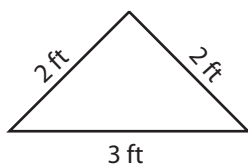
Sign up

www.mathworksheets4kids.com

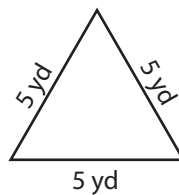


Perimeter =

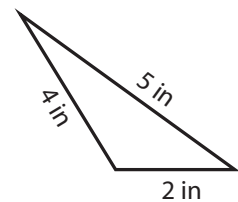
7)



Perimeter =



Perimeter =



Perimeter =

Name : _____

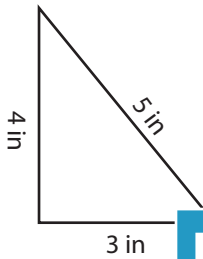
Answer key

Triangle - Perimeter

Sheet 1

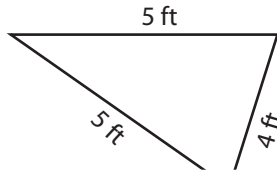
Find the perimeter of each triangle.

1)



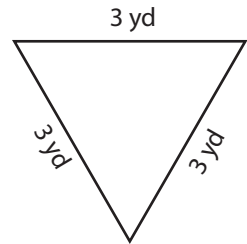
Perimeter = **12**

2)

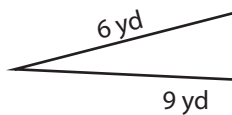


Perimeter = **9 yd**

3)



4)



Perimeter = **20 yd**

PREVIEW

Access the largest collection of worksheets for just **\$19.95** per year!

Members, please log in to download this worksheet. **Log in**

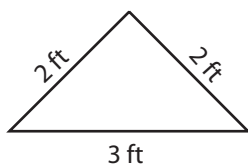
Not a member? Please sign up to gain complete access. **Sign up**

www.mathworksheets4kids.com

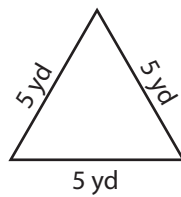


Perimeter = **19 ft**

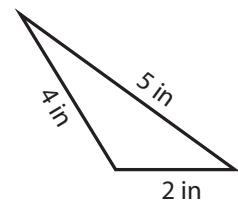
7)



Perimeter = **7 ft**



Perimeter = **15 yd**



Perimeter = **11 in**