

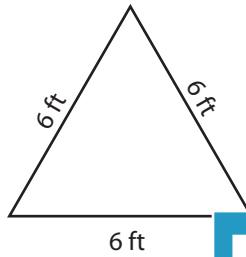
Name : \_\_\_\_\_

## Triangle - Perimeter

Sheet 2

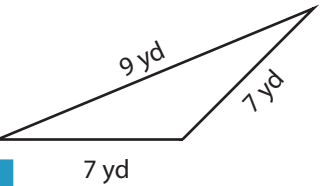
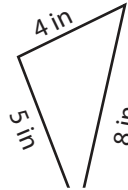
Find the perimeter of each triangle.

1)



Perimeter =

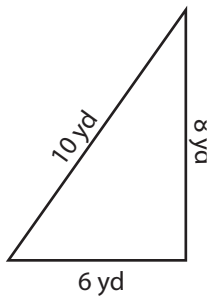
2)



Perimeter =

3)

4)



Perimeter =

Access the largest collection of worksheets for just **\$19.95** per year!

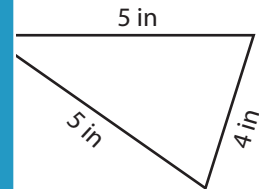
Members, please log in to download this worksheet.

**Log in**

Not a member? Please sign up to gain complete access.

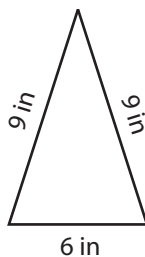
**Sign up**

[www.mathworksheets4kids.com](http://www.mathworksheets4kids.com)

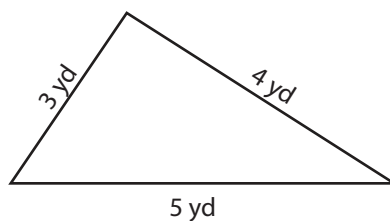


Perimeter =

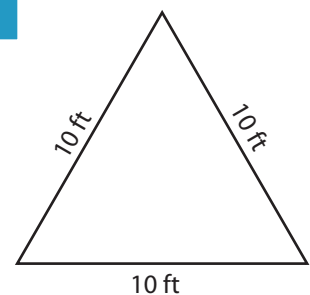
7)



Perimeter =



Perimeter =



Perimeter =

Name : \_\_\_\_\_

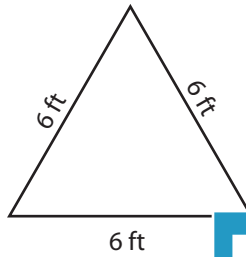
**Answer key**

**Triangle - Perimeter**

Sheet 2

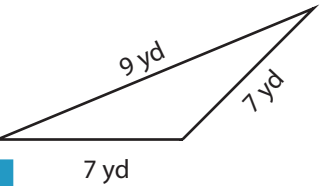
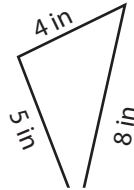
Find the perimeter of each triangle.

1)



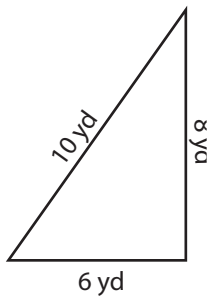
Perimeter = **18**

2)

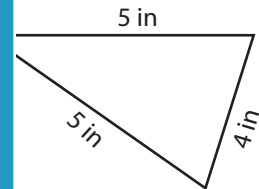


Perimeter = **23 yd**

4)

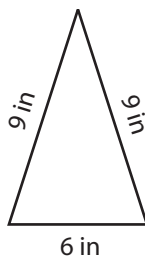


Perimeter = **24 yd**

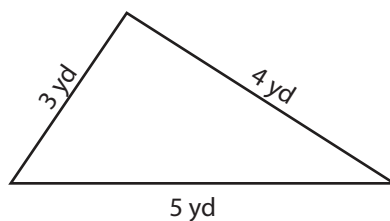


Perimeter = **14 in**

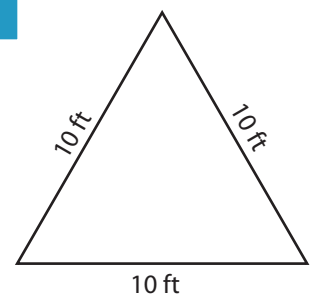
7)



Perimeter = **24 in**



Perimeter = **12 yd**



Perimeter = **30 ft**

**PREVIEW**

Access the largest collection of worksheets for just **\$19.95** per year!

Members, please log in to download this worksheet. **Log in**

Not a member? Please sign up to gain complete access. **Sign up**

[www.mathworksheets4kids.com](http://www.mathworksheets4kids.com)