

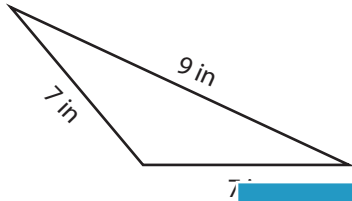
Name : _____

Triangle - Perimeter

Sheet 3

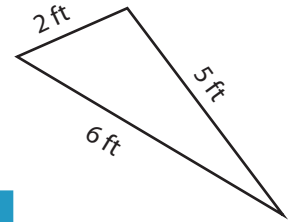
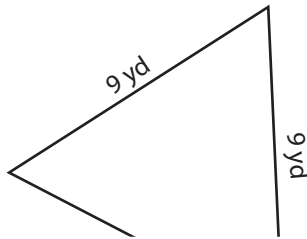
Find the perimeter of each triangle.

1)

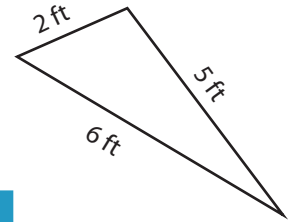


Perimeter =

2)

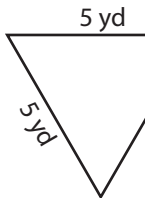


3)



Perimeter =

4)



Perimeter =

Access the largest collection of worksheets for just **\$19.95** per year!

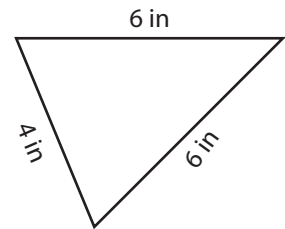
Members, please log in to download this worksheet.

Log in

Not a member? Please sign up to gain complete access.

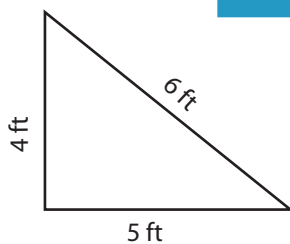
Sign up

www.mathworksheets4kids.com

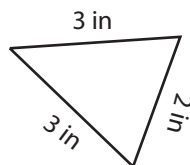


Perimeter =

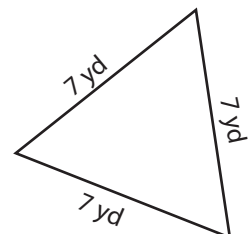
7)



Perimeter =



Perimeter =



Perimeter =

Name : _____

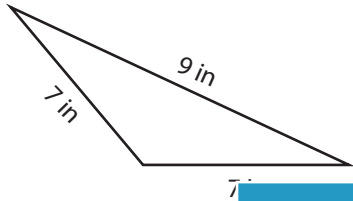
Answer key

Triangle - Perimeter

Sheet 3

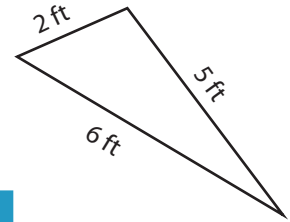
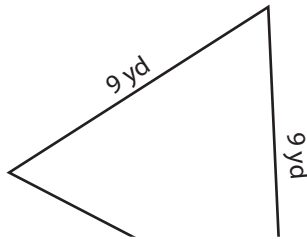
Find the perimeter of each triangle.

1)



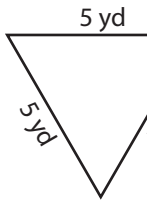
Perimeter = **23**

2)



Perimeter = **13 ft**

4)



Perimeter = **15 yd**

Access the largest collection of worksheets for just **\$19.95** per year!

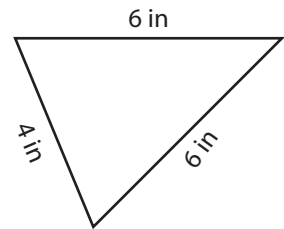
Members, please log in to download this worksheet.

Log in

Not a member? Please sign up to gain complete access.

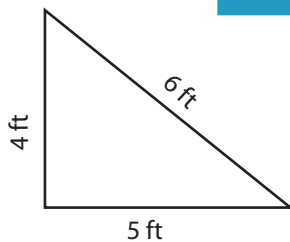
Sign up

www.mathworksheets4kids.com

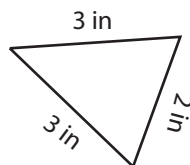


Perimeter = **16 in**

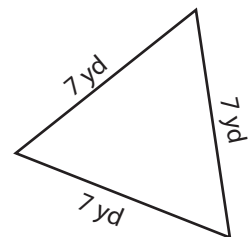
7)



Perimeter = **15 ft**



Perimeter = **8 in**



Perimeter = **21 yd**