

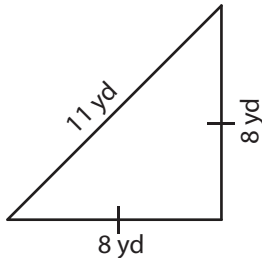
Name : \_\_\_\_\_

## Perimeter of a Triangle

Congruent sides: S2

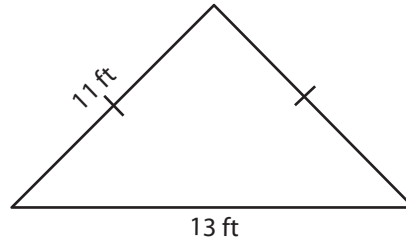
Find the perimeter of each triangle.

1)

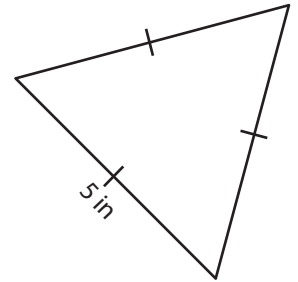


Perimeter = \_\_\_\_\_

2)

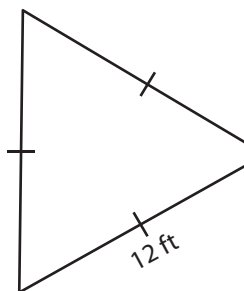


3)



Perimeter = \_\_\_\_\_

4)



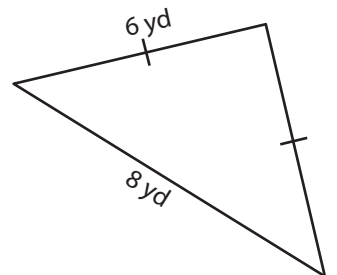
Perimeter = \_\_\_\_\_

**PREVIEW**  
Gain complete access to the largest collection of worksheets in all subjects!

Members, please log in to download this worksheet.

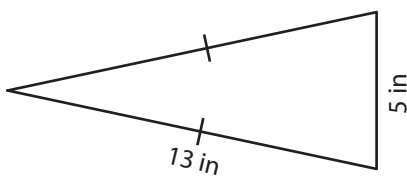
Not a member? Please sign up to gain complete access.

[www.mathworksheets4kids.com](http://www.mathworksheets4kids.com)

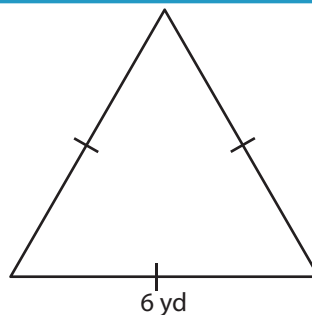


Perimeter = \_\_\_\_\_

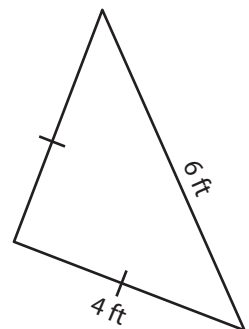
7)



Perimeter = \_\_\_\_\_



Perimeter = \_\_\_\_\_



Perimeter = \_\_\_\_\_

Name : \_\_\_\_\_

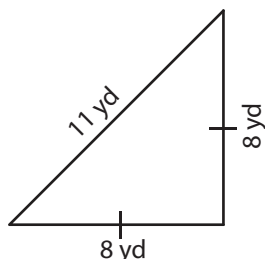
## Answer key

### Perimeter of a Triangle

Congruent sides: S2

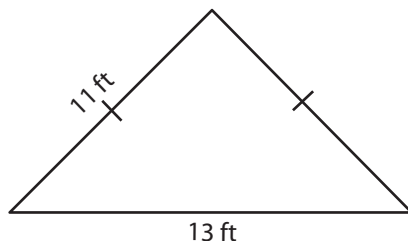
Find the perimeter of each triangle.

1)



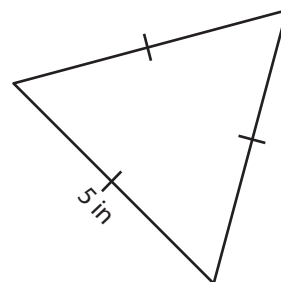
Perimeter = 27 yd

2)



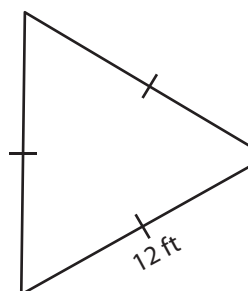
13 ft

3)



Perimeter = 15 in

4)



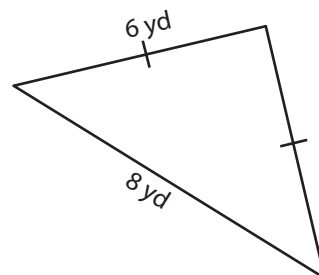
Perimeter = 36 ft

Gain complete access to the largest collection of worksheets in all subjects!

Members, please log in to download this worksheet.

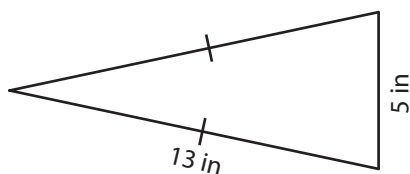
Not a member? Please sign up to gain complete access.

[www.mathworksheets4kids.com](http://www.mathworksheets4kids.com)

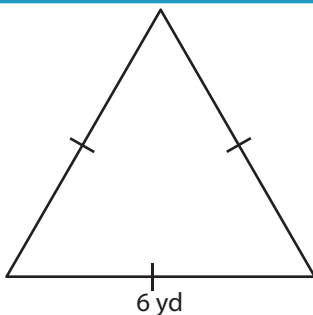


Perimeter = 20 yd

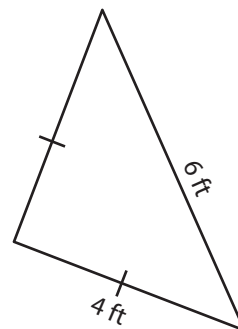
7)



Perimeter = 31 in



Perimeter = 18 yd



Perimeter = 14 ft