

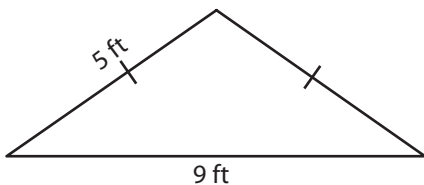
Name : _____

Perimeter of a Triangle

Congruent sides: S3

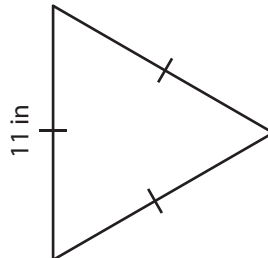
Find the perimeter of each triangle.

1)



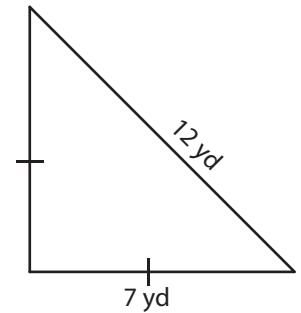
Perimeter = _____

2)

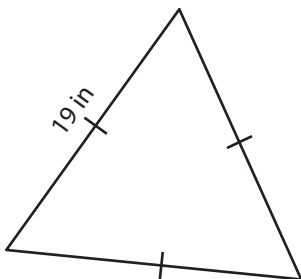


Perimeter = _____

3)



4)



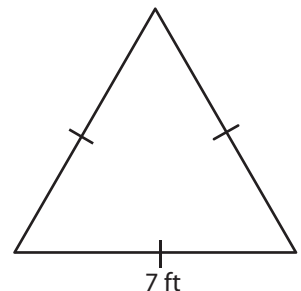
Perimeter = _____

PREVIEW
Gain complete access to the largest collection of worksheets in all subjects!

Members, please log in to download this worksheet.

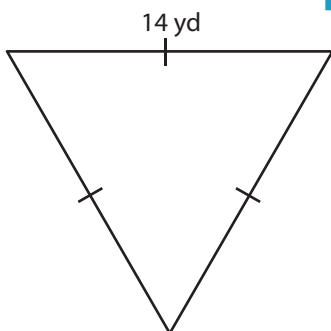
Not a member? Please sign up to gain complete access.

www.mathworksheets4kids.com

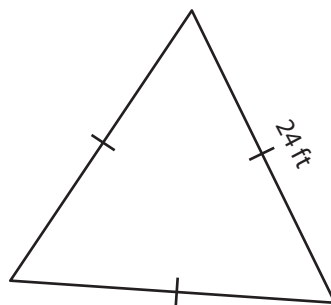


Perimeter = _____

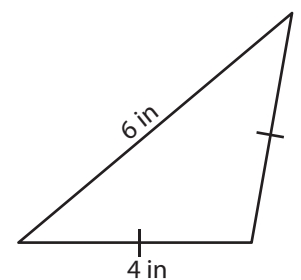
7)



Perimeter = _____



Perimeter = _____



Perimeter = _____

Name : _____

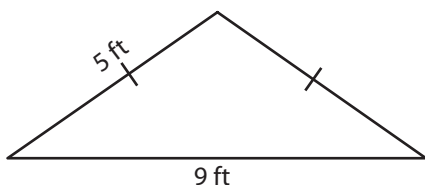
Answer key

Perimeter of a Triangle

Congruent sides: S3

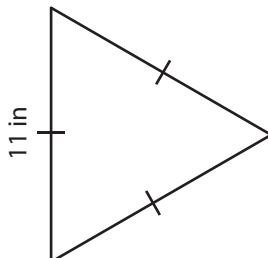
Find the perimeter of each triangle.

1)

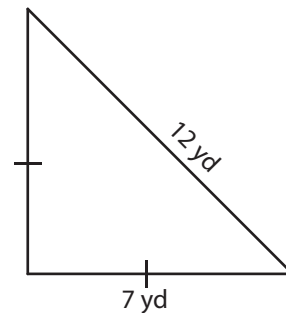


Perimeter = 19 ft

2)



3)



Perimeter = 26 yd

PREVIEW

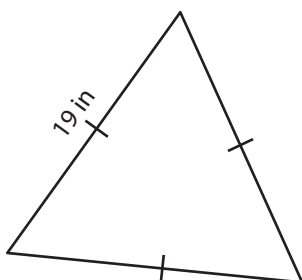
Gain complete access to the largest collection of worksheets in all subjects!

Members, please log in to download this worksheet.

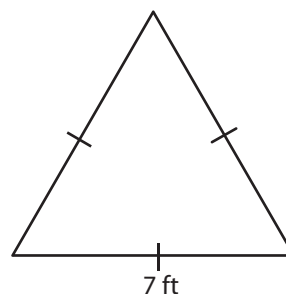
Not a member? Please sign up to gain complete access.

www.mathworksheets4kids.com

4)

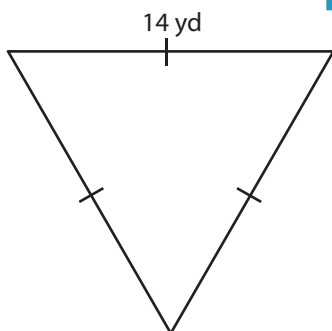


Perimeter = 57 in

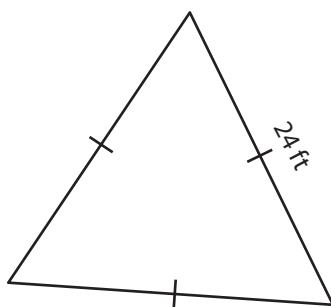


Perimeter = 21 ft

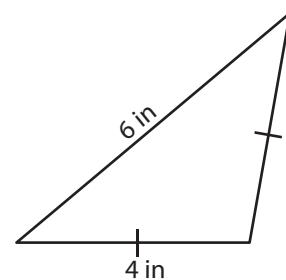
7)



Perimeter = 42 yd



Perimeter = 72 ft



Perimeter = 14 in