

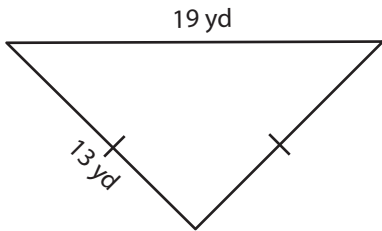
Name : _____

Perimeter of a Triangle

Congruent sides: S5

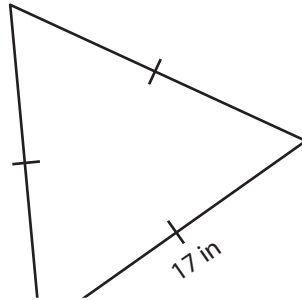
Find the perimeter of each triangle.

1)

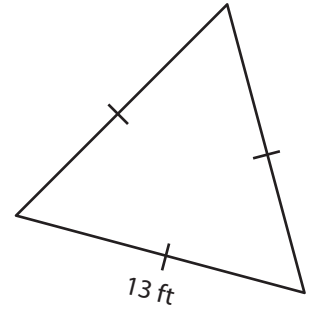


Perimeter = _____

2)

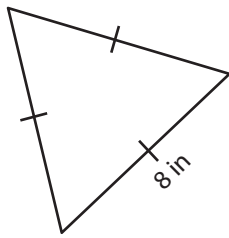


3)



Perimeter = _____

4)



Perimeter = _____

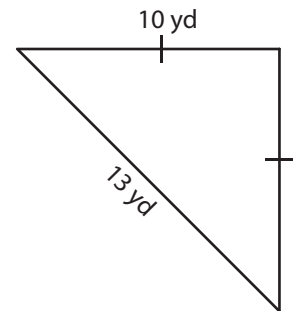
PREVIEW

Gain complete access to the largest collection of worksheets in all subjects!

Members, please log in to download this worksheet.

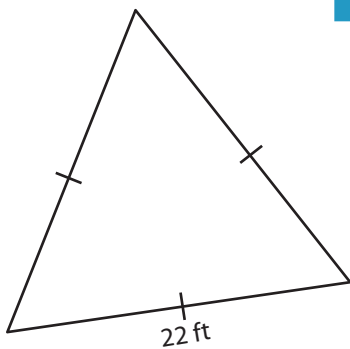
Not a member? Please sign up to gain complete access.

www.mathworksheets4kids.com

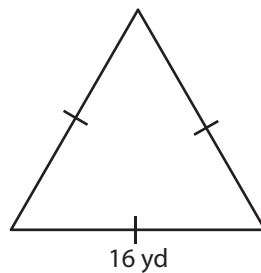


Perimeter = _____

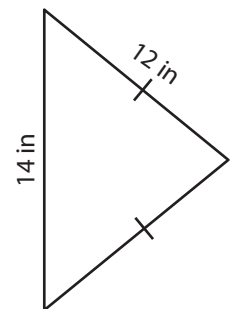
7)



Perimeter = _____



Perimeter = _____



Perimeter = _____

Name : _____

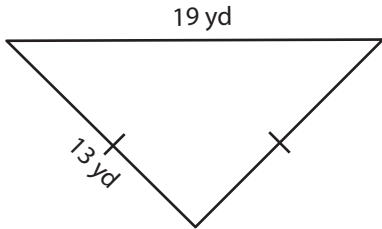
Answer key

Perimeter of a Triangle

Congruent sides: S5

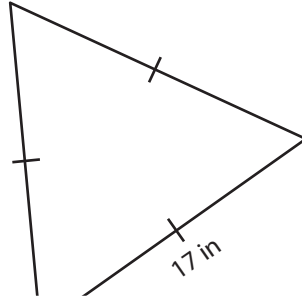
Find the perimeter of each triangle.

1)

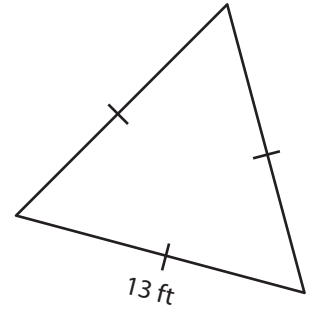


Perimeter = 45 yd

2)



3)



Perimeter = 39 ft

PREVIEW

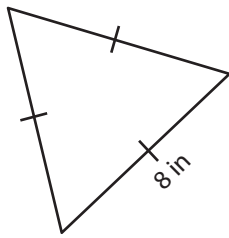
Gain complete access to the largest collection of worksheets in all subjects!

Members, please log in to download this worksheet.

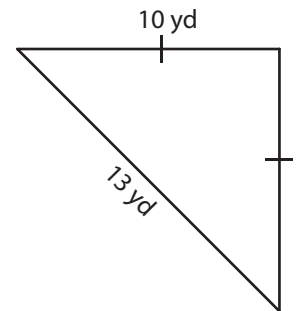
Not a member? Please sign up to gain complete access.

www.mathworksheets4kids.com

4)

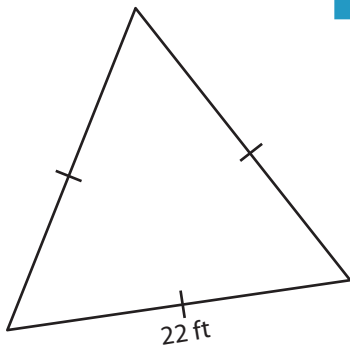


Perimeter = 24 in

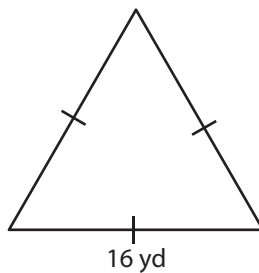


Perimeter = 33 yd

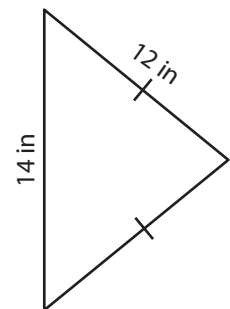
7)



Perimeter = 66 ft



Perimeter = 48 yd



Perimeter = 38 in