

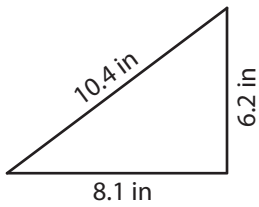
Name : _____

Perimeter of a Triangle

T1S1

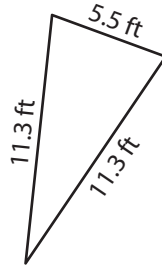
Find the perimeter of each triangle.

1)



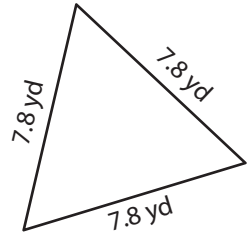
Perimeter = _____

2)



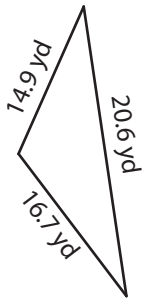
Perimeter = _____

3)



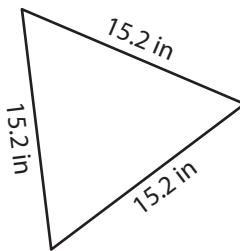
Perimeter = _____

4)



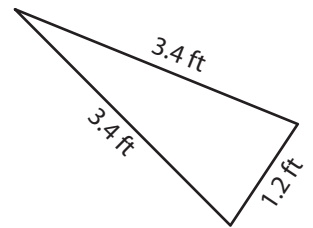
Perimeter = _____

5)



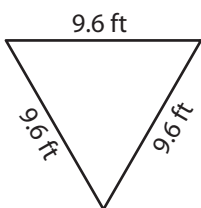
Perimeter = _____

6)



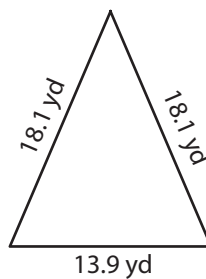
Perimeter = _____

7)



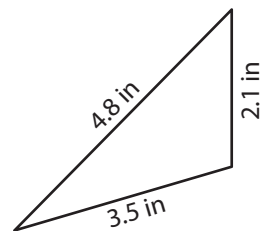
Perimeter = _____

8)



Perimeter = _____

9)



Perimeter = _____

Name : _____

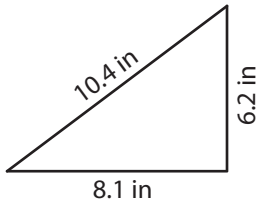
Answer key

T151

Perimeter of a Triangle

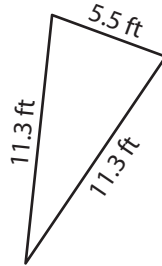
Find the perimeter of each triangle.

1)



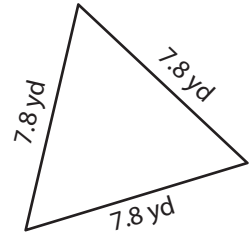
Perimeter = 24.7 in

2)



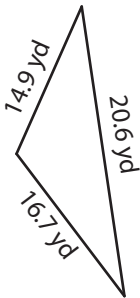
Perimeter = 28.1 ft

3)



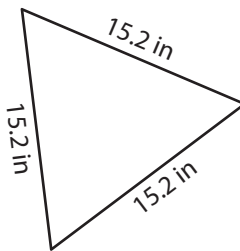
Perimeter = 23.4 yd

4)



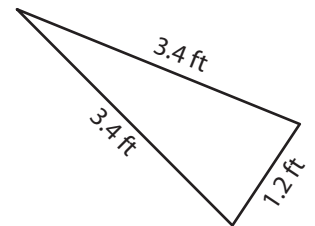
Perimeter = 52.2 yd

5)



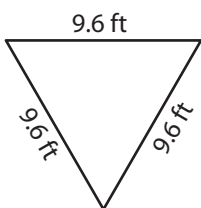
Perimeter = 45.6 in

6)



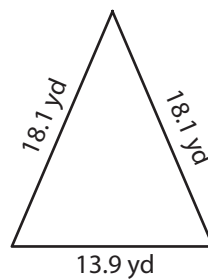
Perimeter = 8 ft

7)



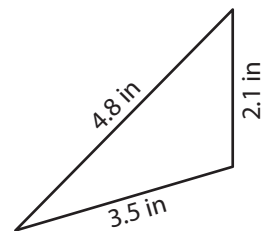
Perimeter = 28.8 ft

8)



Perimeter = 50.1 yd

9)



Perimeter = 10.4 in