

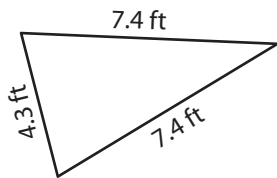
Name : _____

Perimeter of a Triangle

T152

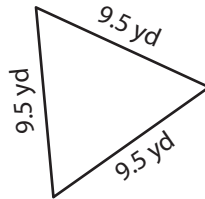
Find the perimeter of each triangle.

1)



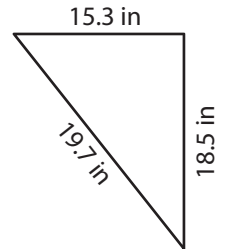
Perimeter = _____

2)

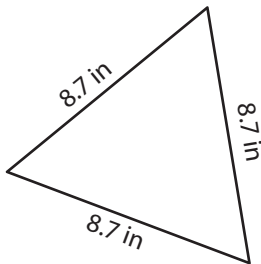


Perimeter = _____

3)



4)



Perimeter = _____

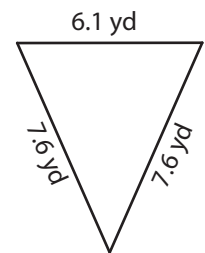
PREVIEW

Gain complete access to the largest collection of worksheets in all subjects!

Members, please log in to download this worksheet.

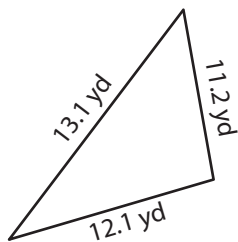
Not a member? Please sign up to gain complete access.

www.mathworksheets4kids.com

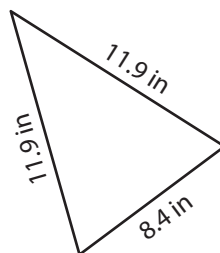


Perimeter = _____

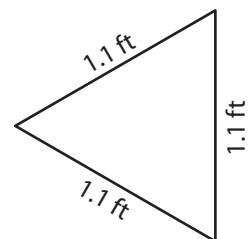
7)



Perimeter = _____



Perimeter = _____



Perimeter = _____

Name : _____

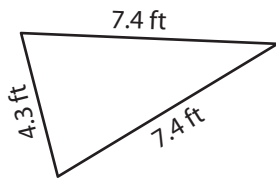
Answer key

T152

Perimeter of a Triangle

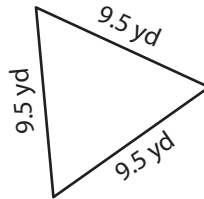
Find the perimeter of each triangle.

1)



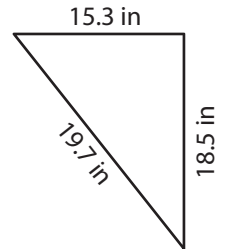
Perimeter = 19.1 ft

2)

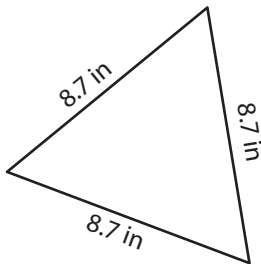


Perimeter = 53.5 in

3)



4)



Perimeter = 26.1 in

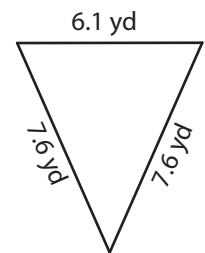
PREVIEW

Gain complete access to the largest collection of worksheets in all subjects!

Members, please log in to download this worksheet.

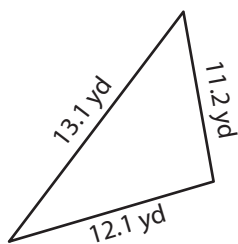
Not a member? Please sign up to gain complete access.

www.mathworksheets4kids.com

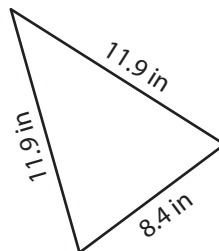


Perimeter = 21.3 yd

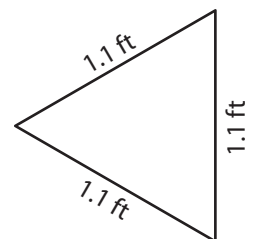
7)



Perimeter = 36.4 yd



Perimeter = 32.2 in



Perimeter = 3.3 ft