

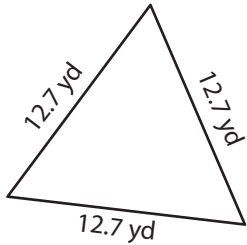
Name : _____

Perimeter of a Triangle

T153

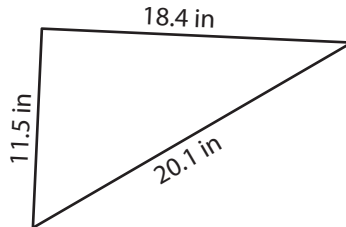
Find the perimeter of each triangle.

1)



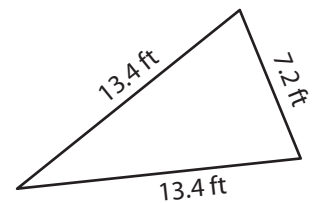
Perimeter = _____

2)

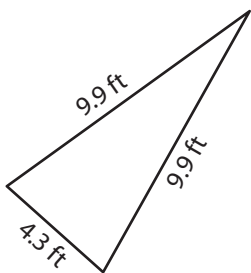


Perimeter = _____

3)



4)



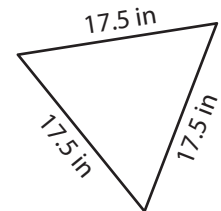
Perimeter = _____

PREVIEW
Gain complete access to the largest
collection of worksheets in all subjects!

Members, please
log in to
download this
worksheet.

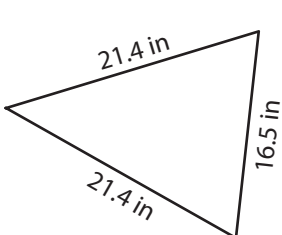
Not a member?
Please sign up to
gain complete
access.

www.mathworksheets4kids.com

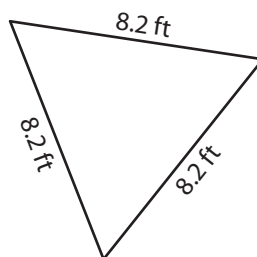


Perimeter = _____

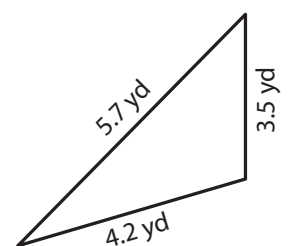
7)



Perimeter = _____



Perimeter = _____



Perimeter = _____

Name : _____

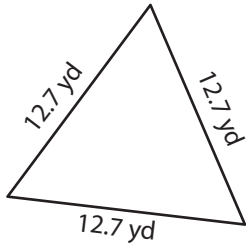
Answer key

T153

Perimeter of a Triangle

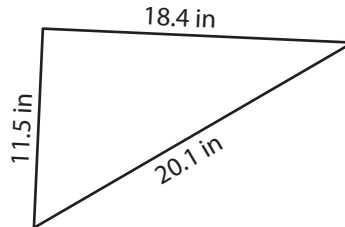
Find the perimeter of each triangle.

1)

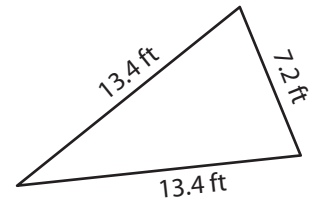


Perimeter = 38.1 yd

2)

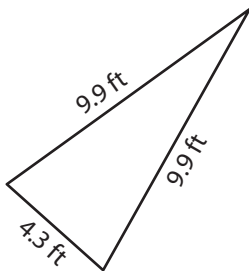


3)



Perimeter = 34 ft

4)



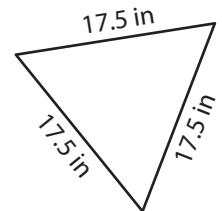
Perimeter = 24.1 ft

Gain complete access to the largest collection of worksheets in all subjects!

Members, please log in to download this worksheet.

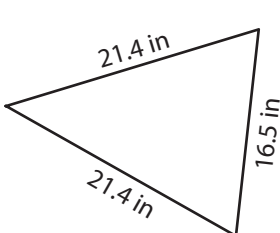
Not a member? Please sign up to gain complete access.

www.mathworksheets4kids.com

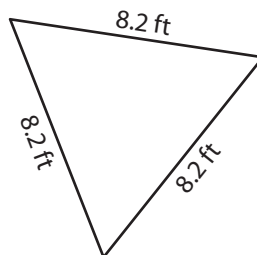


Perimeter = 52.5 in

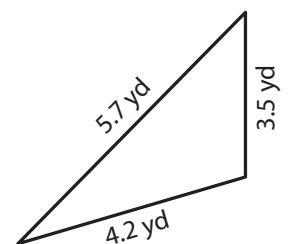
7)



Perimeter = 59.3 in



Perimeter = 24.6 ft



Perimeter = 13.4 yd