

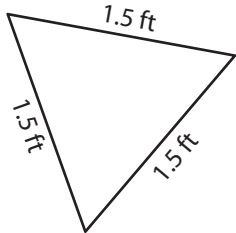
Name : _____

T1S4

Perimeter of a Triangle

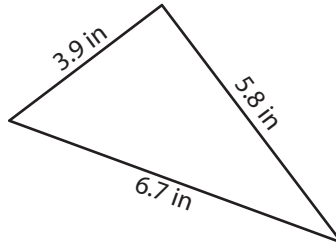
Find the perimeter of each triangle.

1)



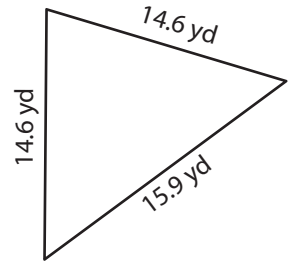
Perimeter = _____

2)

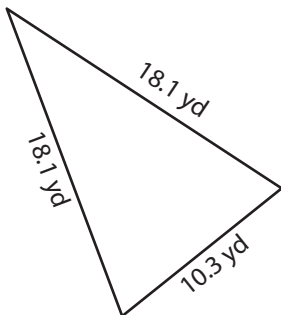


Perimeter = _____

3)



4)



Perimeter = _____

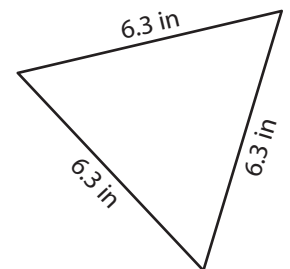
PREVIEW

Gain complete access to the largest collection of worksheets in all subjects!

Members, please log in to download this worksheet.

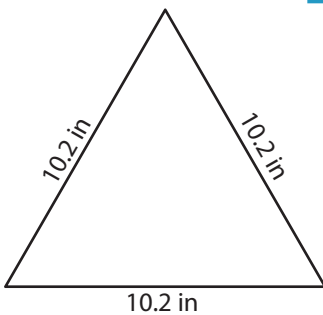
Not a member? Please sign up to gain complete access.

www.mathworksheets4kids.com

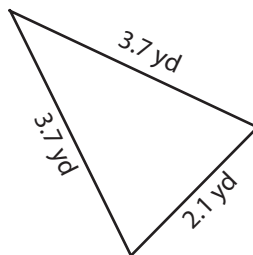


Perimeter = _____

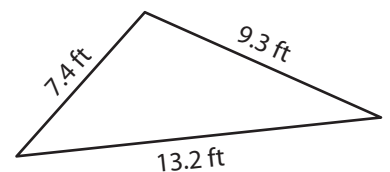
7)



Perimeter = _____



Perimeter = _____



Perimeter = _____

Name : _____

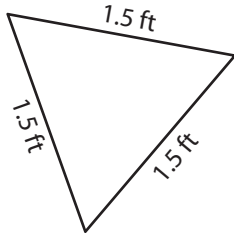
Answer key

T1S4

Perimeter of a Triangle

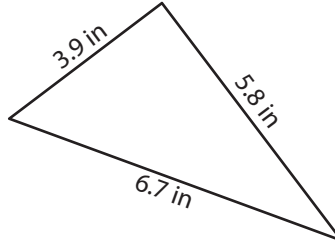
Find the perimeter of each triangle.

1)



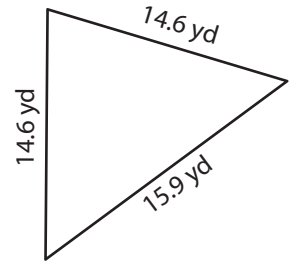
Perimeter = 4.5 ft

2)

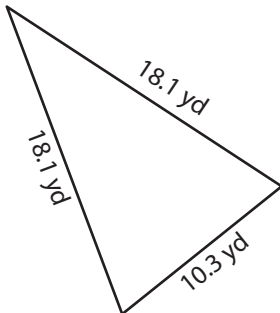


Perimeter = 45.1 yd

3)



4)



Perimeter = 46.5 yd

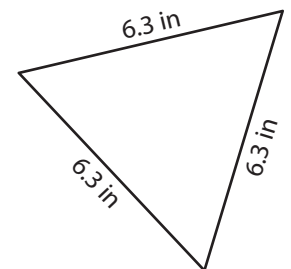
PREVIEW

Gain complete access to the largest collection of worksheets in all subjects!

Members, please log in to download this worksheet.

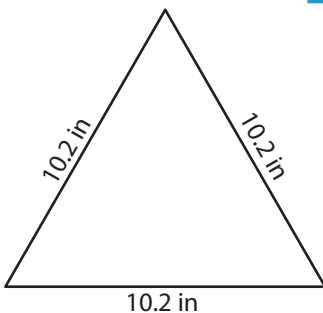
Not a member? Please sign up to gain complete access.

www.mathworksheets4kids.com

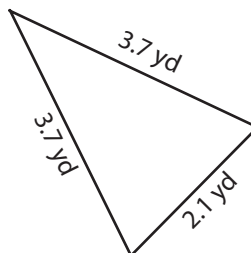


Perimeter = 18.9 in

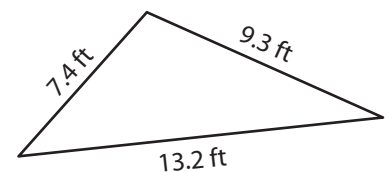
7)



Perimeter = 30.6 in



Perimeter = 9.5 yd



Perimeter = 29.9 ft