

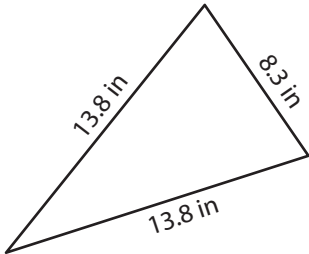
Name : _____

Perimeter of a Triangle

T155

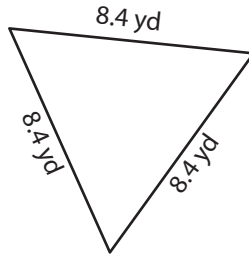
Find the perimeter of each triangle.

1)



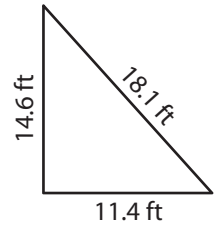
Perimeter = _____

2)

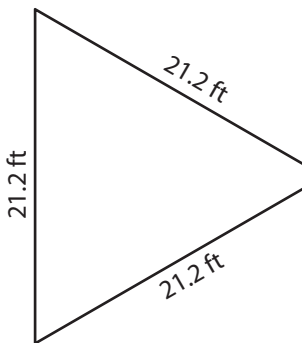


Perimeter = _____

3)



4)



Perimeter = _____

PREVIEW
Gain complete access to the largest collection of worksheets in all subjects!

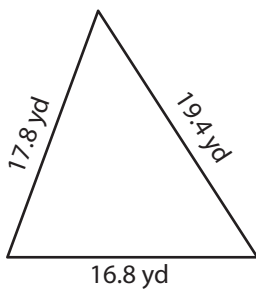
Members, please log in to download this worksheet.

Not a member? Please sign up to gain complete access.

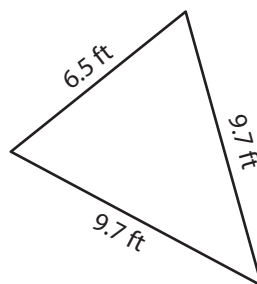
www.mathworksheets4kids.com

Perimeter = _____

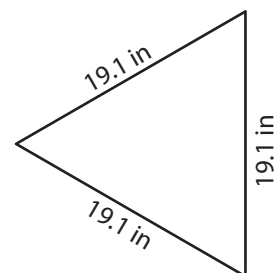
7)



Perimeter = _____



Perimeter = _____



Perimeter = _____

Name : _____

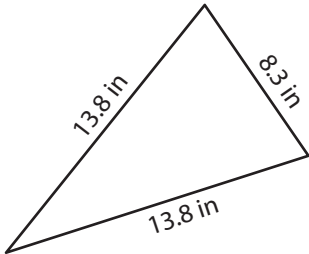
Answer key

T155

Perimeter of a Triangle

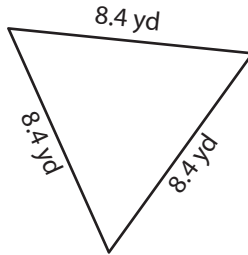
Find the perimeter of each triangle.

1)



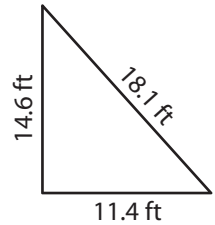
Perimeter = 35.9 in

2)

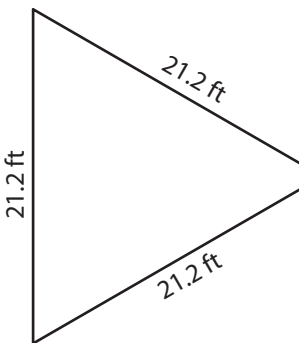


Perimeter = 44.1 ft

3)



4)



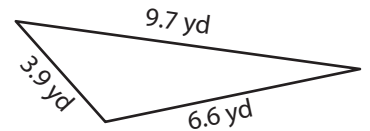
Perimeter = 63.6 ft

PREVIEW
Gain complete access to the largest collection of worksheets in all subjects!

Members, please log in to download this worksheet.

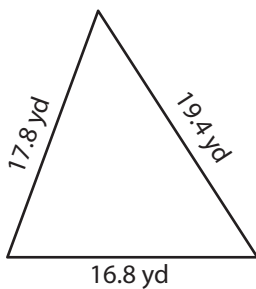
Not a member? Please sign up to gain complete access.

www.mathworksheets4kids.com

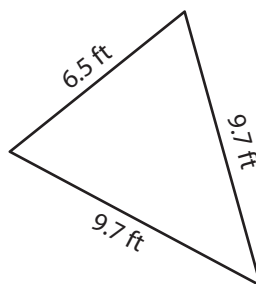


Perimeter = 20.2 yd

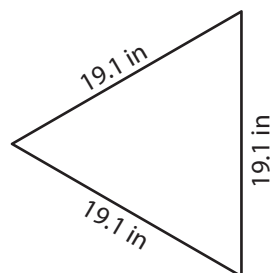
7)



Perimeter = 54 yd



Perimeter = 25.9 ft



Perimeter = 57.3 in