

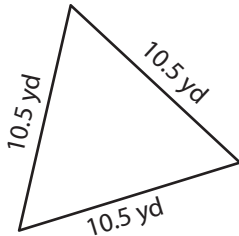
Name : _____

T2S1

Perimeter of a Triangle

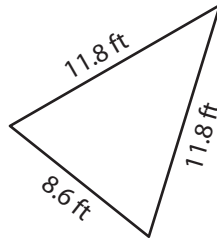
Find the perimeter of each triangle.

1)

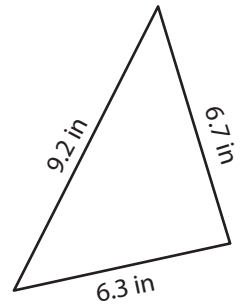


Perimeter = _____

2)

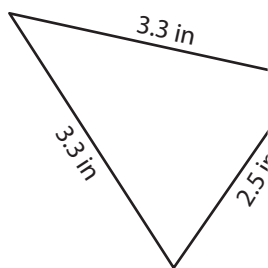


3)



Perimeter = _____

4)



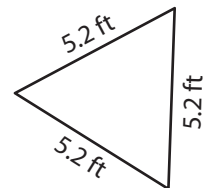
Perimeter = _____

PREVIEW
Gain complete access to the largest
collection of worksheets in all subjects!

Members, please
log in to
download this
worksheet.

Not a member?
Please sign up to
gain complete
access.

www.mathworksheets4kids.com



Perimeter = _____

7) Find the perimeter of the triangle with side lengths of 12.5 inches, 14.9 inches and 10.1 inches.

_____ inches, 5.6 inches and 4.8 inches.

8) The side lengths of a triangle are 2.8 yards, 6.6 yards and 7.4 yards. Determine its perimeter.

Name : _____

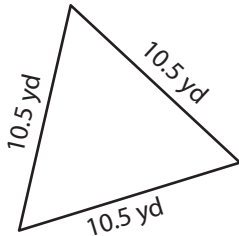
Answer key

T2S1

Perimeter of a Triangle

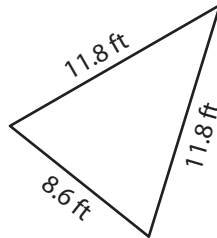
Find the perimeter of each triangle.

1)



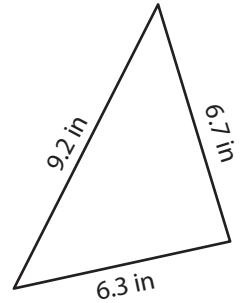
Perimeter = 31.5 yd

2)

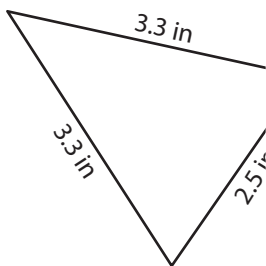


Perimeter = 22.2 in

3)



4)



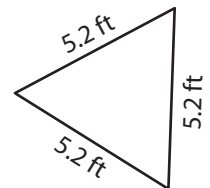
Perimeter = 9.1 in

PREVIEW
Gain complete access to the largest collection of worksheets in all subjects!

Members, please log in to download this worksheet.

Not a member? Please sign up to gain complete access.

www.mathworksheets4kids.com



Perimeter = 15.6 ft

7) Find the perimeter of the triangle with side lengths of 12.9 inches, 14.9 inches, and 6.2 inches.

12.9 inches, 14.9 inches and 6.2 inches

34 inches

8) The side lengths of a triangle are 2.8 yards, 6.6 yards and 7.4 yards. Determine its perimeter.

16.8 yards