

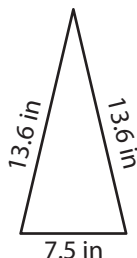
Name : _____

Perimeter of a Triangle

T2S4

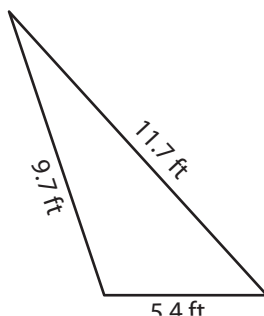
Find the perimeter of each triangle.

1)

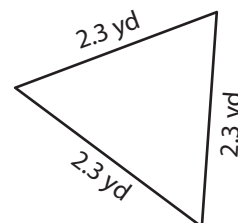


Perimeter = _____

2)

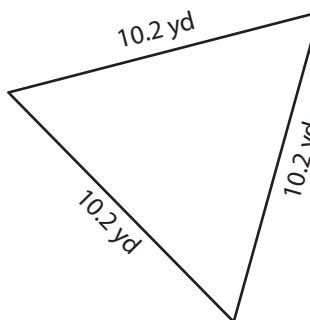


3)



Perimeter = _____

4)



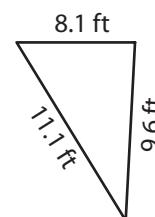
Perimeter = _____

Gain complete access to the largest collection of worksheets in all subjects!

Members, please log in to download this worksheet.

Not a member? Please sign up to gain complete access.

www.mathworksheets4kids.com



Perimeter = _____

7) The side lengths of a triangle are 10.2 yd, 10.2 yd, and 10.2 yd. Find its perimeter.

8) The length of each of the two equal sides of an isosceles triangle is 4.5 feet. Determine the perimeter, if the base measures 8.7 feet.

Name : _____

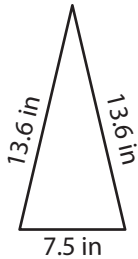
Answer key

Perimeter of a Triangle

T2S4

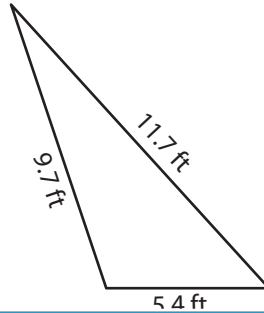
Find the perimeter of each triangle.

1)

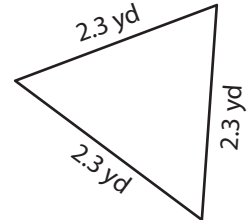


Perimeter = 34.7 in

2)

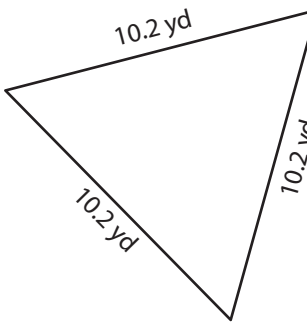


3)



Perimeter = 6.9 yd

4)



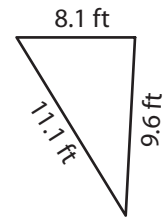
Perimeter = 30.6 yd

Gain complete access to the largest collection of worksheets in all subjects!

Members, please log in to download this worksheet.

Not a member? Please sign up to gain complete access.

www.mathworksheets4kids.com



Perimeter = 28.8 ft

7) The side lengths of a triangle are 12 in, 15 in, and 21 in. Find its perimeter.

48 inches

8) The length of each of the two equal sides of an isosceles triangle is 4.5 feet. Determine the perimeter, if the base measures 8.7 feet.

17.7 feet