

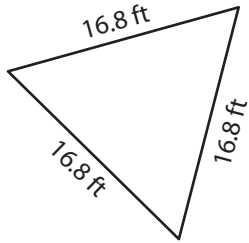
Name : _____

T2S5

Perimeter of a Triangle

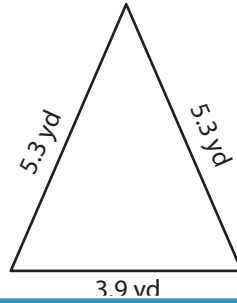
Find the perimeter of each triangle.

1)

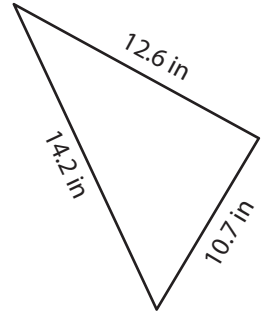


Perimeter = _____

2)

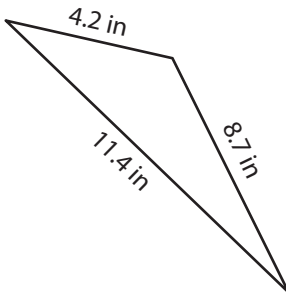


3)



Perimeter = _____

4)



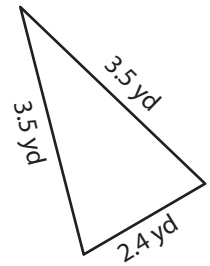
Perimeter = _____

PREVIEW
Gain complete access to the largest collection of worksheets in all subjects!

Members, please log in to download this worksheet.

Not a member? Please sign up to gain complete access.

www.mathworksheets4kids.com



Perimeter = _____

7) What is the perimeter of

and 9.5 feet?

8) The side lengths of a triangle are 17.9 yards, 20.5 yards and 21.8 yards. Determine its perimeter.

Name : _____

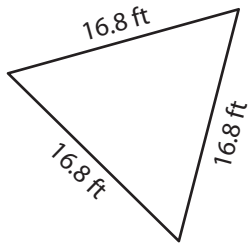
Answer key

T2S5

Perimeter of a Triangle

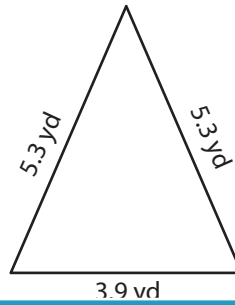
Find the perimeter of each triangle.

1)



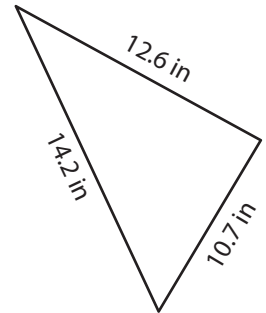
Perimeter = 50.4 ft

2)

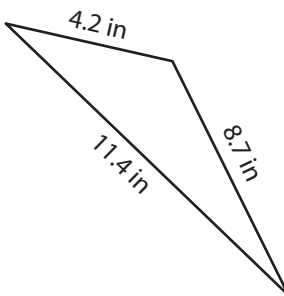


Perimeter = 37.5 in

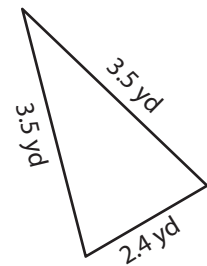
3)



4)



Perimeter = 24.3 in



Perimeter = 9.4 yd

7) What is the perimeter of

and 9.5 feet?

24.2 feet

8) The side lengths of a triangle are 17.9 yards, 20.5 yards and 21.8 yards. Determine its perimeter.

60.2 yards

PREVIEW

Gain complete access to the largest collection of worksheets in all subjects!

Members, please log in to download this worksheet.

Not a member? Please sign up to gain complete access.

www.mathworksheets4kids.com