

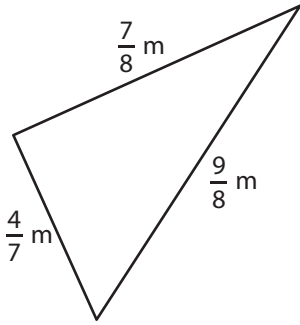
Name : _____

Perimeter of a Triangle

T151

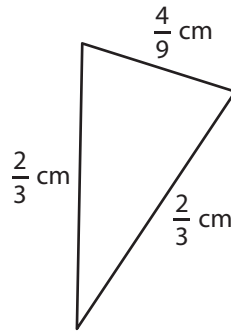
Find the perimeter of each triangle.

1)



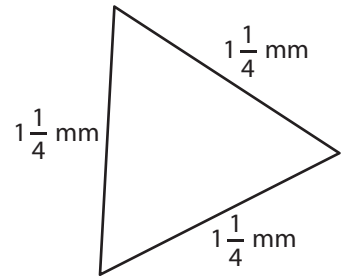
Perimeter =

2)



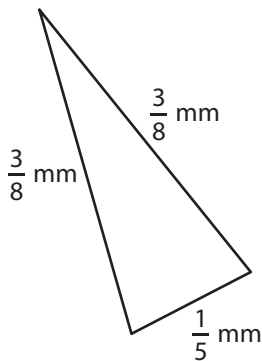
Perimeter =

3)



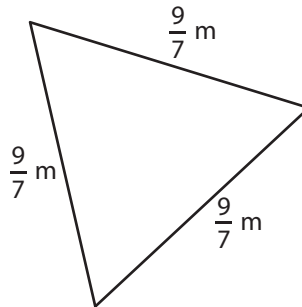
Perimeter =

4)



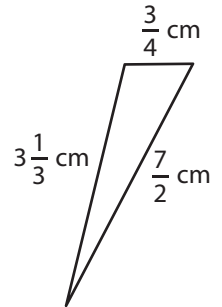
Perimeter =

5)



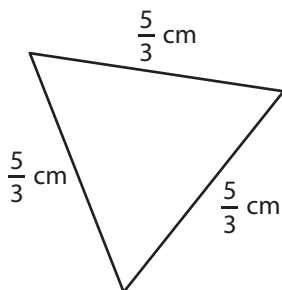
Perimeter =

6)



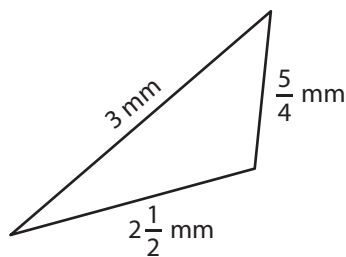
Perimeter =

7)



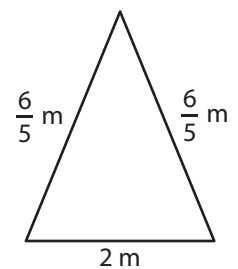
Perimeter =

8)



Perimeter =

9)



Perimeter =

Name : _____

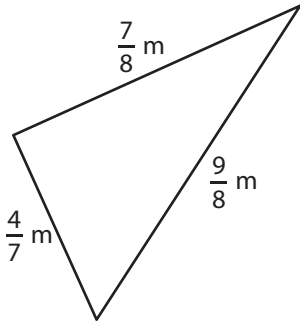
Answer key

Perimeter of a Triangle

T151

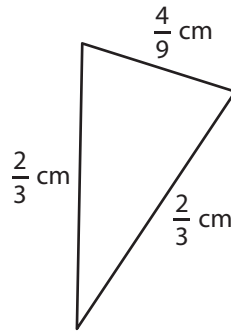
Find the perimeter of each triangle.

1)



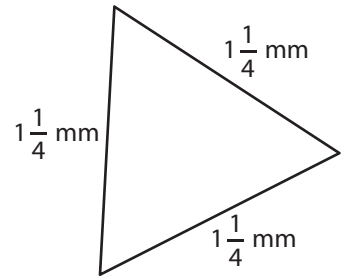
$$\text{Perimeter} = \frac{18}{7} \text{ or } 2\frac{4}{7} \text{ m}$$

2)



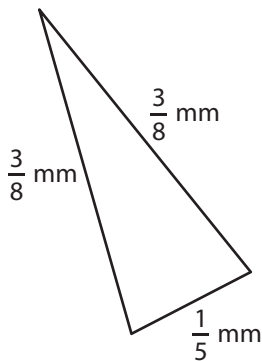
$$\text{Perimeter} = \frac{16}{9} \text{ or } 1\frac{7}{9} \text{ cm}$$

3)



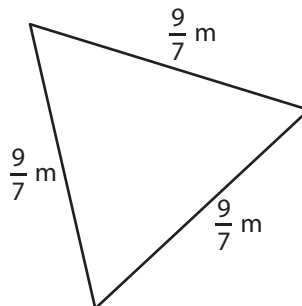
$$\text{Perimeter} = \frac{15}{4} \text{ or } 3\frac{3}{4} \text{ mm}$$

4)



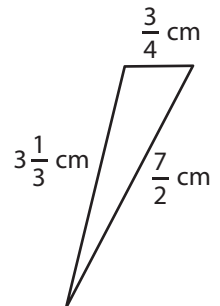
$$\text{Perimeter} = \frac{19}{20} \text{ mm}$$

5)



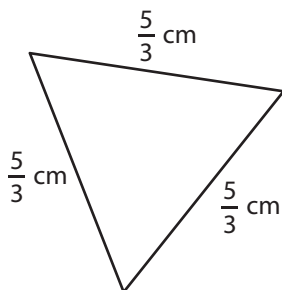
$$\text{Perimeter} = \frac{27}{7} \text{ or } 3\frac{6}{7} \text{ m}$$

6)



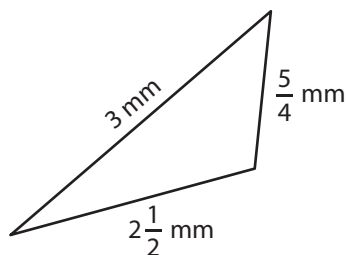
$$\text{Perimeter} = \frac{91}{12} \text{ or } 7\frac{7}{12} \text{ cm}$$

7)



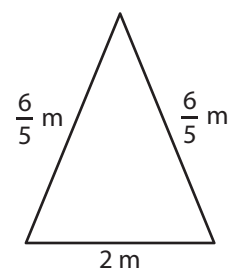
$$\text{Perimeter} = 5 \text{ cm}$$

8)



$$\text{Perimeter} = \frac{27}{4} \text{ or } 6\frac{3}{4} \text{ mm}$$

9)



$$\text{Perimeter} = \frac{22}{5} \text{ or } 4\frac{2}{5} \text{ m}$$