

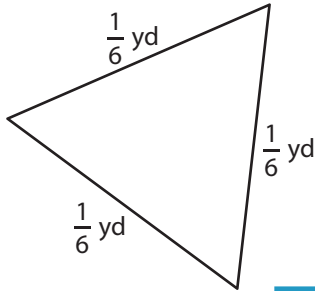
Name : _____

Perimeter of a Triangle

T1S2

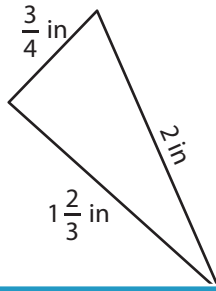
Find the perimeter of each triangle.

1)

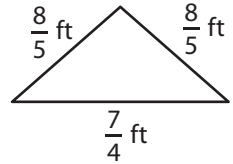


Perimeter =

2)

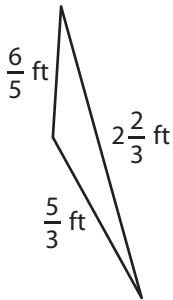


3)



Perimeter =

4)



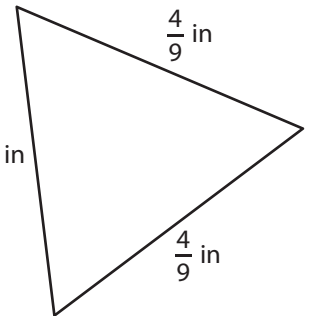
Perimeter =

Gain complete access to the largest collection of worksheets in all subjects!

Members, please log in to download this worksheet.

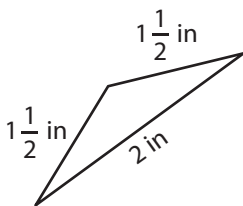
Not a member? Please sign up to gain complete access.

www.mathworksheets4kids.com

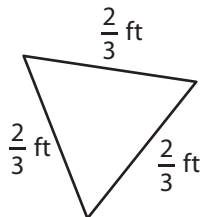


Perimeter =

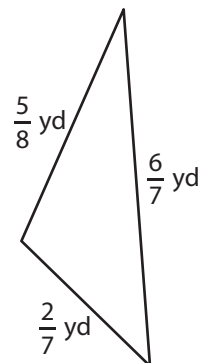
7)



Perimeter =



Perimeter =



Perimeter =

Name : _____

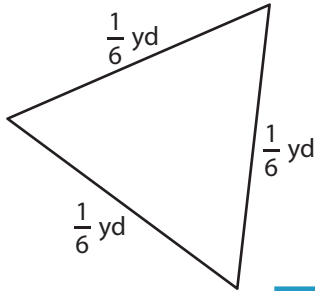
Answer key

T1S2

Perimeter of a Triangle

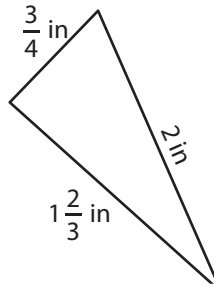
Find the perimeter of each triangle.

1)

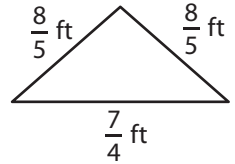


Perimeter = $\frac{1}{2}$ yd

2)

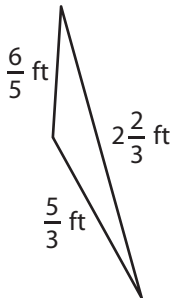


3)



Perimeter = $\frac{99}{20}$ or $4\frac{19}{20}$ ft

4)



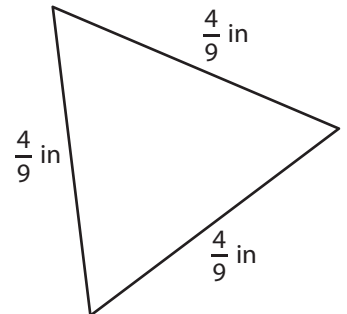
Perimeter = $\frac{83}{15}$ or $5\frac{8}{15}$ ft

Gain complete access to the largest collection of worksheets in all subjects!

Members, please log in to download this worksheet.

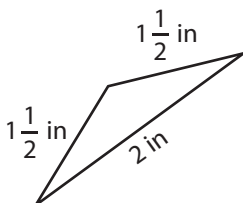
Not a member? Please sign up to gain complete access.

www.mathworksheets4kids.com

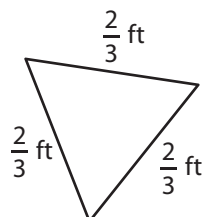


Perimeter = $\frac{4}{3}$ or $1\frac{1}{3}$ in

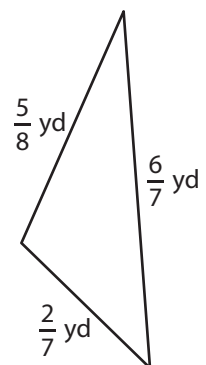
7)



Perimeter = 5 in



Perimeter = 2 ft



Perimeter = $\frac{99}{56}$ or $1\frac{43}{56}$ yd