

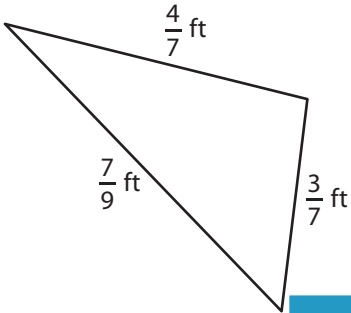
Name : _____

Perimeter of a Triangle

T1S4

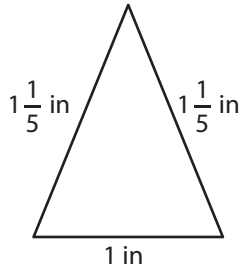
Find the perimeter of each triangle.

1)

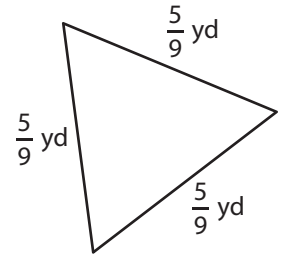


Perimeter =

2)

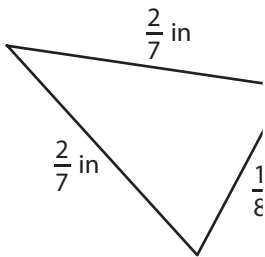


3)



Perimeter =

4)



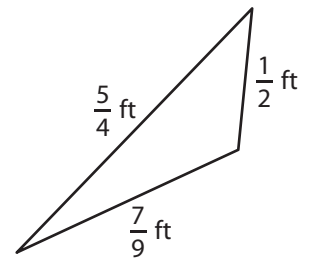
Perimeter =

Gain complete access to the largest collection of worksheets in all subjects!

Members, please log in to download this worksheet.

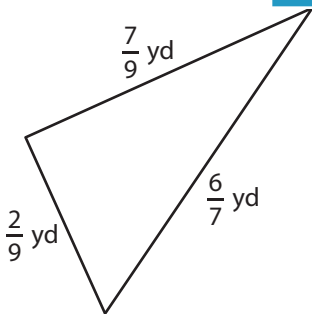
Not a member? Please sign up to gain complete access.

www.mathworksheets4kids.com

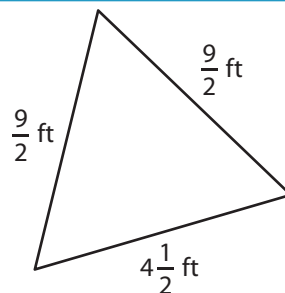


Perimeter =

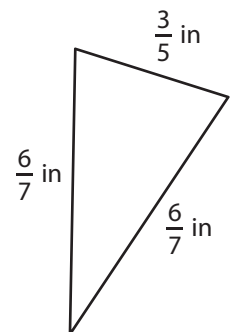
7)



Perimeter =



Perimeter =



Perimeter =

Name : _____

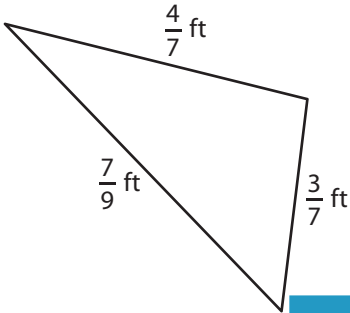
Answer key

Perimeter of a Triangle

T1S4

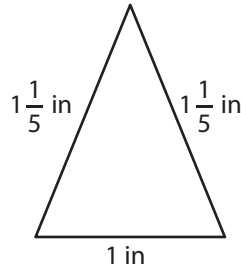
Find the perimeter of each triangle.

1)

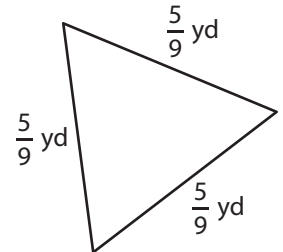


Perimeter = $\frac{16}{9}$ or $1\frac{7}{9}$ ft

2)

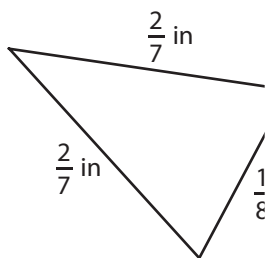


3)



Perimeter = $\frac{5}{3}$ or $1\frac{2}{3}$ yd

4)



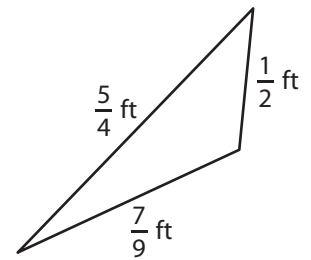
Perimeter = $\frac{39}{56}$ in

Gain complete access to the largest collection of worksheets in all subjects!

Members, please log in to download this worksheet.

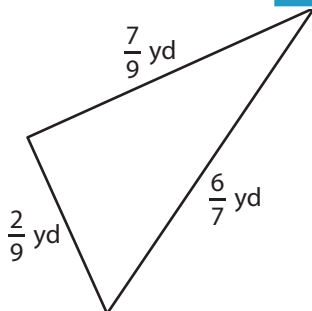
Not a member? Please sign up to gain complete access.

www.mathworksheets4kids.com

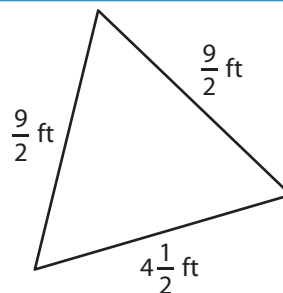


Perimeter = $\frac{91}{36}$ or $2\frac{19}{36}$ ft

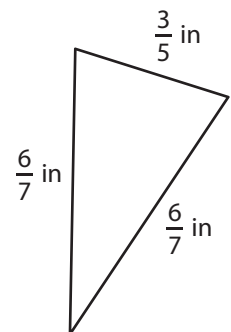
7)



Perimeter = $\frac{13}{7}$ or $1\frac{6}{7}$ yd



Perimeter = $\frac{27}{2}$ or $13\frac{1}{2}$ ft



Perimeter = $\frac{81}{35}$ or $2\frac{11}{35}$ in