

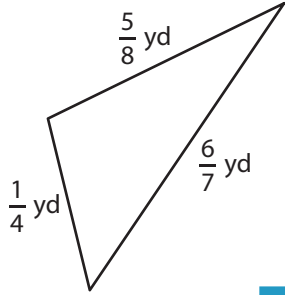
Name : _____

T155

Perimeter of a Triangle

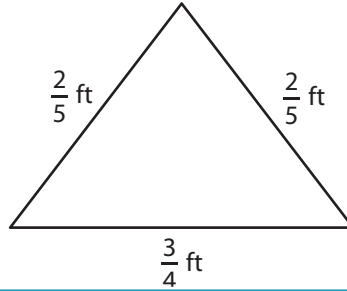
Find the perimeter of each triangle.

1)

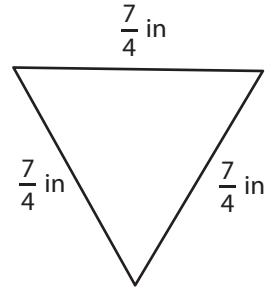


Perimeter =

2)

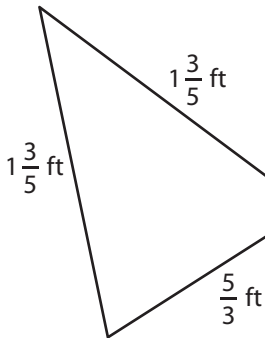


3)



Perimeter =

4)



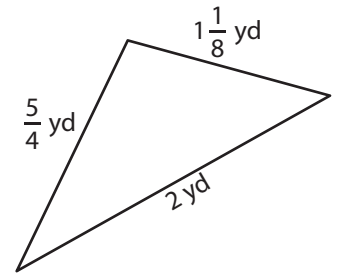
Perimeter =

Gain complete access to the largest collection of worksheets in all subjects!

Members, please log in to download this worksheet.

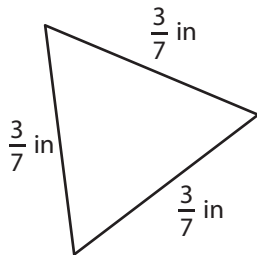
Not a member? Please sign up to gain complete access.

www.mathworksheets4kids.com

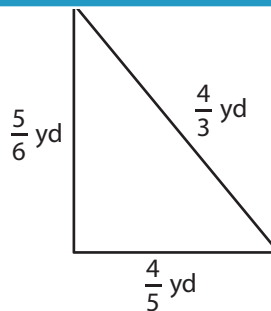


Perimeter =

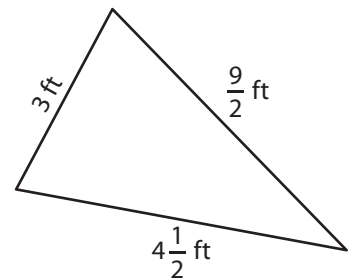
7)



Perimeter =



Perimeter =



Perimeter =

Name : _____

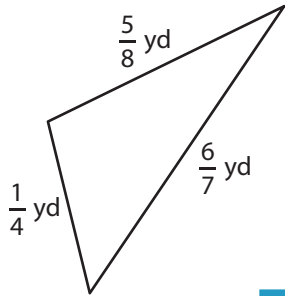
Answer key

T1S5

Perimeter of a Triangle

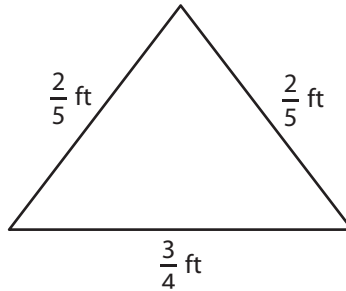
Find the perimeter of each triangle.

1)

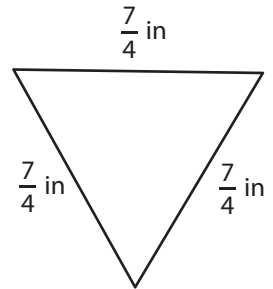


Perimeter = $\frac{97}{56}$ or $1\frac{41}{56}$ yd

2)



3)



Perimeter = $\frac{21}{4}$ or $5\frac{1}{4}$ in

PREVIEW

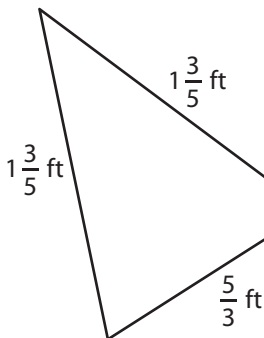
Gain complete access to the largest collection of worksheets in all subjects!

Members, please log in to download this worksheet.

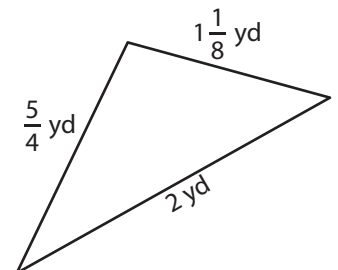
Not a member? Please sign up to gain complete access.

www.mathworksheets4kids.com

4)

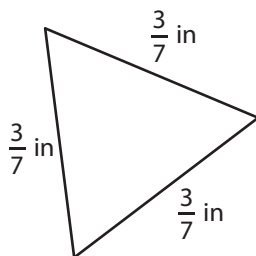


Perimeter = $\frac{73}{15}$ or $4\frac{13}{15}$ ft

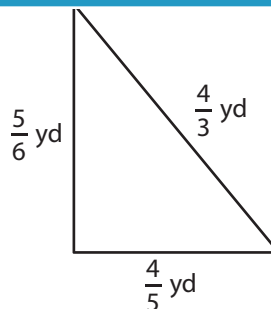


Perimeter = $\frac{35}{8}$ or $4\frac{3}{8}$ yd

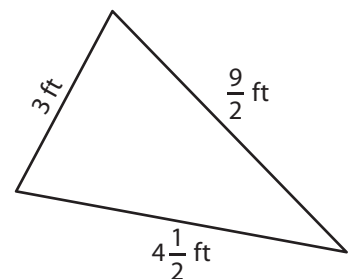
7)



Perimeter = $\frac{9}{7}$ or $1\frac{2}{7}$ in



Perimeter = $\frac{89}{30}$ or $2\frac{29}{30}$ yd



Perimeter = 12 ft