

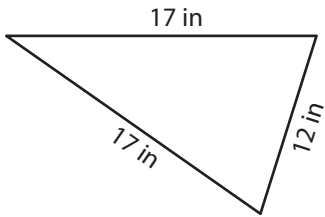
Name : _____

Perimeter of a Triangle

T1L1S1

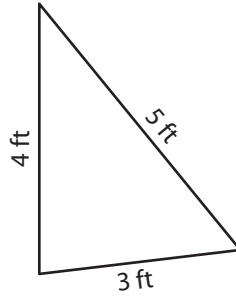
Find the perimeter of each triangle.

1)



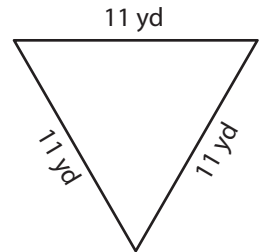
Perimeter = _____

2)



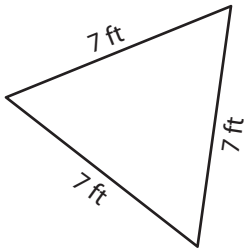
Perimeter = _____

3)



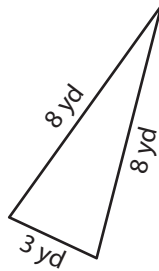
Perimeter = _____

4)



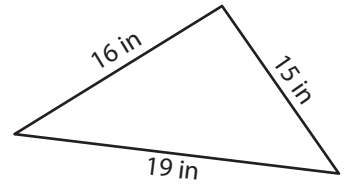
Perimeter = _____

5)



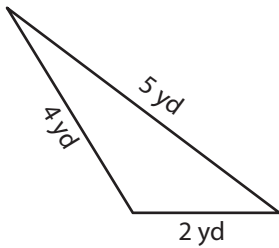
Perimeter = _____

6)



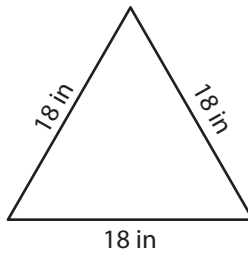
Perimeter = _____

7)



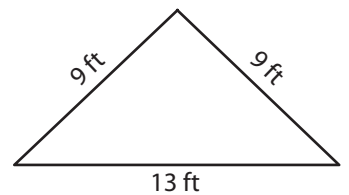
Perimeter = _____

8)



Perimeter = _____

9)



Perimeter = _____

Name : _____

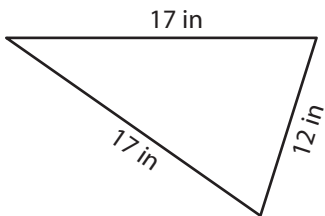
Answer key

Perimeter of a Triangle

T1L1S1

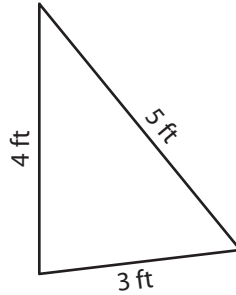
Find the perimeter of each triangle.

1)



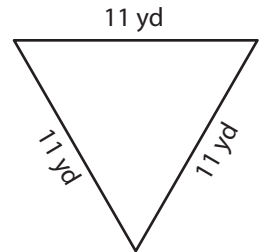
Perimeter = 46 in

2)



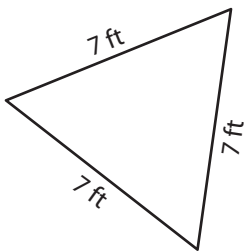
Perimeter = 12 ft

3)



Perimeter = 33 yd

4)



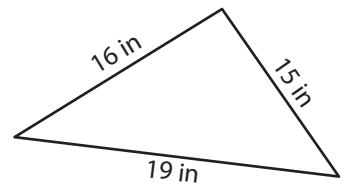
Perimeter = 21 ft

5)



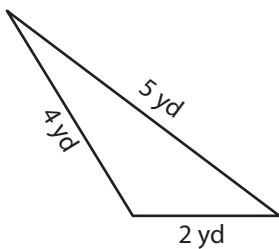
Perimeter = 19 yd

6)



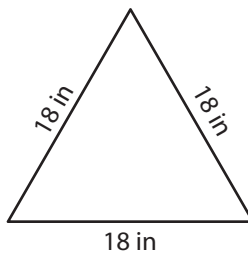
Perimeter = 50 in

7)



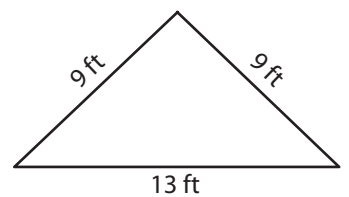
Perimeter = 11 yd

8)



Perimeter = 54 in

9)



Perimeter = 31 ft