

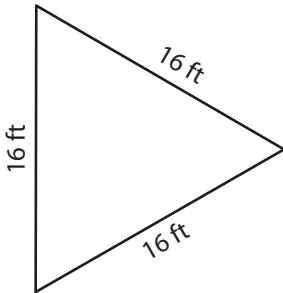
Name : _____

Perimeter of a Triangle

T1L1S2

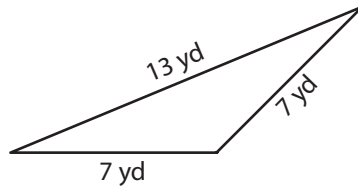
Find the perimeter of each triangle.

1)



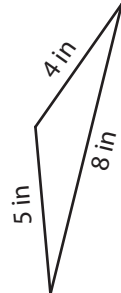
Perimeter = _____

2)

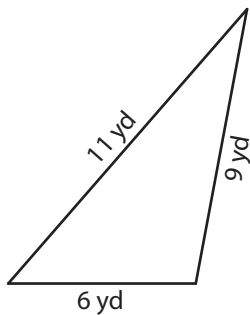


Perimeter = _____

3)



4)



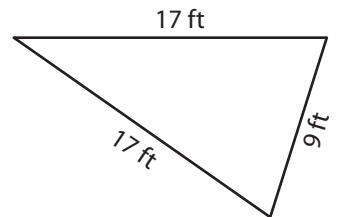
Perimeter = _____

Gain complete access to the largest collection of worksheets in all subjects!

Members, please log in to download this worksheet.

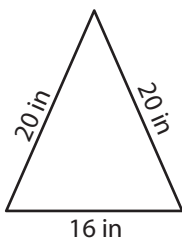
Not a member? Please sign up to gain complete access.

www.mathworksheets4kids.com

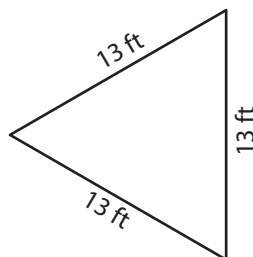


Perimeter = _____

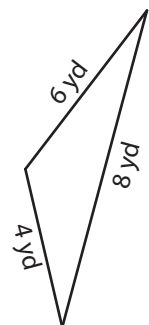
7)



Perimeter = _____



Perimeter = _____



Perimeter = _____

Name : _____

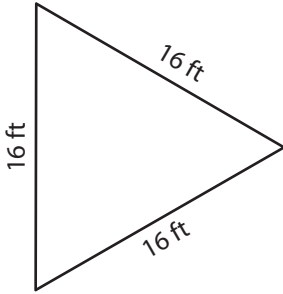
Answer key

Perimeter of a Triangle

T1L1S2

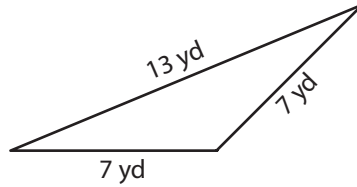
Find the perimeter of each triangle.

1)

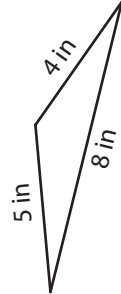


Perimeter = 48 ft

2)



3)



Perimeter = 17 in

PREVIEW

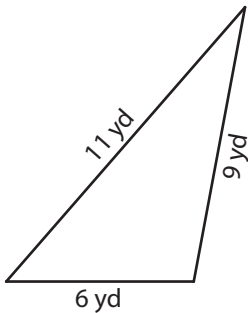
Gain complete access to the largest collection of worksheets in all subjects!

Members, please log in to download this worksheet.

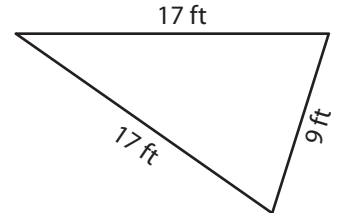
Not a member? Please sign up to gain complete access.

www.mathworksheets4kids.com

4)

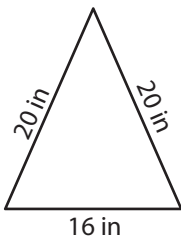


Perimeter = 26 yd

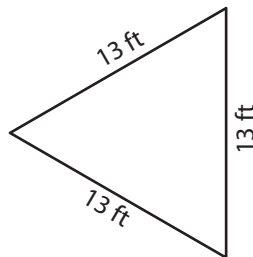


Perimeter = 43 ft

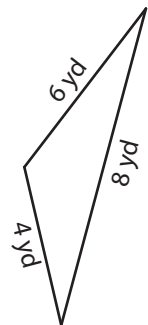
7)



Perimeter = 56 in



Perimeter = 39 ft



Perimeter = 18 yd