

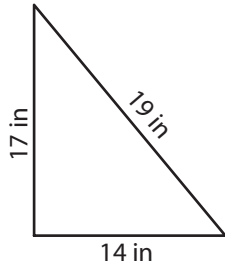
Name : _____

Perimeter of a Triangle

T1L1S3

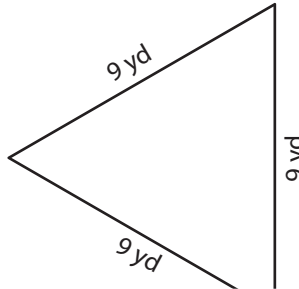
Find the perimeter of each triangle.

1)



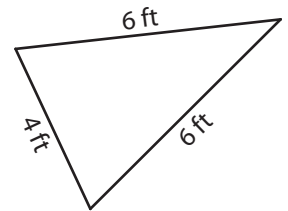
Perimeter = _____

2)

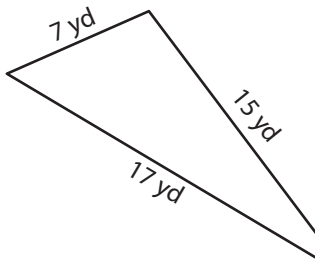


Perimeter = _____

3)



4)



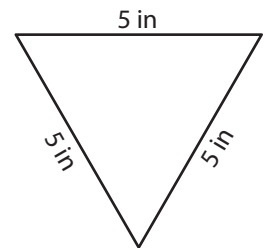
Perimeter = _____

Gain complete access to the largest collection of worksheets in all subjects!

Members, please log in to download this worksheet.

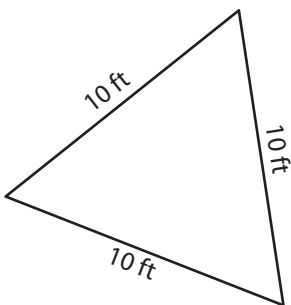
Not a member? Please sign up to gain complete access.

www.mathworksheets4kids.com

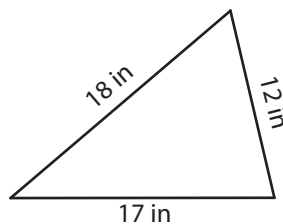


Perimeter = _____

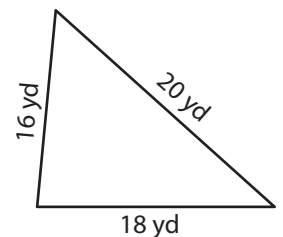
7)



Perimeter = _____



Perimeter = _____



Perimeter = _____

Name : _____

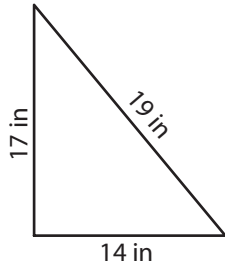
Answer key

T1L1S3

Perimeter of a Triangle

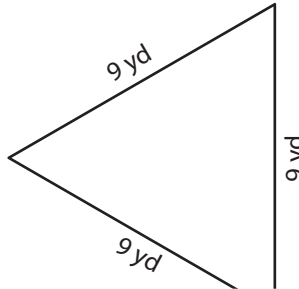
Find the perimeter of each triangle.

1)

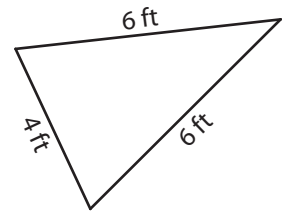


Perimeter = 50 in

2)

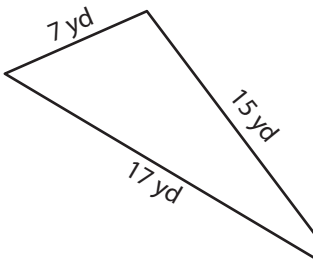


3)



Perimeter = 16 ft

4)



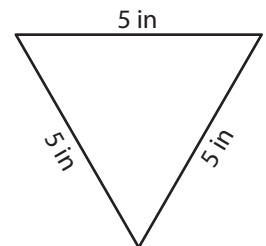
Perimeter = 39 yd

Gain complete access to the largest collection of worksheets in all subjects!

Members, please log in to download this worksheet.

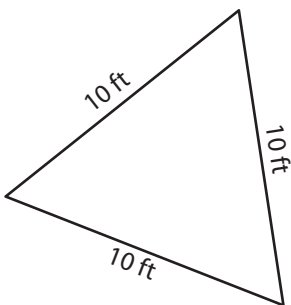
Not a member? Please sign up to gain complete access.

www.mathworksheets4kids.com

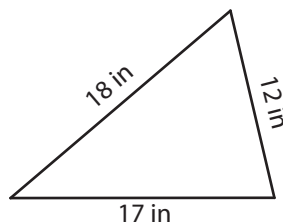


Perimeter = 15 in

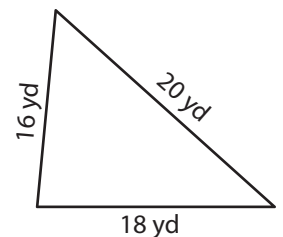
7)



Perimeter = 30 ft



Perimeter = 47 in



Perimeter = 54 yd