

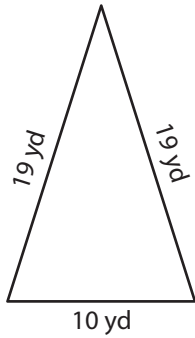
Name : \_\_\_\_\_

## Perimeter of a Triangle

T1L1S4

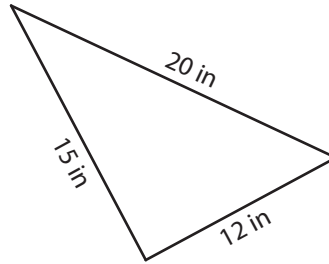
Find the perimeter of each triangle.

1)

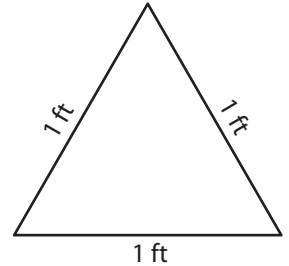


Perimeter = \_\_\_\_\_

2)

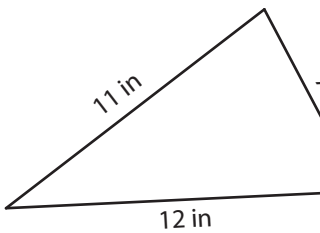


3)



Perimeter = \_\_\_\_\_

4)



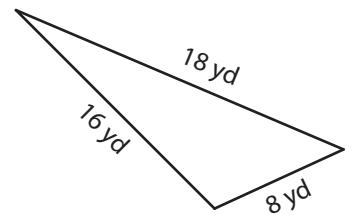
Perimeter = \_\_\_\_\_

Gain complete access to the largest collection of worksheets in all subjects!

Members, please log in to download this worksheet.

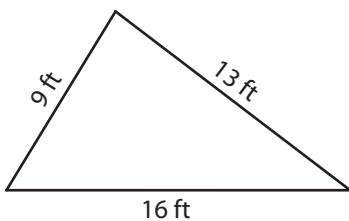
Not a member? Please sign up to gain complete access.

[www.mathworksheets4kids.com](http://www.mathworksheets4kids.com)

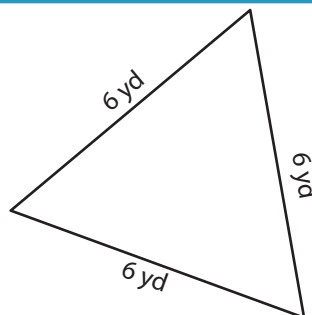


Perimeter = \_\_\_\_\_

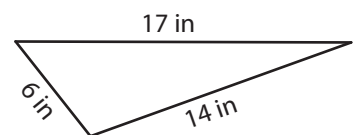
7)



Perimeter = \_\_\_\_\_



Perimeter = \_\_\_\_\_



Perimeter = \_\_\_\_\_

Name : \_\_\_\_\_

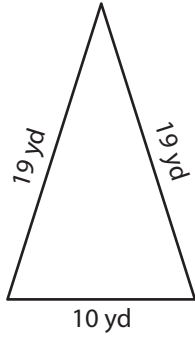
## Answer key

### Perimeter of a Triangle

T1L1S4

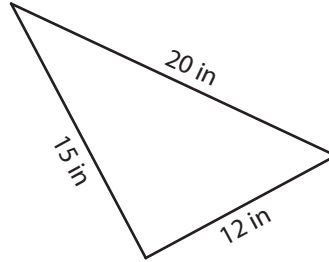
Find the perimeter of each triangle.

1)

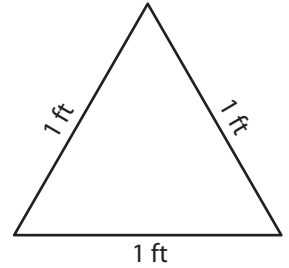


Perimeter = 48 yd

2)

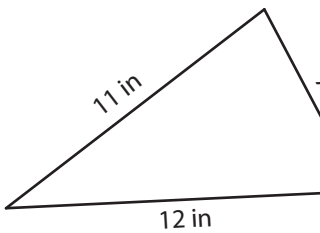


3)



Perimeter = 3 ft

4)



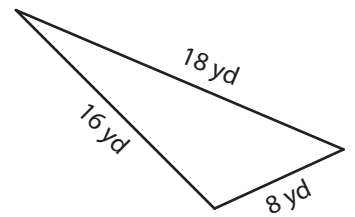
Perimeter = 30 in

Gain complete access to the largest collection of worksheets in all subjects!

Members, please log in to download this worksheet.

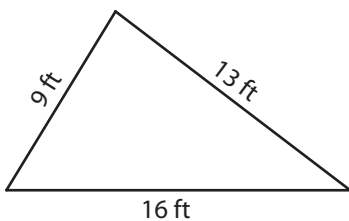
Not a member? Please sign up to gain complete access.

[www.mathworksheets4kids.com](http://www.mathworksheets4kids.com)

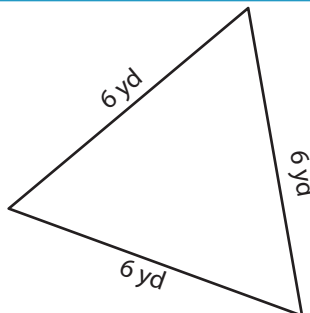


Perimeter = 42 yd

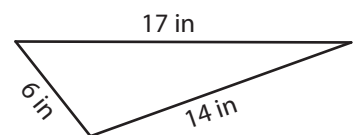
7)



Perimeter = 38 ft



Perimeter = 18 yd



Perimeter = 37 in