

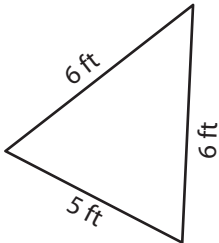
Name : \_\_\_\_\_

## Perimeter of a Triangle

T1L1S5

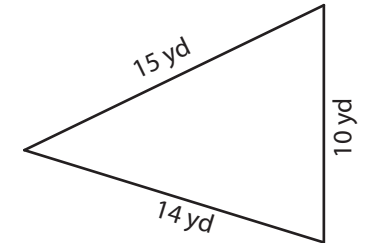
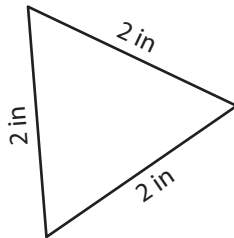
Find the perimeter of each triangle.

1)



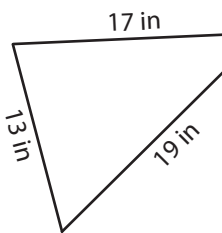
Perimeter = \_\_\_\_\_

2)



Perimeter = \_\_\_\_\_

4)



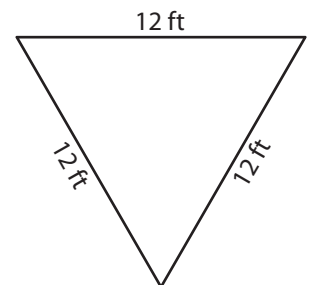
Perimeter = \_\_\_\_\_

**PREVIEW**  
Gain complete access to the largest collection of worksheets in all subjects!

Members, please log in to download this worksheet.

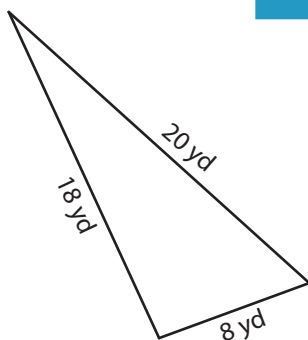
Not a member? Please sign up to gain complete access.

[www.mathworksheets4kids.com](http://www.mathworksheets4kids.com)

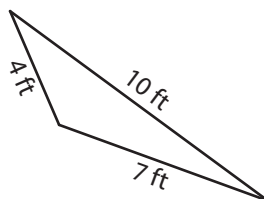


Perimeter = \_\_\_\_\_

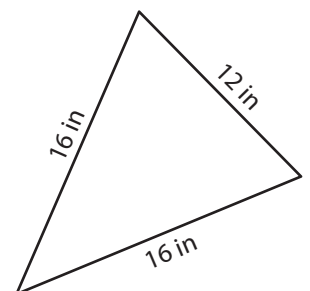
7)



Perimeter = \_\_\_\_\_



Perimeter = \_\_\_\_\_



Perimeter = \_\_\_\_\_

Name : \_\_\_\_\_

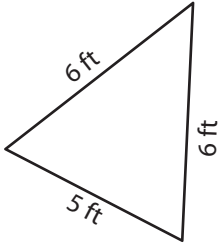
## Answer key

### Perimeter of a Triangle

T1L1S5

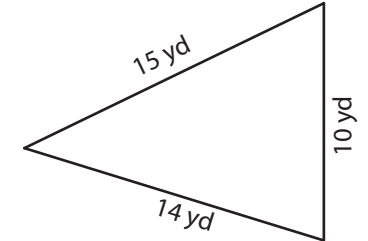
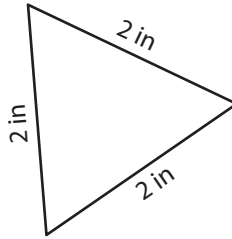
Find the perimeter of each triangle.

1)



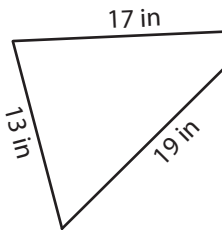
Perimeter = 17 ft

2)



Perimeter = 39 yd

4)



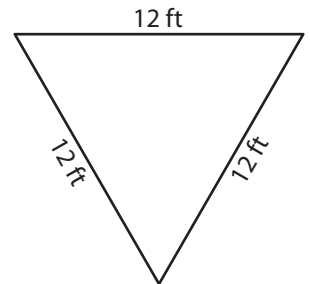
Perimeter = 49 in

Gain complete access to the largest collection of worksheets in all subjects!

Members, please log in to download this worksheet.

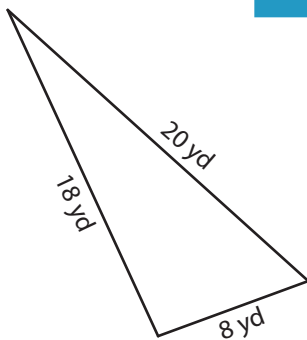
Not a member? Please sign up to gain complete access.

[www.mathworksheets4kids.com](http://www.mathworksheets4kids.com)

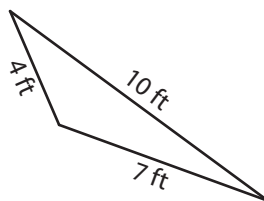


Perimeter = 36 ft

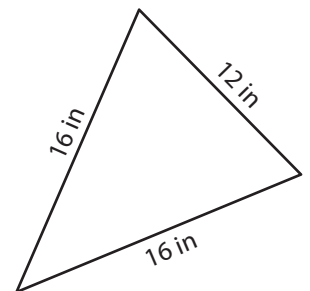
7)



Perimeter = 46 yd



Perimeter = 21 ft



Perimeter = 44 in