

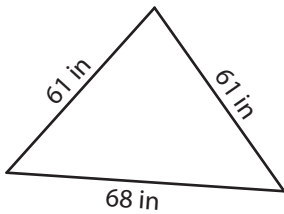
Name : _____

Perimeter of a Triangle

T1L2S1

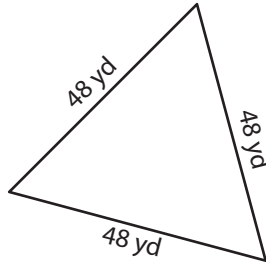
Find the perimeter of each triangle.

1)



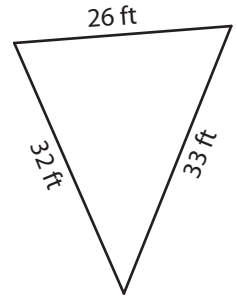
Perimeter = _____

2)

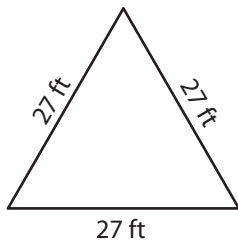


Perimeter = _____

3)



4)



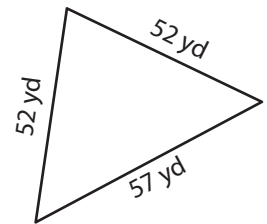
Perimeter = _____

PREVIEW
Gain complete access to the largest
collection of worksheets in all subjects!

Members, please
log in to
download this
worksheet.

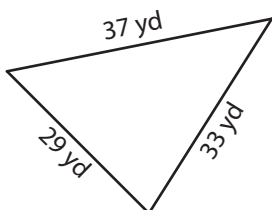
Not a member?
Please sign up to
gain complete
access.

www.mathworksheets4kids.com

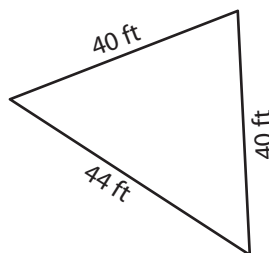


Perimeter = _____

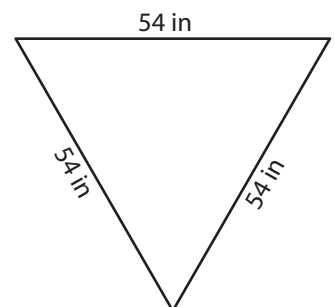
7)



Perimeter = _____



Perimeter = _____



Perimeter = _____

Name : _____

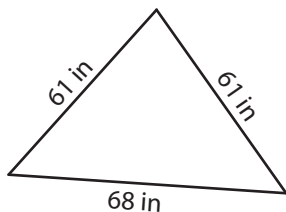
Answer key

Perimeter of a Triangle

T1L2S1

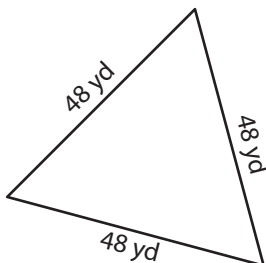
Find the perimeter of each triangle.

1)

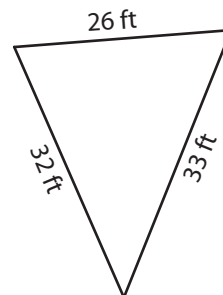


Perimeter = 190 in

2)



3)



Perimeter = 91 ft

PREVIEW

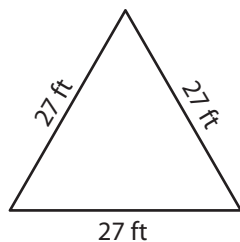
Gain complete access to the largest collection of worksheets in all subjects!

Members, please log in to download this worksheet.

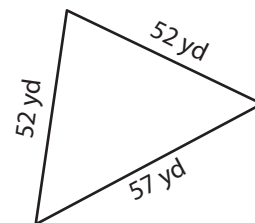
Not a member? Please sign up to gain complete access.

www.mathworksheets4kids.com

4)

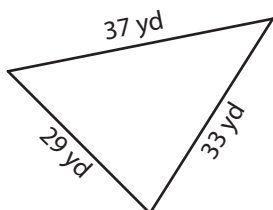


Perimeter = 81 ft

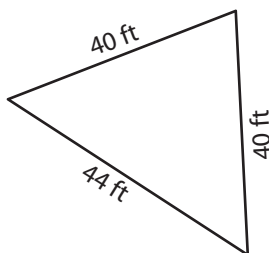


Perimeter = 161 yd

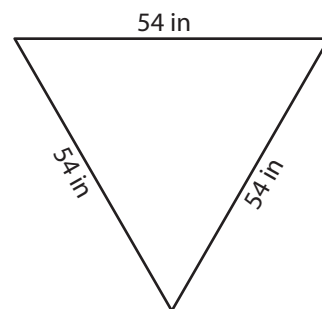
7)



Perimeter = 99 yd



Perimeter = 124 ft



Perimeter = 162 in