

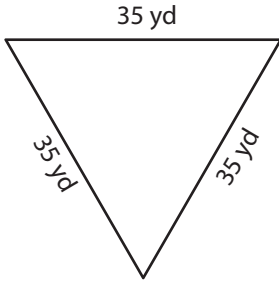
Name : \_\_\_\_\_

## Perimeter of a Triangle

T1L2S2

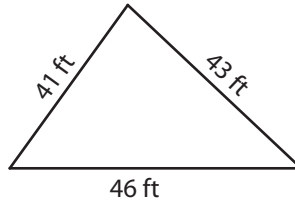
Find the perimeter of each triangle.

1)

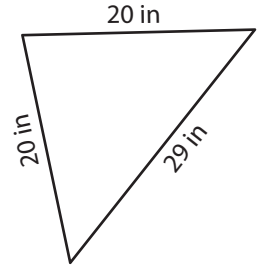


Perimeter = \_\_\_\_\_

2)

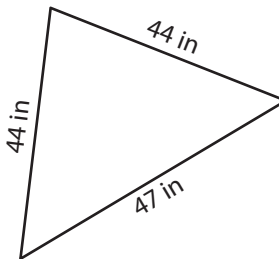


3)



Perimeter = \_\_\_\_\_

4)



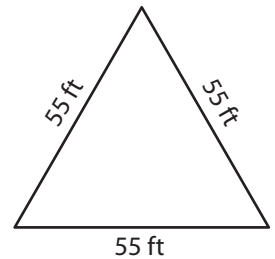
Perimeter = \_\_\_\_\_

Gain complete access to the largest collection of worksheets in all subjects!

Members, please log in to download this worksheet.

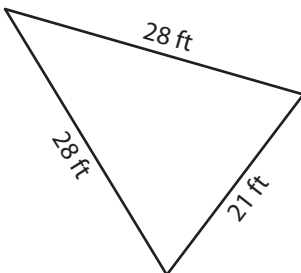
Not a member? Please sign up to gain complete access.

[www.mathworksheets4kids.com](http://www.mathworksheets4kids.com)

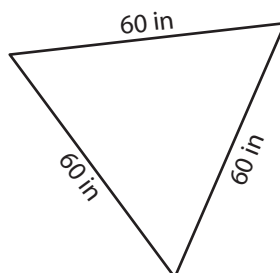


Perimeter = \_\_\_\_\_

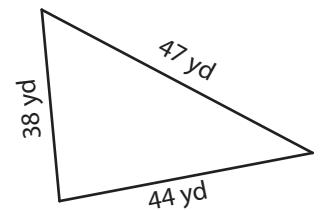
7)



Perimeter = \_\_\_\_\_



Perimeter = \_\_\_\_\_



Perimeter = \_\_\_\_\_

Name : \_\_\_\_\_

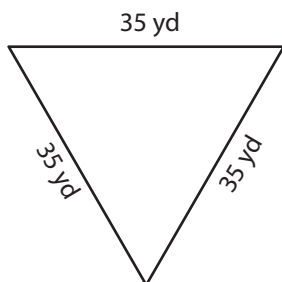
## Answer key

T1L2S2

### Perimeter of a Triangle

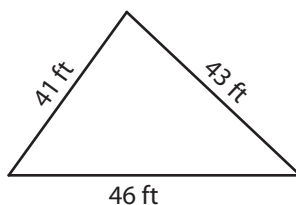
Find the perimeter of each triangle.

1)

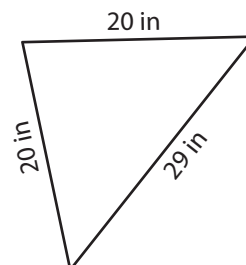


Perimeter = 105 yd

2)



3)



Perimeter = 69 in

# PREVIEW

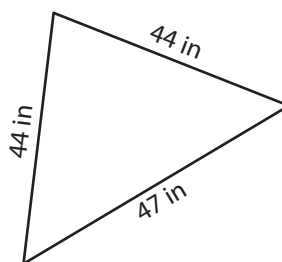
Gain complete access to the largest collection of worksheets in all subjects!

Members, please log in to download this worksheet.

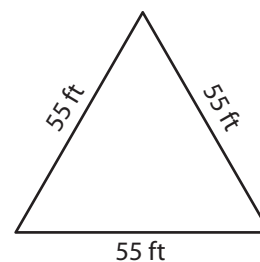
Not a member? Please sign up to gain complete access.

[www.mathworksheets4kids.com](http://www.mathworksheets4kids.com)

4)

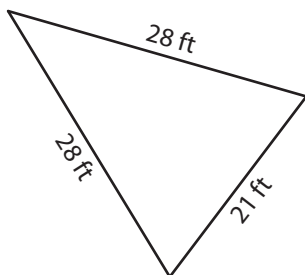


Perimeter = 135 in

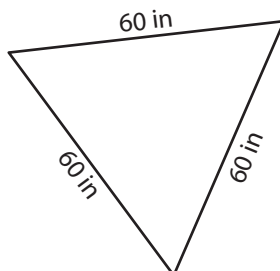


Perimeter = 165 ft

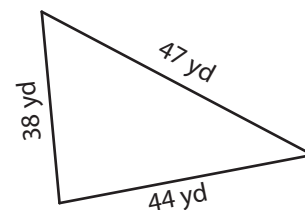
7)



Perimeter = 77 ft



Perimeter = 180 in



Perimeter = 129 yd