

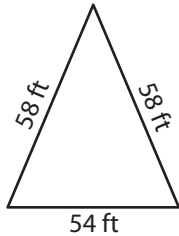
Name : _____

Perimeter of a Triangle

T1L2S3

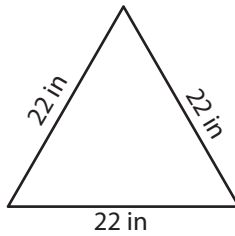
Find the perimeter of each triangle.

1)



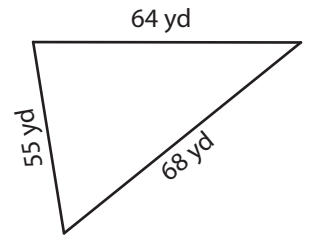
Perimeter = _____

2)

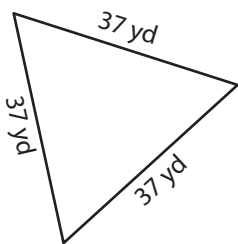


Perimeter = _____

3)



4)



Perimeter = _____

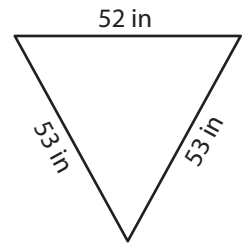
PREVIEW
Gain complete access to the largest collection of worksheets in all subjects!

Members, please log in to download this worksheet.

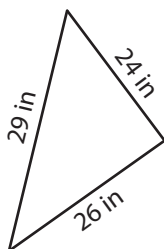
Not a member? Please sign up to gain complete access.

www.mathworksheets4kids.com

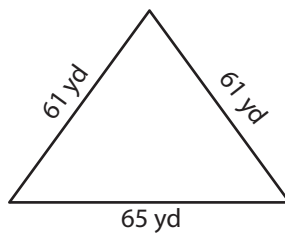
Perimeter = _____



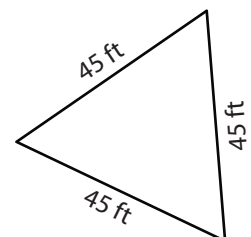
7)



Perimeter = _____



Perimeter = _____



Perimeter = _____

Name : _____

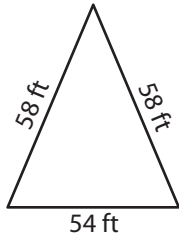
Answer key

T1L2S3

Perimeter of a Triangle

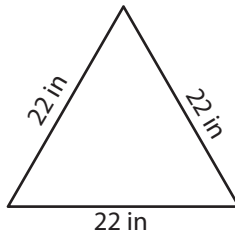
Find the perimeter of each triangle.

1)

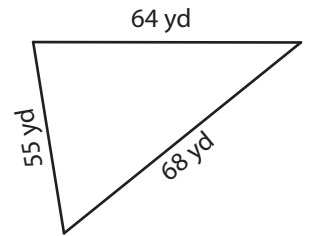


Perimeter = 170 ft

2)

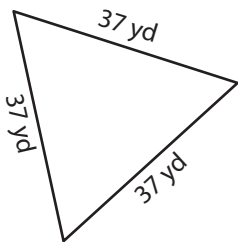


3)



Perimeter = 187 yd

4)



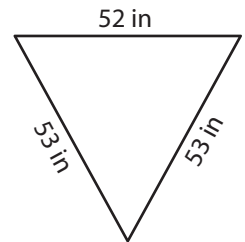
Perimeter = 111 yd

Gain complete access to the largest collection of worksheets in all subjects!

Members, please log in to download this worksheet.

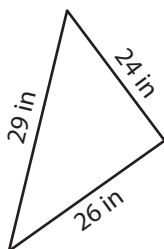
Not a member? Please sign up to gain complete access.

www.mathworksheets4kids.com

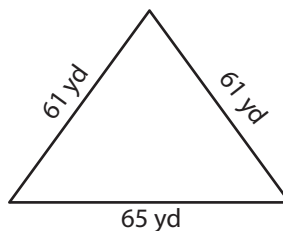


Perimeter = 158 in

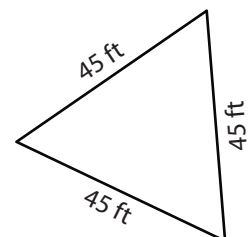
7)



Perimeter = 79 in



Perimeter = 187 yd



Perimeter = 135 ft