

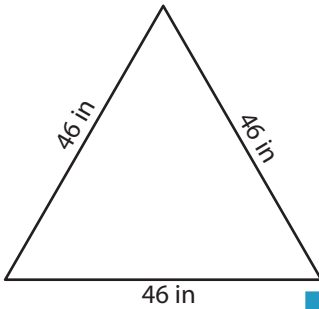
Name : _____

Perimeter of a Triangle

T1L2S4

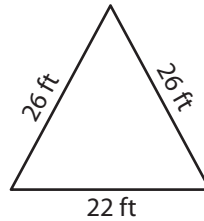
Find the perimeter of each triangle.

1)

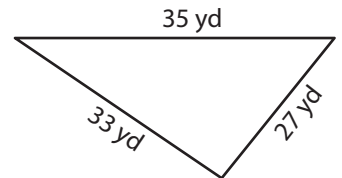


Perimeter = _____

2)

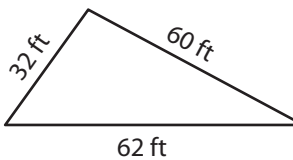


3)



Perimeter = _____

4)



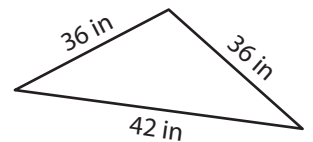
Perimeter = _____

PREVIEW
Gain complete access to the largest
collection of worksheets in all subjects!

Members, please
log in to
download this
worksheet.

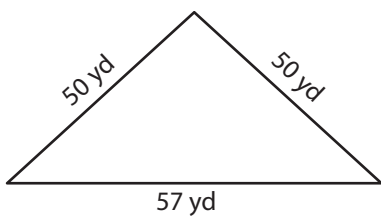
Not a member?
Please sign up to
gain complete
access.

www.mathworksheets4kids.com

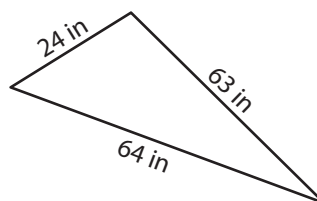


Perimeter = _____

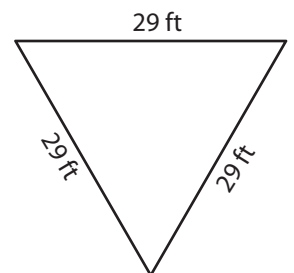
7)



Perimeter = _____



Perimeter = _____



Perimeter = _____

Name : _____

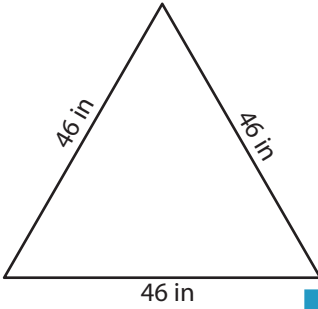
Answer key

Perimeter of a Triangle

T1L2S4

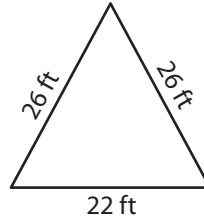
Find the perimeter of each triangle.

1)

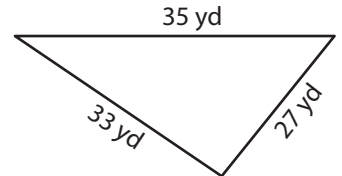


Perimeter = 138 in

2)

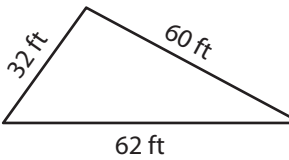


3)



Perimeter = 95 yd

4)



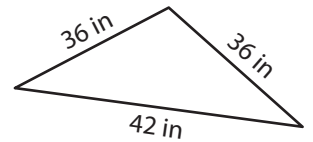
Perimeter = 154 ft

Gain complete access to the largest collection of worksheets in all subjects!

Members, please log in to download this worksheet.

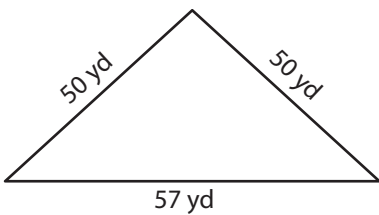
Not a member? Please sign up to gain complete access.

www.mathworksheets4kids.com

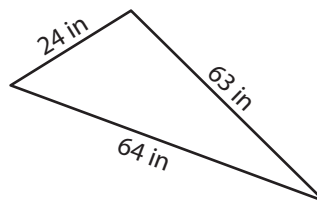


Perimeter = 114 in

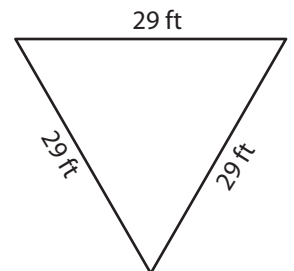
7)



Perimeter = 157 yd



Perimeter = 151 in



Perimeter = 87 ft