

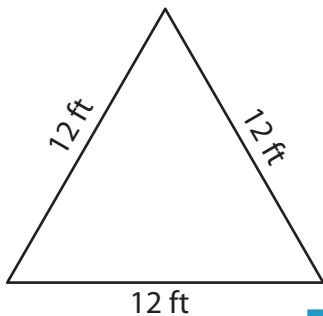
Name : _____

Perimeter of a Triangle

T2L1S2

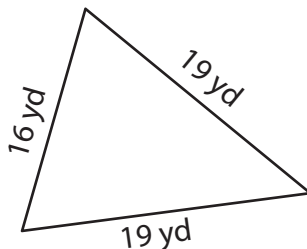
Find the perimeter of each triangle.

1)

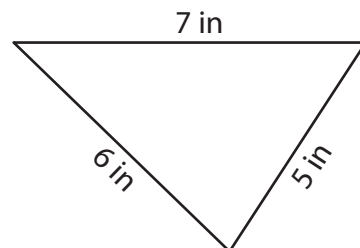


Perimeter = _____

2)

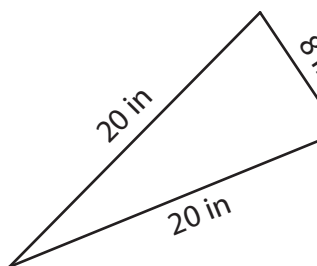


3)



Perimeter = _____

4)



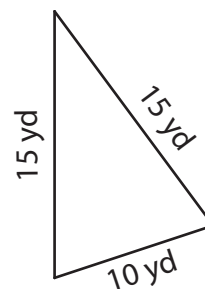
Perimeter = _____

PREVIEW
Gain complete access to the largest collection of worksheets in all subjects!

Members, please log in to download this worksheet.

Not a member? Please sign up to gain complete access.

www.mathworksheets4kids.com



Perimeter = _____

7) Find the perimeter of the

nd 19 yards.

8) The side length of an equilateral triangle is 17 inches. Determine the perimeter.

Name : _____

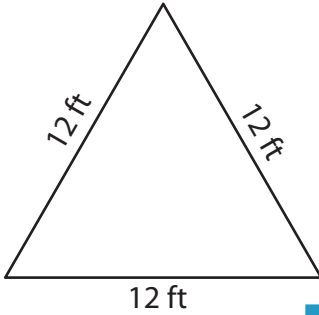
Answer key

Perimeter of a Triangle

T2L1S2

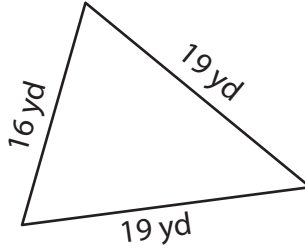
Find the perimeter of each triangle.

1)

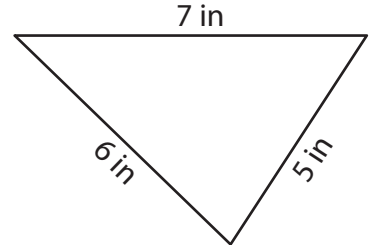


Perimeter = 36 ft

2)

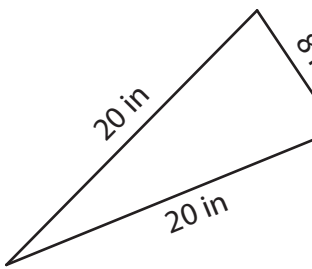


3)



Perimeter = 18 in

4)



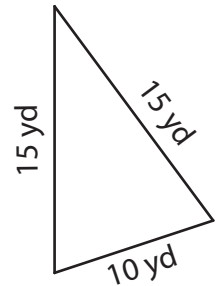
Perimeter = 48 in

Gain complete access to the largest collection of worksheets in all subjects!

Members, please log in to download this worksheet.

Not a member? Please sign up to gain complete access.

www.mathworksheets4kids.com



Perimeter = 40 yd

7) Find the perimeter of the

nd 19 yards.

50 yards

8) The side length of an equilateral triangle is 17 inches. Determine the perimeter.

51 inches