

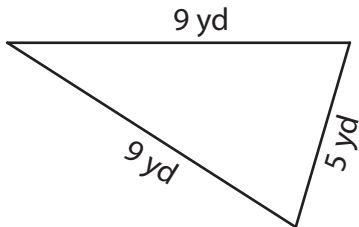
Name : \_\_\_\_\_

## Perimeter of a Triangle

T2L1S3

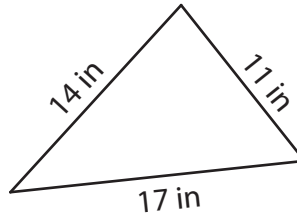
Find the perimeter of each triangle.

1)



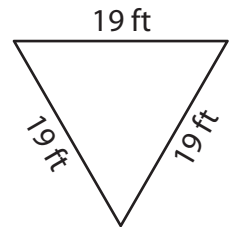
Perimeter = \_\_\_\_\_

2)

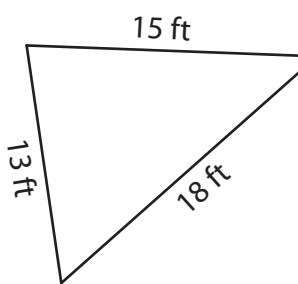


Perimeter = \_\_\_\_\_

3)



4)



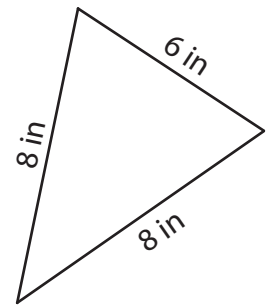
Perimeter = \_\_\_\_\_

**PREVIEW**  
Gain complete access to the largest collection of worksheets in all subjects!

Members, please log in to download this worksheet.

Not a member? Please sign up to gain complete access.

[www.mathworksheets4kids.com](http://www.mathworksheets4kids.com)



Perimeter = \_\_\_\_\_

7) Determine the perimeter

es.

\_\_\_\_\_

8) The length of each of the two equal sides of an isosceles triangle is 12 feet. What is the perimeter, if the base measures 7 feet?

\_\_\_\_\_

Name : \_\_\_\_\_

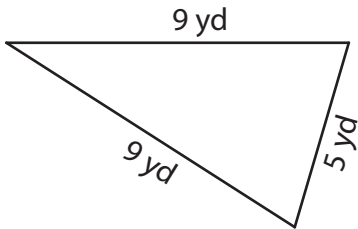
## Answer key

T2L1S3

### Perimeter of a Triangle

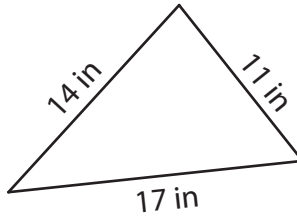
Find the perimeter of each triangle.

1)

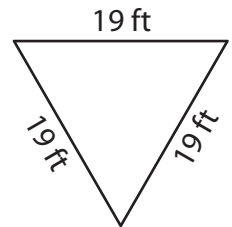


Perimeter = 23 yd

2)

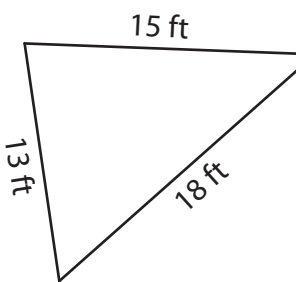


3)



Perimeter = 57 ft

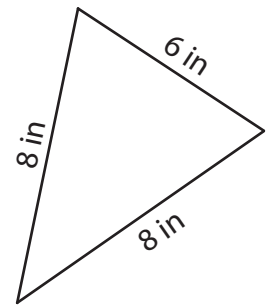
4)



Perimeter = 46 ft

7) Determine the perimeter

es.



Perimeter = 22 in

6 inches

8) The length of each of the two equal sides of an isosceles triangle is 12 feet. What is the perimeter, if the base measures 7 feet?

31 feet

**PREVIEW**

Gain complete access to the largest collection of worksheets in all subjects!

Members, please log in to download this worksheet.

Not a member? Please sign up to gain complete access.

[www.mathworksheets4kids.com](http://www.mathworksheets4kids.com)