

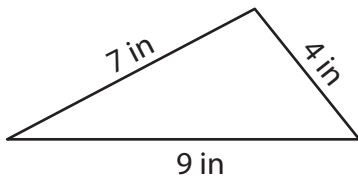
Name : \_\_\_\_\_

## Perimeter of a Triangle

T2L1S4

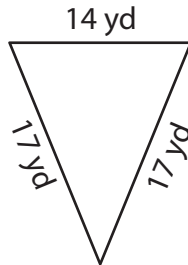
Find the perimeter of each triangle.

1)

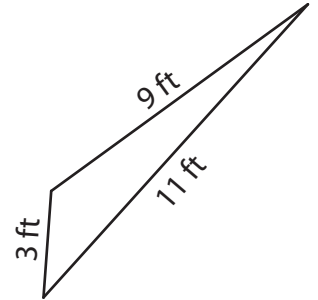


Perimeter = \_\_\_\_\_

2)

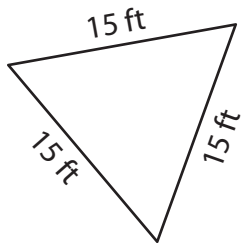


3)



Perimeter = \_\_\_\_\_

4)



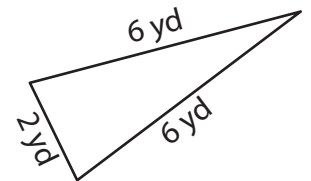
Perimeter = \_\_\_\_\_

**PREVIEW**  
Gain complete access to the largest collection of worksheets in all subjects!

Members, please log in to download this worksheet.

Not a member? Please sign up to gain complete access.

[www.mathworksheets4kids.com](http://www.mathworksheets4kids.com)



Perimeter = \_\_\_\_\_

7) What is the perimeter of

d 12 feet?

\_\_\_\_\_

8) The base of an isosceles triangle measures 18 inches. Determine the perimeter of the isosceles triangle, if the two equal sides measure 19 inches each.

\_\_\_\_\_

Name : \_\_\_\_\_

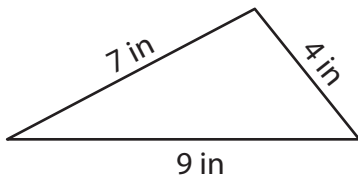
## Answer key

### Perimeter of a Triangle

T2L1S4

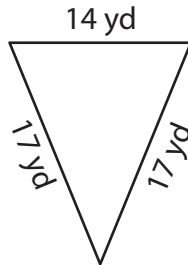
Find the perimeter of each triangle.

1)



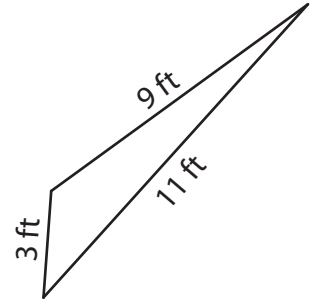
Perimeter = 20 in

2)

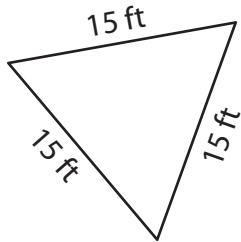


Perimeter = 23 ft

3)



4)



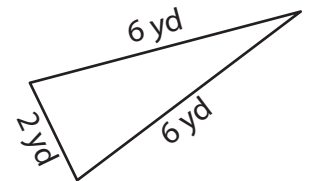
Perimeter = 45 ft

Gain complete access to the largest collection of worksheets in all subjects!

Members, please log in to download this worksheet.

Not a member? Please sign up to gain complete access.

[www.mathworksheets4kids.com](http://www.mathworksheets4kids.com)



Perimeter = 14 yd

7) What is the perimeter of

d 12 feet?

27 feet

8) The base of an isosceles triangle measures 18 inches. Determine the perimeter of the isosceles triangle, if the two equal sides measure 19 inches each.

56 inches