

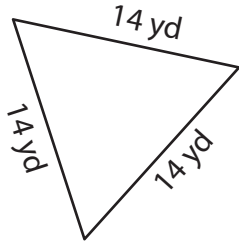
Name : _____

Perimeter of a Triangle

T2L155

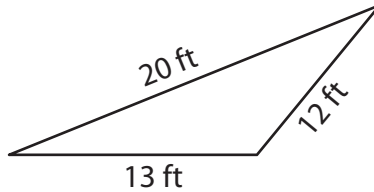
Find the perimeter of each triangle.

1)

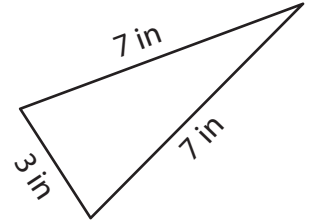


Perimeter = _____

2)

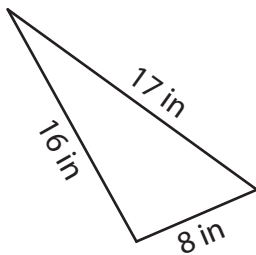


3)



Perimeter = _____

4)



Perimeter = _____

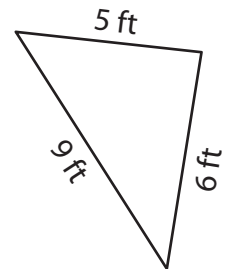
PREVIEW

Gain complete access to the largest collection of worksheets in all subjects!

Members, please log in to download this worksheet.

Not a member? Please sign up to gain complete access.

www.mathworksheets4kids.com



Perimeter = _____

7) An isosceles triangle has two equal sides of 5 inches each and a base of 10 inches, find the perimeter of the triangle.

Perimeter = _____

8) The side lengths of a triangle are 3 yards, 2 yards and 4 yards. What is the perimeter of the triangle?

Name : _____

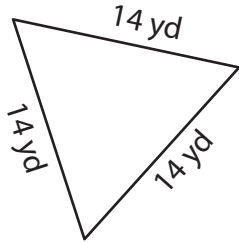
Answer key

Perimeter of a Triangle

T2L155

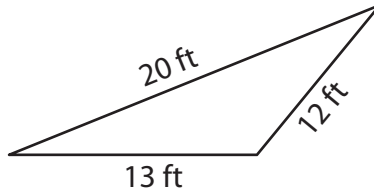
Find the perimeter of each triangle.

1)



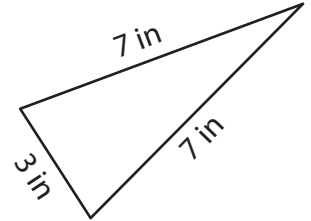
Perimeter = 42 yd

2)

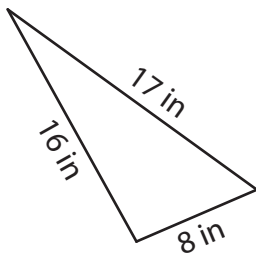


Perimeter = 17 in

3)



4)



Perimeter = 41 in

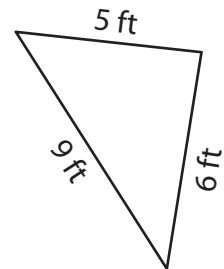
PREVIEW

Gain complete access to the largest collection of worksheets in all subjects!

Members, please log in to download this worksheet.

Not a member? Please sign up to gain complete access.

www.mathworksheets4kids.com



Perimeter = 20 ft

7) An isosceles triangle has two equal sides of 15 inches each and a base of 6 inches. Find the perimeter of the triangle.

Each of the equal sides is 15 inches, and the length of the base is 6 inches,

46 inches

8) The side lengths of a triangle are 3 yards, 2 yards and 4 yards. What is the perimeter of the triangle?

9 yards