

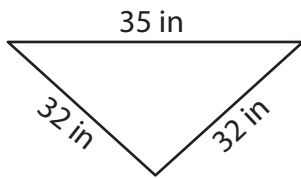
Name : \_\_\_\_\_

## Perimeter of a Triangle

T2L2S1

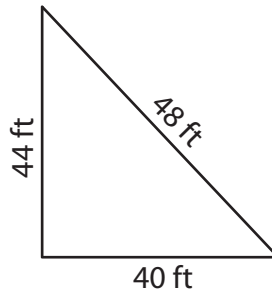
Find the perimeter of each triangle.

1)

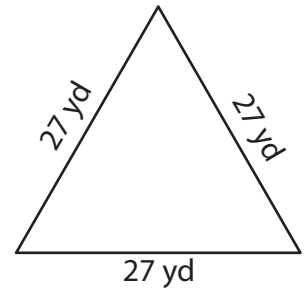


Perimeter = \_\_\_\_\_

2)

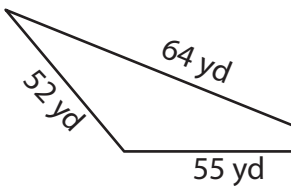


3)



Perimeter = \_\_\_\_\_

4)



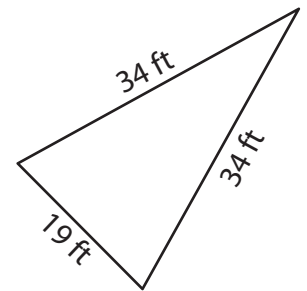
Perimeter = \_\_\_\_\_

**PREVIEW**  
Gain complete access to the largest collection of worksheets in all subjects!

Members, please log in to download this worksheet.

Not a member? Please sign up to gain complete access.

[www.mathworksheets4kids.com](http://www.mathworksheets4kids.com)



Perimeter = \_\_\_\_\_

7) The side lengths of a triangle are 12 cm, 15 cm and 18 cm. Find its perimeter.

Perimeter = \_\_\_\_\_

8) Find the perimeter of the triangle, if the side lengths of the triangle are 17 yards, 17 yards and 33 yards.

Name : \_\_\_\_\_

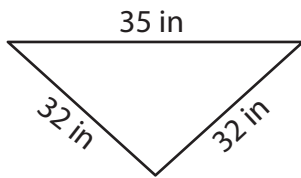
## Answer key

T2L2S1

### Perimeter of a Triangle

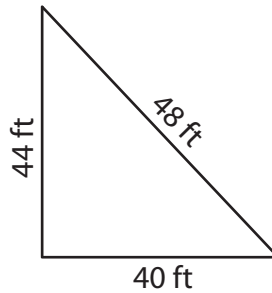
Find the perimeter of each triangle.

1)

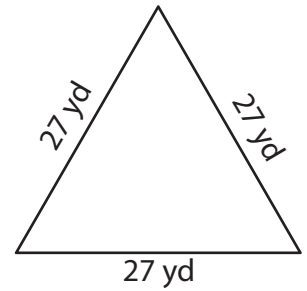


Perimeter = 99 in

2)

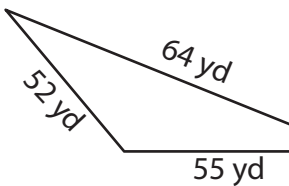


3)



Perimeter = 81 yd

4)



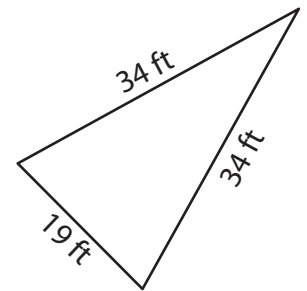
Perimeter = 171 yd

**PREVIEW**  
Gain complete access to the largest collection of worksheets in all subjects!

Members, please log in to download this worksheet.

Not a member? Please sign up to gain complete access.

[www.mathworksheets4kids.com](http://www.mathworksheets4kids.com)



Perimeter = 87 ft

7) The side lengths of a triangle are 45 feet, 53 feet and 55 feet. Find the perimeter.

Perimeter.

153 feet

8) Find the perimeter of the triangle, if the side lengths of the triangle are 17 yards, 17 yards and 33 yards.

67 yards