

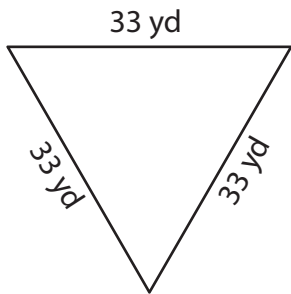
Name : _____

Perimeter of a Triangle

T2L2S3

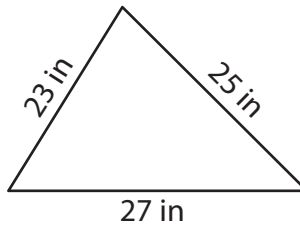
Find the perimeter of each triangle.

1)

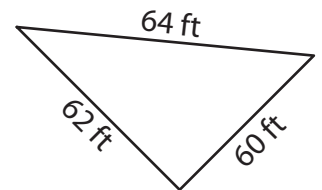


Perimeter = _____

2)

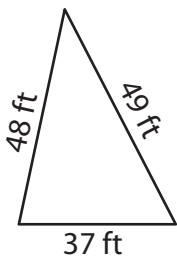


3)



Perimeter = _____

4)



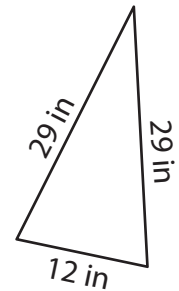
Perimeter = _____

PREVIEW
Gain complete access to the largest collection of worksheets in all subjects!

Members, please log in to download this worksheet.

Not a member? Please sign up to gain complete access.

www.mathworksheets4kids.com



Perimeter = _____

7) The length of each of the two equal sides is 34 inches and the base measures 34 inches.

What is the perimeter, if

8) Find the perimeter of an equilateral triangle whose side length is 42 feet.

Name : _____

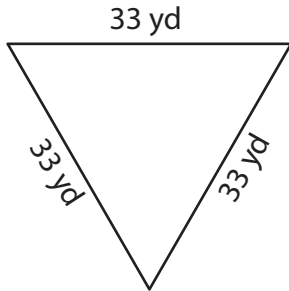
Answer key

T2L2S3

Perimeter of a Triangle

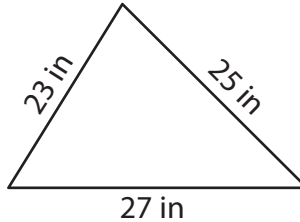
Find the perimeter of each triangle.

1)

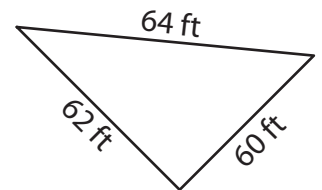


Perimeter = 99 yd

2)

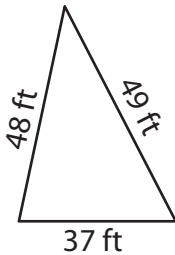


3)



Perimeter = 186 ft

4)



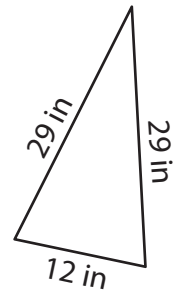
Perimeter = 134 ft

PREVIEW
Gain complete access to the largest collection of worksheets in all subjects!

Members, please log in to download this worksheet.

Not a member? Please sign up to gain complete access.

www.mathworksheets4kids.com



Perimeter = 70 in

7) The length of each of the two equal sides is 37 inches and the base measures 34 inches.

What is the perimeter, if

110 inches

8) Find the perimeter of an equilateral triangle whose side length is 42 feet.

126 feet