

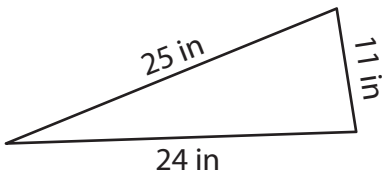
Name : \_\_\_\_\_

T2L2S4

## Perimeter of a Triangle

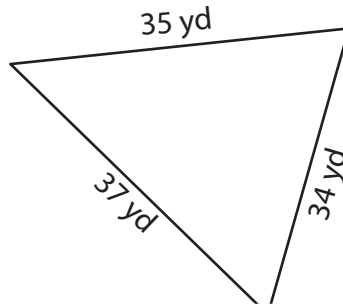
Find the perimeter of each triangle.

1)

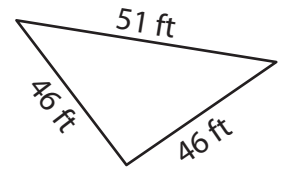


Perimeter = \_\_\_\_\_

2)

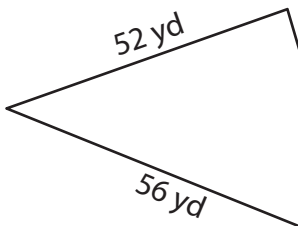


3)



Perimeter = \_\_\_\_\_

4)



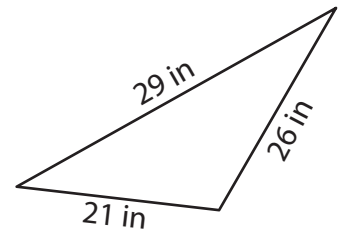
Perimeter = \_\_\_\_\_

Gain complete access to the largest collection of worksheets in all subjects!

Members, please log in to download this worksheet.

Not a member? Please sign up to gain complete access.

[www.mathworksheets4kids.com](http://www.mathworksheets4kids.com)



Perimeter = \_\_\_\_\_

7) Find the perimeter of the

60 feet.

8) What is the perimeter of the triangle, if the side lengths of the triangle are 42 inches, 40 inches and 36 inches?

Name : \_\_\_\_\_

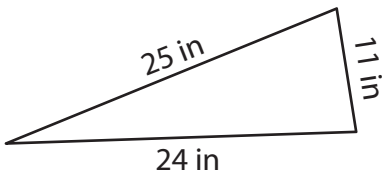
## Answer key

T2L2S4

### Perimeter of a Triangle

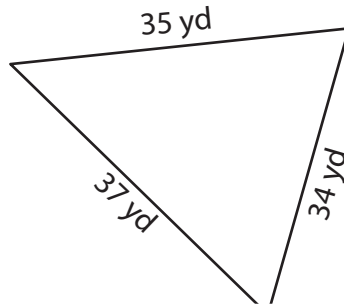
Find the perimeter of each triangle.

1)

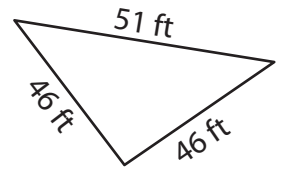


Perimeter = 60 in

2)

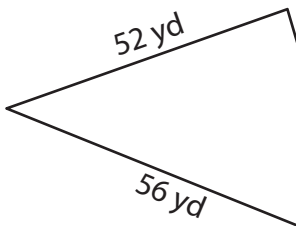


3)

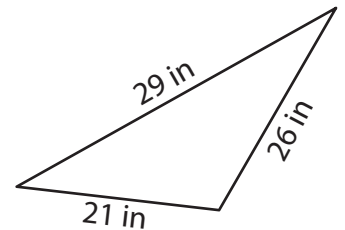


Perimeter = 143 ft

4)



Perimeter = 158 yd



Perimeter = 76 in

7) Find the perimeter of the

60 feet.

187 feet

8) What is the perimeter of the triangle, if the side lengths of the triangle are 42 inches, 40 inches and 36 inches?

118 inches

**PREVIEW**

Gain complete access to the largest collection of worksheets in all subjects!

Members, please log in to download this worksheet.

Not a member? Please sign up to gain complete access.

[www.mathworksheets4kids.com](http://www.mathworksheets4kids.com)