

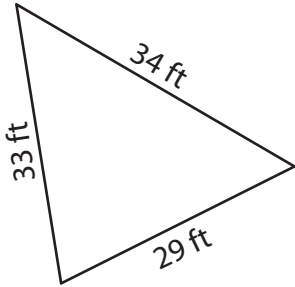
Name : _____

Perimeter of a Triangle

T2L2S5

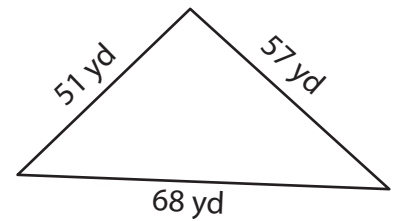
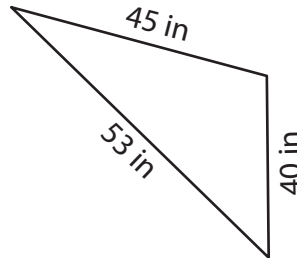
Find the perimeter of each triangle.

1)



Perimeter = _____

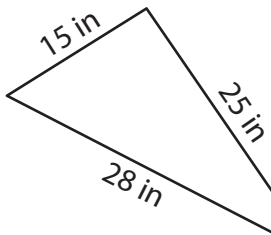
2)



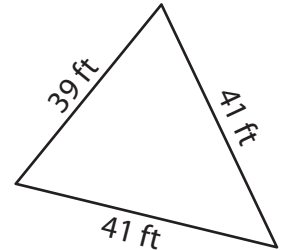
3)

Perimeter = _____

4)



Perimeter = _____



Perimeter = _____

7) The side length of an equilateral triangle is 45 feet.

Find its perimeter.

8) The side lengths of a triangle are 49 feet, 47 feet and 31 feet. Determine its perimeter.

PREVIEW

Gain complete access to the largest collection of worksheets in all subjects!

Members, please log in to download this worksheet.

Not a member? Please sign up to gain complete access.

www.mathworksheets4kids.com

Name : _____

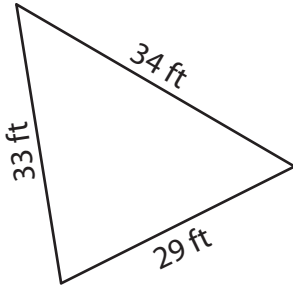
Answer key

Perimeter of a Triangle

T2L2S5

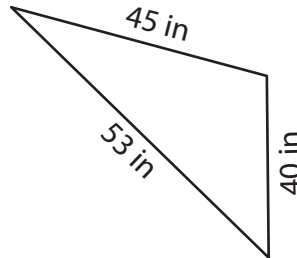
Find the perimeter of each triangle.

1)



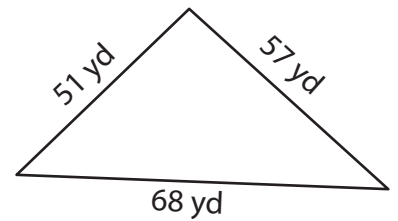
Perimeter = 96 ft

2)

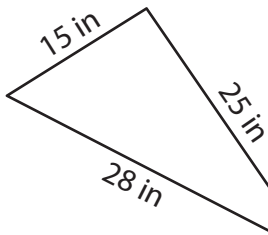


Perimeter = 176 yd

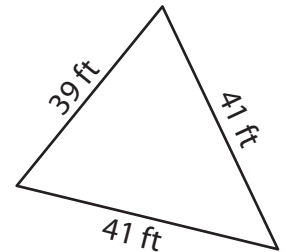
3)



4)



Perimeter = 68 in



Perimeter = 121 ft

7) The side length of an equilateral triangle is 22 yards.

66 yards

8) The side length of an equilateral triangle is 41 feet.

127 feet

PREVIEW

Gain complete access to the largest collection of worksheets in all subjects!

Members, please log in to download this worksheet.

Not a member? Please sign up to gain complete access.

www.mathworksheets4kids.com