

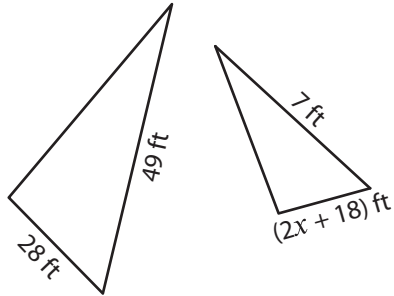
Name : _____

Similar Triangles

T153

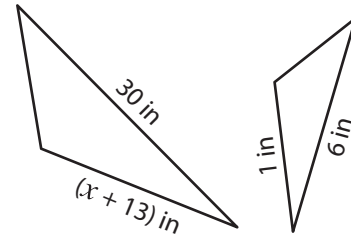
Find the value of x , if each pair of triangles is similar.

1)



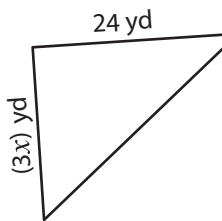
$x =$ _____

2)



$x =$ _____

3)



$x =$ _____

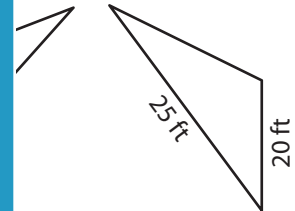
PREVIEW

Gain complete access to the largest collection of worksheets in all subjects!

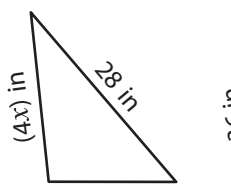
Members, please log in to download this worksheet.

Not a member? Please sign up to gain complete access.

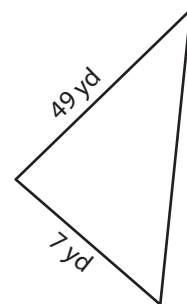
www.mathworksheets4kids.com



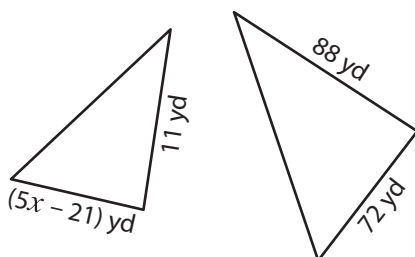
5)



$x =$ _____

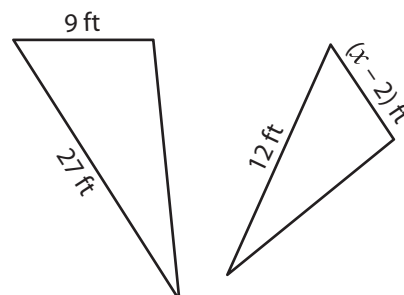


7)



$x =$ _____

8)

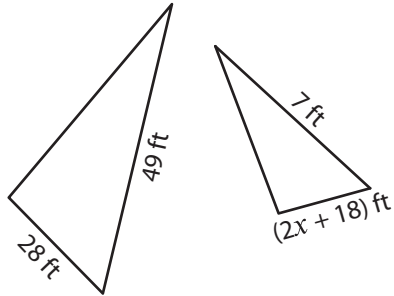


$x =$ _____

Similar Triangles

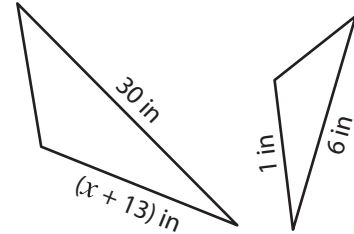
Find the value of x , if each pair of triangles is similar.

1)



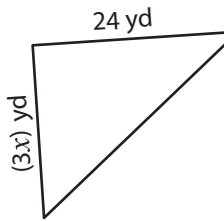
$x = \underline{\quad -7 \quad}$

2)

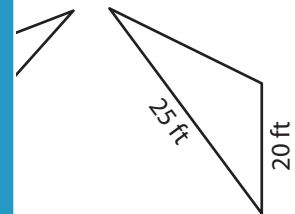


$x = \underline{\quad -8 \quad}$

3)

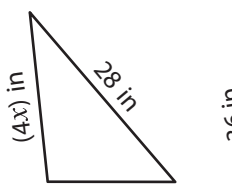


$x = \underline{\quad \quad}$

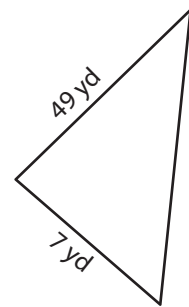


$\underline{\quad 15 \quad}$

5)

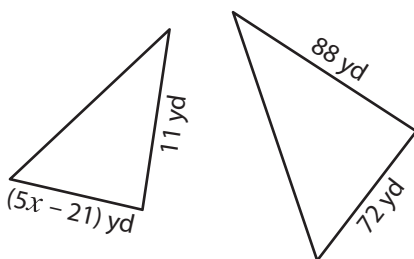


$x = \underline{\quad \quad}$



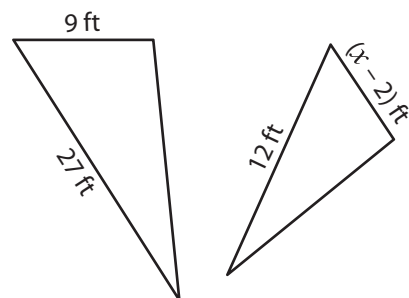
$\underline{\quad -10 \quad}$

7)



$x = \underline{\quad 6 \quad}$

8)



$x = \underline{\quad 6 \quad}$

PREVIEW

Gain complete access to the largest collection of worksheets in all subjects!

Members, please log in to download this worksheet.

Not a member? Please sign up to gain complete access.

www.mathworksheets4kids.com