

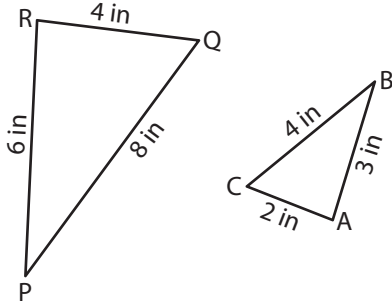
Name : _____

Similarity Criteria

T1S1

Identify the similarity criterion and complete the similarity statement.

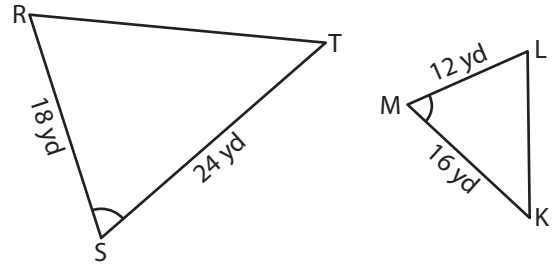
1)



Similarity Criterion : _____

$\triangle ABC \sim$ _____

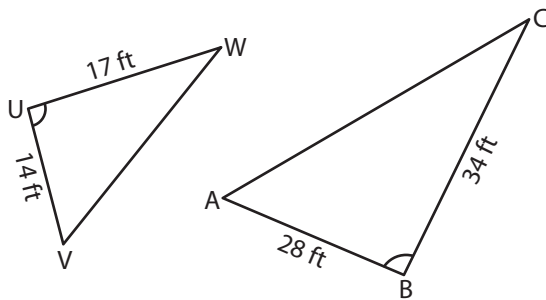
2)



Similarity Criterion : _____

$\triangle RST \sim$ _____

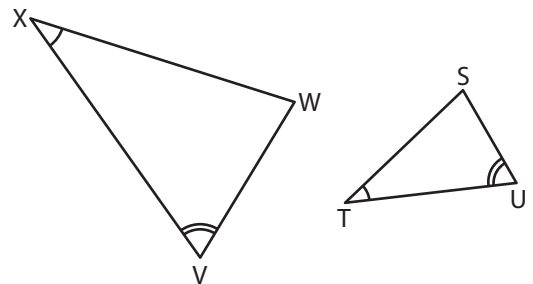
3)



Similarity Criterion : _____

$\triangle UVW \sim$ _____

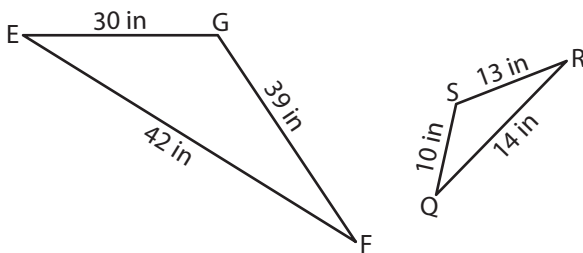
4)



Similarity Criterion : _____

$\triangle STU \sim$ _____

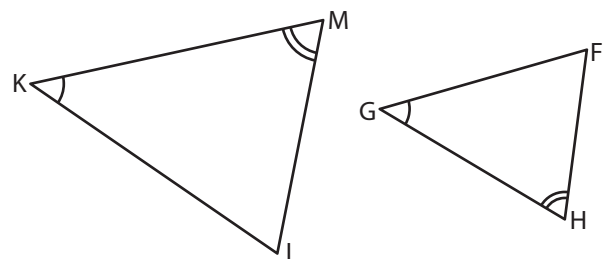
5)



Similarity Criterion : _____

$\triangle EFG \sim$ _____

6)



Similarity Criterion : _____

$\triangle KLM \sim$ _____

Name : _____

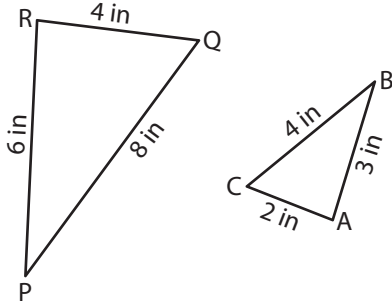
Answer key

Similarity Criteria

T1S1

Identify the similarity criterion and complete the similarity statement.

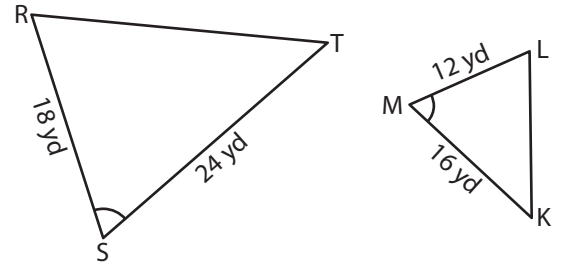
1)



Similarity Criterion : SSS

$\triangle ABC \sim \triangle RPQ$

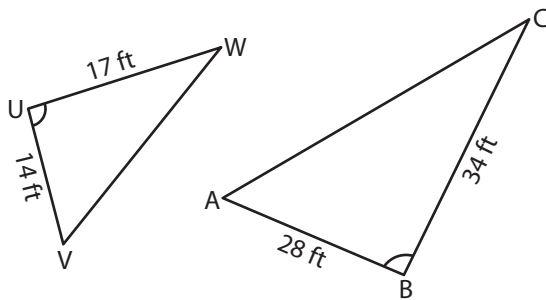
2)



Similarity Criterion : SAS

$\triangle RST \sim \triangle LMK$

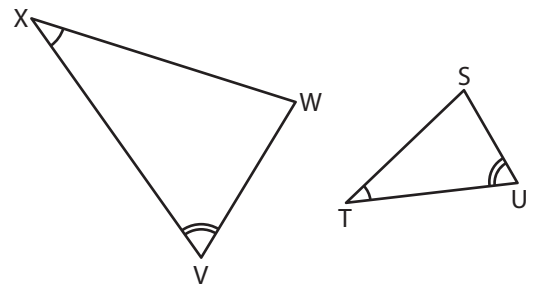
3)



Similarity Criterion : SAS

$\triangle UVW \sim \triangle ABC$

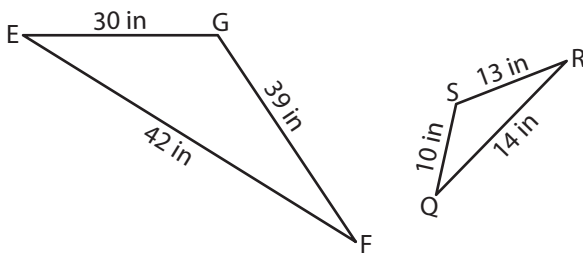
4)



Similarity Criterion : AA

$\triangle STU \sim \triangle XWV$

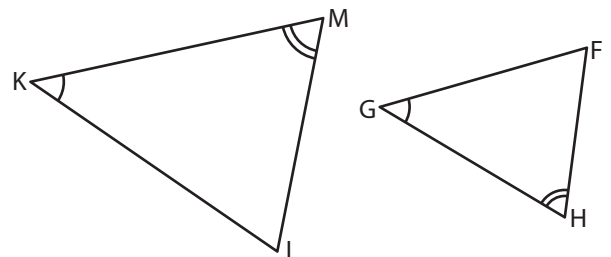
5)



Similarity Criterion : SSS

$\triangle EFG \sim \triangle QRS$

6)



Similarity Criterion : AA

$\triangle KLM \sim \triangle GFH$