

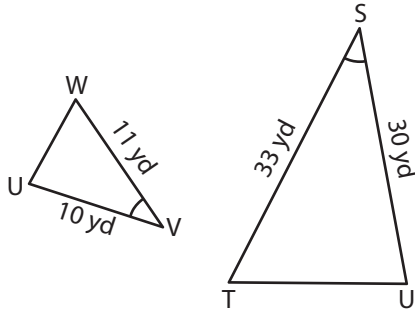
Name : _____

Similarity Criteria

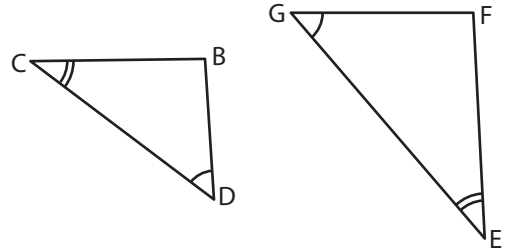
T1S2

Identify the similarity criterion and complete the similarity statement.

1)



2)



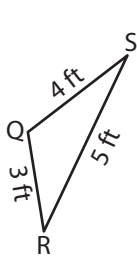
Similarity Criterion : _____

$\Delta STU \sim$ _____

Similarity Criterion : _____

$\Delta BCD \sim$ _____

3)

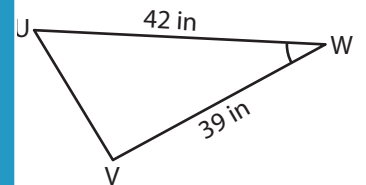


PREVIEW
Gain complete access to the largest collection of worksheets in all subjects!

Members, please log in to download this worksheet.

Not a member? Please sign up to gain complete access.

www.mathworksheets4kids.com



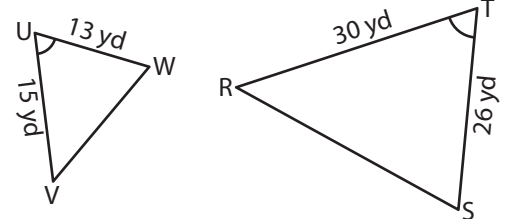
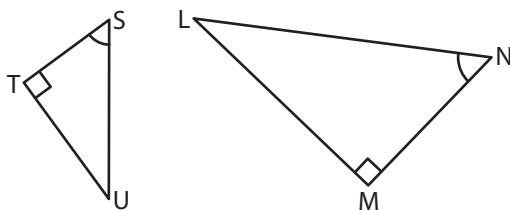
Similarity Criterion : _____

$\Delta QRS \sim$ _____

Similarity Criterion : _____

$\Delta UVW \sim$ _____

5)



Similarity Criterion : _____

$\Delta LMN \sim$ _____

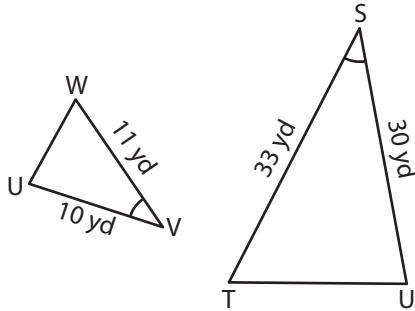
Similarity Criterion : _____

$\Delta UVW \sim$ _____

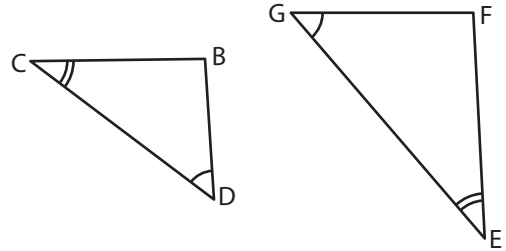
Similarity Criteria

Identify the similarity criterion and complete the similarity statement.

1)



2)



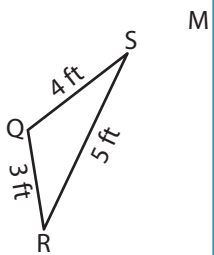
Similarity Criterion : _____

$\Delta STU \sim$ _____

Similarity Criterion : AA

ΔFEG

3)

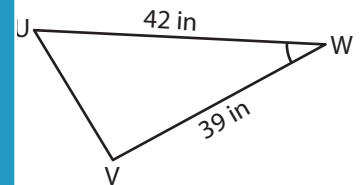


PREVIEW
Gain complete access to the largest collection of worksheets in all subjects!

Members, please log in to download this worksheet.

Not a member? Please sign up to gain complete access.

www.mathworksheets4kids.com



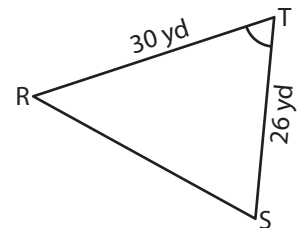
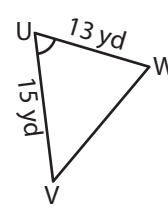
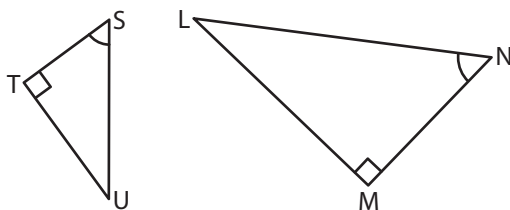
Similarity Criterion : _____

$\Delta QRS \sim$ _____

Similarity Criterion : SAS

ΔWUV

5)



Similarity Criterion : AA

$\Delta LMN \sim$ ΔTUS

Similarity Criterion : SAS

$\Delta UVW \sim$ ΔTRS