

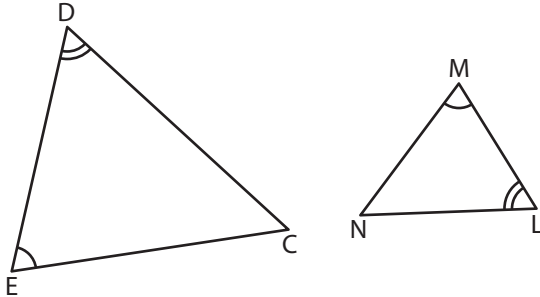
Name : \_\_\_\_\_

# Similarity Criteria

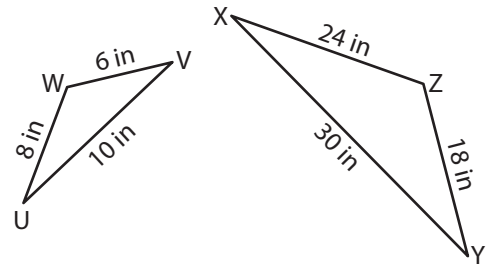
T1S3

Identify the similarity criterion and complete the similarity statement.

1)



2)

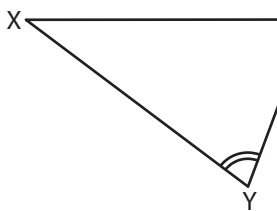


Similarity Criterion : \_\_\_\_\_

$\triangle LMN \sim$  \_\_\_\_\_

Similarity Criterion : \_\_\_\_\_

3)

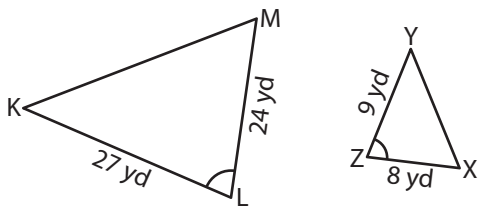


Similarity Criterion : \_\_\_\_\_

$\triangle XYZ \sim$  \_\_\_\_\_

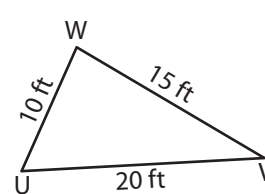
Similarity Criterion : \_\_\_\_\_

5)



Similarity Criterion : \_\_\_\_\_

$\triangle KLM \sim$  \_\_\_\_\_



Similarity Criterion : \_\_\_\_\_

$\triangle ABC \sim$  \_\_\_\_\_

## PREVIEW

Gain complete access to the largest collection of worksheets in all subjects!

Members, please log in to download this worksheet.

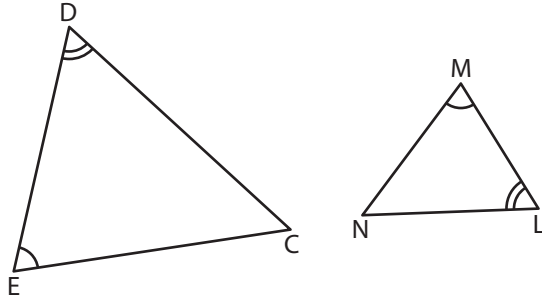
Not a member? Please sign up to gain complete access.

[www.mathworksheets4kids.com](http://www.mathworksheets4kids.com)

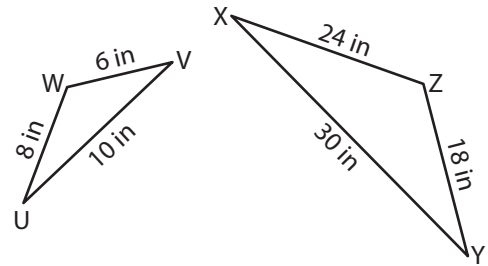
**Similarity Criteria**

Identify the similarity criterion and complete the similarity statement.

1)



2)



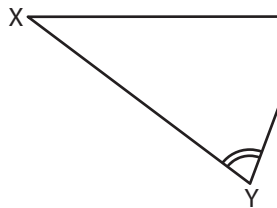
Similarity Criterion : \_\_\_\_\_

$\triangle LMN \sim$  \_\_\_\_\_

Similarity Criterion : SSS

$\triangle XYZ$

3)



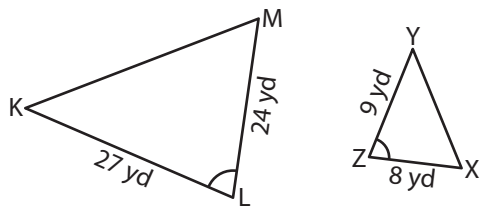
Similarity Criterion : \_\_\_\_\_

$\triangle XYZ \sim$  \_\_\_\_\_

Similarity Criterion : SAS

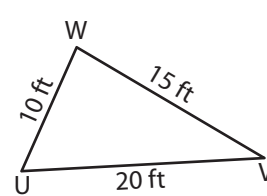
$\triangle EFG$

5)



Similarity Criterion : SAS

$\triangle KLM \sim$   $\triangle YZX$



Similarity Criterion : SSS

$\triangle ABC \sim$   $\triangle WUV$

**PREVIEW**

Gain complete access to the largest collection of worksheets in all subjects!

Members, please log in to download this worksheet.

Not a member? Please sign up to gain complete access.

[www.mathworksheets4kids.com](http://www.mathworksheets4kids.com)