

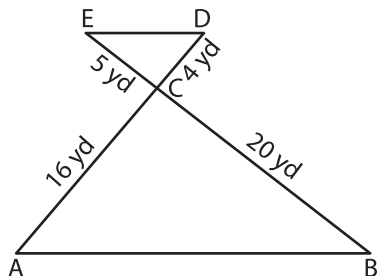
Name : \_\_\_\_\_

# Similarity Criteria

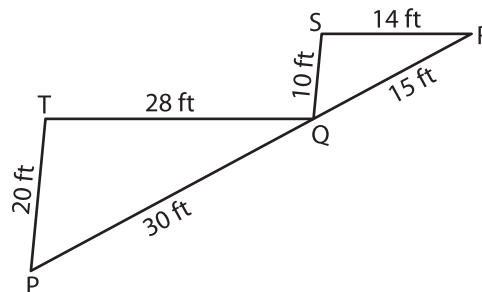
T2S1

Identify the similarity criterion and complete the similarity statement.

1)



2)



Similarity Criterion : \_\_\_\_\_

$\triangle ACB \sim$  \_\_\_\_\_

Similarity Criterion : \_\_\_\_\_

3)

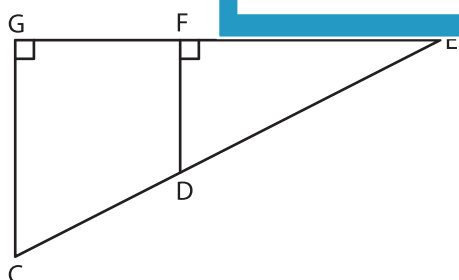


Similarity Criterion : \_\_\_\_\_

$\triangle DEF \sim$  \_\_\_\_\_

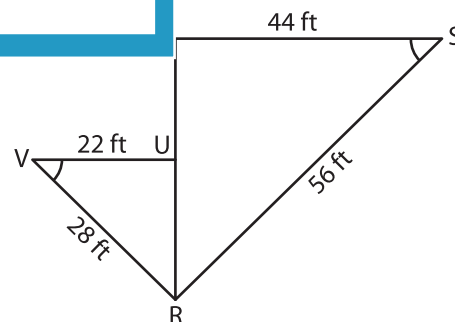
Similarity Criterion : \_\_\_\_\_

5)



Similarity Criterion : \_\_\_\_\_

$\triangle CEG \sim$  \_\_\_\_\_



Similarity Criterion : \_\_\_\_\_

$\triangle RST \sim$  \_\_\_\_\_

## PREVIEW

Gain complete access to the largest collection of worksheets in all subjects!

Members, please log in to download this worksheet.

Not a member? Please sign up to gain complete access.

[www.mathworksheets4kids.com](http://www.mathworksheets4kids.com)