

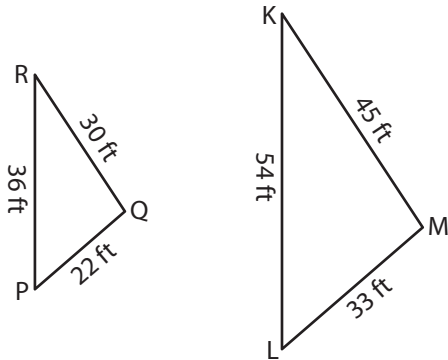
Name : _____

Similarity Statements

L152

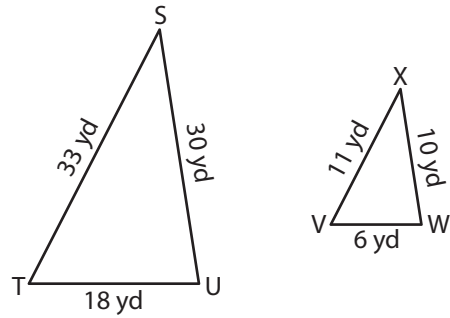
Complete each similarity statement.

1)



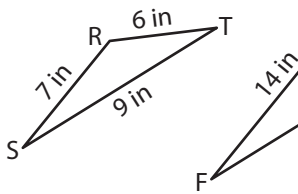
$\triangle PQR \sim$ _____

2)

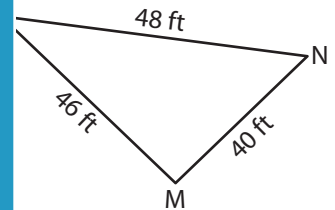


$\triangle STU \sim$ _____

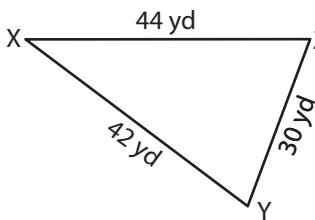
3)



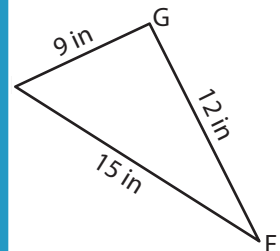
$\triangle RST \sim$ _____



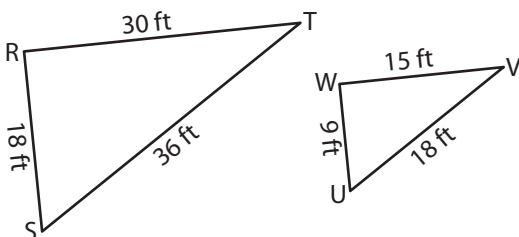
5)



$\triangle XYZ \sim$ _____

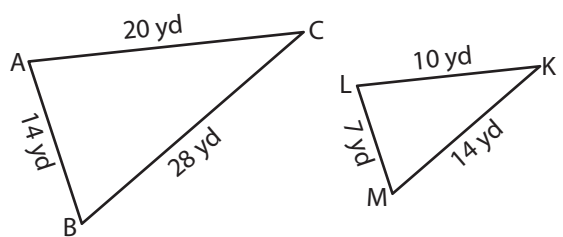


7)



$\triangle UVW \sim$ _____

8)



$\triangle ABC \sim$ _____

PREVIEW

Gain complete access to the largest collection of worksheets in all subjects!

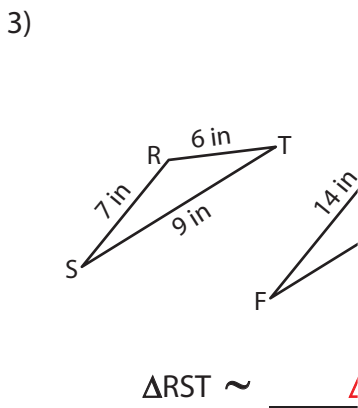
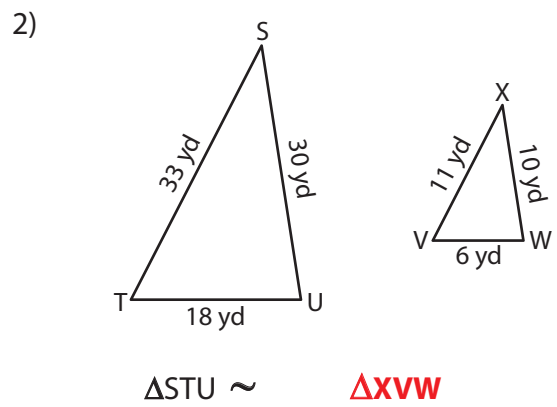
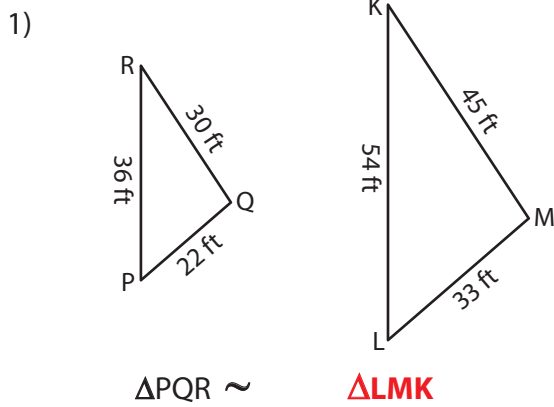
Members, please log in to download this worksheet.

Not a member? Please sign up to gain complete access.

www.mathworksheets4kids.com

Similarity Statements

Complete each similarity statement.



PREVIEW

Gain complete access to the largest collection of worksheets in all subjects!

Members, please log in to download this worksheet.

Not a member? Please sign up to gain complete access.

www.mathworksheets4kids.com

